

# forall $x$

## CALGARY

### Solutions to Selected Exercises



**P. D. Magnus**  
**Tim Button**  
*with additions by*  
**J. Robert Loftis**  
**Robert Trueman**  
*remixed and revised by*  
**Aaron Thomas-Bolduc**  
**Richard Zach**

Fall 2021 $\alpha$

This booklet is based on the solutions booklet *forallx: Cambridge*, by

**Tim Button**

*University of Cambridge*

used under a **CC BY 4.0** license, which is based in turn on *forallx*, by

**P.D. Magnus**

*University at Albany, State University of New York*

used under a **CC BY 4.0** license,  
which was remixed & expanded by

**Aaron Thomas-Bolduc & Richard Zach**

*University of Calgary*

It includes additional material from *forallx* by P.D. Magnus, used under a **CC BY 4.0** license, and from *forallx: Lorain County Remix*, by **Cathal Woods** and J. Robert Loftis, and from *A Modal Logic Primer* by **Robert Trueman**, used with permission.

This work is licensed under a **Creative Commons Attribution 4.0** license. You are free to copy and redistribute the material in any medium or format, and remix, transform, and build upon the material for any purpose, even commercially, under the following terms:

- ▶ You must give appropriate credit, provide a link to the license, and indicate if changes were made. You may do so in any reasonable manner, but not in any way that suggests the licensor endorses you or your use.
- ▶ You may not apply legal terms or technological measures that legally restrict others from doing anything the license permits.

The  $\LaTeX$  source for this book is available on **GitHub**. This version is revision aa59cc9 (2021-06-18).

The preparation of this textbook was made possible by a grant from the **Taylor Institute for Teaching and Learning**.



**UNIVERSITY OF CALGARY**

Taylor Institute for Teaching and Learning

# *Contents*

1	Arguments	1
2	Valid arguments	2
3	Other logical notions	4
5	Connectives	8
6	Sentences of TFL	15
11	Complete truth tables	17
12	Semantic concepts	25
13	Truth table shortcuts	32
14	Partial truth tables	35
16	Basic rules for TFL	43
18	Additional rules for TFL	52
19	Proof-theoretic concepts	56
20	Derived rules	65
21	Soundness and completeness	67
23	Sentences with one quantifier	69
24	Multiple generality	73
25	Identity	78
26	Sentences of FOL	79
27	Definite descriptions	80
30	Truth in FOL	84
32	Using Interpretations	87
34	Basic rules for FOL	89
36	Conversion of quantifiers	108
37	Rules for identity	114
38	Derived rules	125
41	Natural deduction for ML	128
42	Semantics for ML	141
43	Normal forms	144

## CHAPTER 1

# *Arguments*

Highlight the phrase which expresses the conclusion of each of these arguments:

1. It is sunny. So **I should take my sunglasses.**
2. **It must have been sunny.** I did wear my sunglasses, after all.
3. No one but you has had their hands in the cookie-jar. And the scene of the crime is littered with cookie-crumbs. **You're the culprit!**
4. Miss Scarlett and Professor Plum were in the study at the time of the murder. And Reverend Green had the candlestick in the ballroom, and we know that there is no blood on his hands. Hence **Colonel Mustard did it in the kitchen with the lead-piping.** Recall, after all, that the gun had not been fired.

## CHAPTER 2

# *Valid arguments*

A. Which of the following arguments is valid? Which is invalid?

1. Socrates is a man.
  2. All men are carrots.
  - ∴ Socrates is a carrot. Valid
- 
1. Abe Lincoln was either born in Illinois or he was once president.
  2. Abe Lincoln was never president.
  - ∴ Abe Lincoln was born in Illinois. Valid
- 
1. If I pull the trigger, Abe Lincoln will die.
  2. I do not pull the trigger.
  - ∴ Abe Lincoln will not die. Invalid  
*Abe Lincoln might die for some other reason: someone else might pull the trigger; he might die of old age.*
- 
1. Abe Lincoln was either from France or from Luxemborg.
  2. Abe Lincoln was not from Luxemborg.
  - ∴ Abe Lincoln was from France. Valid
- 
1. If the world were to end today, then I would not need to get up tomorrow morning.
  2. I will need to get up tomorrow morning.
  - ∴ The world will not end today. Valid

1. Joe is now 19 years old.
2. Joe is now 87 years old.
- ∴ Bob is now 20 years old.

Valid

An argument is valid if and only if it is impossible for all the premises to be true and the conclusion false. It is impossible for all the premises to be true; so it is certainly impossible that the premises are all true and the conclusion is false.

**B.** Could there be:

1. A valid argument that has one false premise and one true premise? Yes.  
Example: the first argument, above.
2. A valid argument that has only false premises? Yes.  
Example: Socrates is a frog, all frogs are excellent pianists, therefore Socrates is an excellent pianist.
3. A valid argument with only false premises and a false conclusion? Yes.  
The same example will suffice.
4. An invalid argument that can be made valid by the addition of a new premise? Yes.  
Plenty of examples, but let me offer a more general observation. We can *always* make an invalid argument valid, by adding a contradiction into the premises. For an argument is valid if and only if it is impossible for all the premises to be true and the conclusion false. If the premises are contradictory, then it is impossible for them all to be true (and the conclusion false).
5. A valid argument that can be made invalid by the addition of a new premise? No.  
An argument is valid if and only if it is impossible for all the premises to be true and the conclusion false. Adding another premise will only make it harder for the premises all to be true together.

In each case: if so, give an example; if not, explain why not.

## CHAPTER 3

# *Other logical notions*

**A.** For each of the following: Is it necessarily true, necessarily false, or contingent?

1. Caesar crossed the Rubicon. Contingent
2. Someone once crossed the Rubicon. Contingent
3. No one has ever crossed the Rubicon. Contingent
4. If Caesar crossed the Rubicon, then someone has. Necessarily true
5. Even though Caesar crossed the Rubicon, no one has ever crossed the Rubicon. Necessarily false
6. If anyone has ever crossed the Rubicon, it was Caesar. Contingent

**B.** For each of the following: Is it a necessary truth, a necessary falsehood, or contingent?

1. Elephants dissolve in water.
2. Wood is a light, durable substance useful for building things.
3. If wood were a good building material, it would be useful for building things.
4. I live in a three story building that is two stories tall.
5. If gerbils were mammals they would nurse their young.

**C.** Which of the following pairs of sentences are necessarily equivalent?

1. Elephants dissolve in water.  
If you put an elephant in water, it will disintegrate.

2. All mammals dissolve in water.  
If you put an elephant in water, it will disintegrate.
3. George Bush was the 43rd president.  
Barack Obama is the 44th president.
4. Barack Obama is the 44th president.  
Barack Obama was president immediately after the 43rd president.
5. Elephants dissolve in water.  
All mammals dissolve in water.

**D.** Which of the following pairs of sentences are necessarily equivalent?

1. Thelonious Monk played piano.  
John Coltrane played tenor sax.
2. Thelonious Monk played gigs with John Coltrane.  
John Coltrane played gigs with Thelonious Monk.
3. All professional piano players have big hands.  
Piano player Bud Powell had big hands.
4. Bud Powell suffered from severe mental illness.  
All piano players suffer from severe mental illness.
5. John Coltrane was deeply religious.  
John Coltrane viewed music as an expression of spirituality.

**E.** Consider the following sentences:

- G<sub>1</sub> There are at least four giraffes at the wild animal park.  
 G<sub>2</sub> There are exactly seven gorillas at the wild animal park.  
 G<sub>3</sub> There are not more than two Martians at the wild animal park.  
 G<sub>4</sub> Every giraffe at the wild animal park is a Martian.

Now consider each of the following collections of sentences. Which are jointly possible? Which are jointly impossible?

1. Sentences G<sub>2</sub>, G<sub>3</sub>, and G<sub>4</sub> Jointly possible
2. Sentences G<sub>1</sub>, G<sub>3</sub>, and G<sub>4</sub> Jointly impossible
3. Sentences G<sub>1</sub>, G<sub>2</sub>, and G<sub>4</sub> Jointly possible
4. Sentences G<sub>1</sub>, G<sub>2</sub>, and G<sub>3</sub> Jointly possible

**F.** Consider the following sentences.

- M<sub>1</sub> All people are mortal.



M<sub>2</sub> Socrates is a person.

M<sub>3</sub> Socrates will never die.

M<sub>4</sub> Socrates is mortal.

Which combinations of sentences are jointly possible? Mark each “possible” or “impossible.”

1. Sentences M<sub>1</sub>, M<sub>2</sub>, and M<sub>3</sub>
2. Sentences M<sub>2</sub>, M<sub>3</sub>, and M<sub>4</sub>
3. Sentences M<sub>2</sub> and M<sub>3</sub>
4. Sentences M<sub>1</sub> and M<sub>4</sub>
5. Sentences M<sub>1</sub>, M<sub>2</sub>, M<sub>3</sub>, and M<sub>4</sub>

**G.** Which of the following is possible? If it is possible, give an example. If it is not possible, explain why.

1. A valid argument that has one false premise and one true premise  
Yes: ‘All whales are mammals (*true*). All mammals are plants (*false*). So all whales are plants.’
2. A valid argument that has a false conclusion  
Yes. (See example from previous exercise.)
3. A valid argument, the conclusion of which is a necessary falsehood  
Yes: ‘ $1 + 1 = 3$ . So  $1 + 2 = 4$ .’
4. An invalid argument, the conclusion of which is a necessary truth  
No. If the conclusion is necessarily true, then there is no way to make it false, and hence no way to make it false whilst making all the premises true.
5. A necessary truth that is contingent  
No. If a sentence is a necessary truth, it cannot possibly be false, but a contingent sentence can be false.
6. Two necessarily equivalent sentences, both of which are necessary truths  
Yes: ‘ $4$  is even’, ‘ $4$  is divisible by  $2$ ’.
7. Two necessarily equivalent sentences, one of which is a necessary truth and one of which is contingent  
No. A necessary truth cannot possibly be false, while a contingent sentence can be false. So in any situation in which the contingent sentence is false, it will have a different truth value from the necessary truth. Thus they will not necessarily have the same truth value, and so will not be equivalent.

8. Two necessarily equivalent sentences that together are jointly impossible

Yes: ' $1 + 1 = 4$ ' and ' $1 + 1 = 3$ '.

9. A jointly possible collection of sentences that contains a necessary falsehood

No. If a sentence is necessarily false, there is no way to make it true, let alone it along with all the other sentences.

10. A jointly impossible set of sentences that contains a necessary truth

Yes: ' $1 + 1 = 4$ ' and ' $1 + 1 = 2$ '.

**H.** Which of the following is possible? If it is possible, give an example. If it is not possible, explain why.

1. A valid argument, whose premises are all necessary truths, and whose conclusion is contingent
2. A valid argument with true premises and a false conclusion
3. A jointly possible collection of sentences that contains two sentences that are not necessarily equivalent
4. A jointly possible collection of sentences, all of which are contingent
5. A false necessary truth
6. A valid argument with false premises
7. A necessarily equivalent pair of sentences that are not jointly possible
8. A necessary truth that is also a necessary falsehood
9. A jointly possible collection of sentences that are all necessary falsehoods

## CHAPTER 5

# Connectives

**A.** Using the symbolization key given, symbolize each English sentence in TFL.

*M*: Those creatures are men in suits.

*C*: Those creatures are chimpanzees.

*G*: Those creatures are gorillas.

1. Those creatures are not men in suits.  
 $\neg M$
2. Those creatures are men in suits, or they are not.  
 $(M \vee \neg M)$
3. Those creatures are either gorillas or chimpanzees.  
 $(G \vee C)$
4. Those creatures are neither gorillas nor chimpanzees.  
 $\neg(C \vee G)$
5. If those creatures are chimpanzees, then they are neither gorillas nor men in suits.  
 $(C \rightarrow \neg(G \vee M))$
6. Unless those creatures are men in suits, they are either chimpanzees or they are gorillas.  
 $(M \vee (C \vee G))$

**B.** Using the symbolization key given, symbolize each English sentence in TFL.

*A*: Mister Ace was murdered.

*B*: The butler did it.

*C*: The cook did it.

*D*: The Duchess is lying.

*E*: Mister Edge was murdered.

*F*: The murder weapon was a frying pan.

1. Either Mister Ace or Mister Edge was murdered.  
 $(A \vee E)$
2. If Mister Ace was murdered, then the cook did it.  
 $(A \rightarrow C)$
3. If Mister Edge was murdered, then the cook did not do it.  
 $(E \rightarrow \neg C)$
4. Either the butler did it, or the Duchess is lying.  
 $(B \vee D)$
5. The cook did it only if the Duchess is lying.  
 $(C \rightarrow D)$
6. If the murder weapon was a frying pan, then the culprit must have been the cook.  
 $(F \rightarrow C)$
7. If the murder weapon was not a frying pan, then the culprit was either the cook or the butler.  
 $(\neg F \rightarrow (C \vee B))$
8. Mister Ace was murdered if and only if Mister Edge was not murdered.  
 $(A \leftrightarrow \neg E)$
9. The Duchess is lying, unless it was Mister Edge who was murdered.  
 $(D \vee E)$
10. If Mister Ace was murdered, he was done in with a frying pan.  
 $(A \rightarrow F)$
11. Since the cook did it, the butler did not.  
 $(C \wedge \neg B)$
12. Of course the Duchess is lying!  
*D*

**C.** Using the symbolization key given, symbolize each English sentence in TFL.

$E_1$ : Ava is an electrician.

$E_2$ : Harrison is an electrician.

$F_1$ : Ava is a firefighter.

$F_2$ : Harrison is a firefighter.

$S_1$ : Ava is satisfied with her career.

$S_2$ : Harrison is satisfied with his career.

1. Ava and Harrison are both electricians.  
 $(E_1 \wedge E_2)$
2. If Ava is a firefighter, then she is satisfied with her career.  
 $(F_1 \rightarrow S_1)$
3. Ava is a firefighter, unless she is an electrician.  
 $(F_1 \vee E_1)$
4. Harrison is an unsatisfied electrician.  
 $(E_2 \wedge \neg S_2)$
5. Neither Ava nor Harrison is an electrician.  
 $\neg(E_1 \vee E_2)$
6. Both Ava and Harrison are electricians, but neither of them find it satisfying.  
 $((E_1 \wedge E_2) \wedge \neg(S_1 \vee S_2))$
7. Harrison is satisfied only if he is a firefighter.  
 $(S_2 \rightarrow F_2)$
8. If Ava is not an electrician, then neither is Harrison, but if she is, then he is too.  
 $((\neg E_1 \rightarrow \neg E_2) \wedge (E_1 \rightarrow E_2))$
9. Ava is satisfied with her career if and only if Harrison is not satisfied with his.  
 $(S_1 \leftrightarrow \neg S_2)$
10. If Harrison is both an electrician and a firefighter, then he must be satisfied with his work.  
 $((E_2 \wedge F_2) \rightarrow S_2)$
11. It cannot be that Harrison is both an electrician and a firefighter.  
 $\neg(E_2 \wedge F_2)$
12. Harrison and Ava are both firefighters if and only if neither of them is an electrician.  
 $((F_2 \wedge F_1) \leftrightarrow \neg(E_2 \vee E_1))$

**D.** Using the symbolization key given, translate each English-language sentence into TFL.

$J_1$ : John Coltrane played tenor sax.

$J_2$ : John Coltrane played soprano sax.

$J_3$ : John Coltrane played tuba

$M_1$ : Miles Davis played trumpet

$M_2$ : Miles Davis played tuba

1. John Coltrane played tenor and soprano sax.

- $J_1 \wedge J_2$
- Neither Miles Davis nor John Coltrane played tuba.  
 $\neg(M_2 \vee J_3)$  or  $\neg M_2 \wedge \neg J_3$
  - John Coltrane did not play both tenor sax and tuba.  
 $\neg(J_1 \wedge J_3)$  or  $\neg J_1 \vee \neg J_3$
  - John Coltrane did not play tenor sax unless he also played soprano sax.  
 $\neg J_1 \vee J_2$
  - John Coltrane did not play tuba, but Miles Davis did.  
 $\neg J_3 \wedge M_2$
  - Miles Davis played trumpet only if he also played tuba.  
 $M_1 \rightarrow M_2$
  - If Miles Davis played trumpet, then John Coltrane played at least one of these three instruments: tenor sax, soprano sax, or tuba.  
 $M_1 \rightarrow (J_1 \vee (J_2 \vee J_3))$
  - If John Coltrane played tuba then Miles Davis played neither trumpet nor tuba.  
 $J_3 \rightarrow \neg(M_1 \vee M_2)$  or  $J_3 \rightarrow (\neg M_1 \wedge \neg M_2)$
  - Miles Davis and John Coltrane both played tuba if and only if Coltrane did not play tenor sax and Miles Davis did not play trumpet.  
 $(J_3 \wedge M_2) \leftrightarrow (\neg J_1 \wedge \neg M_1)$  or  $(J_3 \wedge M_2) \leftrightarrow \neg(J_1 \vee M_1)$

E. Give a symbolization key and symbolize the following English sentences in TFL.

*A*: Alice is a spy.

*B*: Bob is a spy.

*C*: The code has been broken.

*G*: The German embassy will be in an uproar.

- Alice and Bob are both spies.  
 $(A \wedge B)$
- If either Alice or Bob is a spy, then the code has been broken.  
 $((A \vee B) \rightarrow C)$
- If neither Alice nor Bob is a spy, then the code remains unbroken.  
 $(\neg(A \vee B) \rightarrow \neg C)$
- The German embassy will be in an uproar, unless someone has broken the code.  
 $(G \vee C)$

5. Either the code has been broken or it has not, but the German embassy will be in an uproar regardless.

$$((C \vee \neg C) \wedge G)$$

6. Either Alice or Bob is a spy, but not both.

$$((A \vee B) \wedge \neg(A \wedge B))$$

**F.** Give a symbolization key and symbolize the following English sentences in TFL.

*F*: There is food to be found in the pridelands.

*R*: Rafiki will talk about squashed bananas.

*A*: Simba is alive.

*K*: Scar will remain as king.

1. If there is food to be found in the pridelands, then Rafiki will talk about squashed bananas.

$$(F \rightarrow R)$$

2. Rafiki will talk about squashed bananas unless Simba is alive.

$$(R \vee A)$$

3. Rafiki will either talk about squashed bananas or he won't, but there is food to be found in the pridelands regardless.

$$((R \vee \neg R) \wedge F)$$

4. Scar will remain as king if and only if there is food to be found in the pridelands.

$$(K \leftrightarrow F)$$

5. If Simba is alive, then Scar will not remain as king.

$$(A \rightarrow \neg K)$$

**G.** For each argument, write a symbolization key and symbolize all of the sentences of the argument in TFL.

1. If Dorothy plays the piano in the morning, then Roger wakes up cranky. Dorothy plays piano in the morning unless she is distracted. So if Roger does not wake up cranky, then Dorothy must be distracted.

*P*: Dorothy plays the Piano in the morning.

*C*: Roger wakes up cranky.

*D*: Dorothy is distracted.

$$(P \rightarrow C), (P \vee D), (\neg C \rightarrow D)$$

2. It will either rain or snow on Tuesday. If it rains, Neville will be sad. If it snows, Neville will be cold. Therefore, Neville will either be sad or cold on Tuesday.

$T_1$ : It rains on Tuesday  
 $T_2$ : It snows on Tuesday  
 $S$ : Neville is sad on Tuesday  
 $C$ : Neville is cold on Tuesday

$(T_1 \vee T_2), (T_1 \rightarrow S), (T_2 \rightarrow C), (S \vee C)$

3. If Zoog remembered to do his chores, then things are clean but not neat. If he forgot, then things are neat but not clean. Therefore, things are either neat or clean; but not both.

$Z$ : Zoog remembered to do his chores  
 $C$ : Things are clean  
 $N$ : Things are neat

$(Z \rightarrow (C \wedge \neg N)), (\neg Z \rightarrow (N \wedge \neg C)), ((N \vee C) \wedge \neg(N \wedge C)).$

**H.** For each argument, write a symbolization key and translate the argument as well as possible into TFL. The part of the passage in italics is there to provide context for the argument, and doesn't need to be symbolized.

1. It is going to rain soon. I know because my leg is hurting, and my leg hurts if it's going to rain.
2. *Spider-man tries to figure out the bad guy's plan.* If Doctor Octopus gets the uranium, he will blackmail the city. I am certain of this because if Doctor Octopus gets the uranium, he can make a dirty bomb, and if he can make a dirty bomb, he will blackmail the city.
3. *A westerner tries to predict the policies of the Chinese government.* If the Chinese government cannot solve the water shortages in Beijing, they will have to move the capital. They don't want to move the capital. Therefore they must solve the water shortage. But the only way to solve the water shortage is to divert almost all the water from the Yangzi river northward. Therefore the Chinese government will go with the project to divert water from the south to the north.

**I.** We symbolized an *exclusive or* using ' $\vee$ ', ' $\wedge$ ', and ' $\neg$ '. How could you symbolize an *exclusive or* using only two connectives? Is there any way to symbolize an *exclusive or* using only one connective?

For two connectives, we could offer any of the following:



$$\begin{aligned} & \neg(\mathcal{A} \leftrightarrow \mathcal{B}) \\ & (\neg\mathcal{A} \leftrightarrow \mathcal{B}) \\ & (\neg(\neg\mathcal{A} \wedge \neg\mathcal{B}) \wedge \neg(\mathcal{A} \wedge \mathcal{B})) \end{aligned}$$

But if we wanted to symbolize it using only one connective, we would have to introduce a new primitive connective.

## CHAPTER 6

# *Sentences of TFL*

**A.** For each of the following: (a) Is it a sentence of TFL, strictly speaking? (b) Is it a sentence of TFL, allowing for our relaxed bracketing conventions?

- |   |                 |
|---|-----------------|
| 1. $(A)$  | (a) no (b) no   |
| 2. $J_{374} \vee \neg J_{374}$                                    | (a) no (b) yes  |
| 3. $\neg\neg\neg\neg F$   | (a) yes (b) yes |
| 4. $\neg \wedge S$  | (a) no (b) no   |
| 5. $(G \wedge \neg G)$  | (a) yes (b) yes |
| 6. $(A \rightarrow (A \wedge \neg F)) \vee (D \leftrightarrow E)$ | (a) no (b) yes  |
| 7. $[(Z \leftrightarrow S) \rightarrow W] \wedge [J \vee X]$      | (a) no (b) yes  |
| 8. $(F \leftrightarrow \neg D \rightarrow J) \vee (C \wedge D)$   | (a) no (b) no   |

**B.** Are there any sentences of TFL that contain no atomic sentences? Explain your answer.

*No. Atomic sentences contain atomic sentences (trivially). And every more complicated sentence is built up out of less complicated sentences, that were in turn built out of less complicated sentences, ..., that were ultimately built out of atomic sentences.*

**C.** What is the scope of each connective in the sentence

$$[(H \rightarrow I) \vee (I \rightarrow H)] \wedge (J \vee K)$$

The scope of the left-most instance of ' $\rightarrow$ ' is ' $(H \rightarrow I)$ '.

The scope of the right-most instance of ' $\rightarrow$ ' is ' $(I \rightarrow H)$ '.

The scope of the left-most instance of ' $\vee$ ' is ' $[(H \rightarrow I) \vee (I \rightarrow H)]$ '

The scope of the right-most instance of ' $\vee$ ' is ' $(J \vee K)$ '

The scope of the conjunction is the entire sentence; so conjunction is the main logical connective of the sentence.

## CHAPTER 11

# *Complete truth tables*

A. Complete truth tables for each of the following:

1.  $A \rightarrow A$

$A$	$A \rightarrow A$
T	T T T
F	F T F

2.  $C \rightarrow \neg C$

$C$	$C \rightarrow \neg C$
T	T F F T
F	F T T F

3.  $(A \leftrightarrow B) \leftrightarrow \neg(A \leftrightarrow \neg B)$

$A$	$B$	$(A \leftrightarrow B) \leftrightarrow \neg(A \leftrightarrow \neg B)$
T	T	T T T T T T F F T
T	F	T F F T F T T T F
F	T	F F T T F F T F T
F	F	F T F T T F F T F

4.  $(A \rightarrow B) \vee (B \rightarrow A)$

$A$	$B$	$(A \rightarrow B) \vee (B \rightarrow A)$
T	T	T T T <b>T</b> T T T
T	F	T F F <b>T</b> F T T
F	T	F T T <b>T</b> T F F
F	F	F T F <b>T</b> F T F

5.  $(A \wedge B) \rightarrow (B \vee A)$

$A$	$B$	$(A \wedge B) \rightarrow (B \vee A)$
T	T	T T T <b>T</b> T T T
T	F	T F F <b>T</b> F T T
F	T	F F T <b>T</b> T T F
F	F	F F F <b>T</b> F F F

6.  $\neg(A \vee B) \leftrightarrow (\neg A \wedge \neg B)$

$A$	$B$	$\neg(A \vee B) \leftrightarrow (\neg A \wedge \neg B)$
T	T	F T T T <b>T</b> F T F F T
T	F	F T T F <b>T</b> F T F T F
F	T	F F T T <b>T</b> T F F F T
F	F	T F F F <b>T</b> T F T T F

7.  $[(A \wedge B) \wedge \neg(A \wedge B)] \wedge C$

$A$	$B$	$C$	$[(A \wedge B) \wedge \neg(A \wedge B)] \wedge C$
T	T	T	T T T F F T T T <b>FT</b>
T	T	F	T T T F F T T T <b>FF</b>
T	F	T	T F F F T T F F <b>FT</b>
T	F	F	T F F F T T F F <b>FF</b>
F	T	T	F F T F T F F T <b>FT</b>
F	T	F	F F T F T F F T <b>FF</b>
F	F	T	F F F F T F F F <b>FT</b>
F	F	F	F F F F T F F F <b>FF</b>

8.  $[(A \wedge B) \wedge C] \rightarrow B$

$A$	$B$	$C$	$[(A \wedge B) \wedge C] \rightarrow B$
T	T	T	T
T	T	F	T
T	F	T	T
T	F	F	T
F	T	T	F
F	T	F	F
F	F	T	F
F	F	F	F

9.  $\neg[(C \vee A) \vee B]$

$A$	$B$	$C$	$\neg[(C \vee A) \vee B]$
T	T	T	F
T	T	F	F
T	F	T	F
T	F	F	F
F	T	T	F
F	T	F	F
F	F	T	F
F	F	F	T

**B.** Check all the claims made in introducing the new notational conventions in §10.3, i.e. show that:

1. ‘ $((A \wedge B) \wedge C)$ ’ and ‘ $(A \wedge (B \wedge C))$ ’ have the same truth table

$A$	$B$	$C$	$(A \wedge B) \wedge C$	$A \wedge (B \wedge C)$
T	T	T	T	T
T	T	F	T	T
T	F	T	T	T
T	F	F	T	T
F	T	T	F	F
F	T	F	F	F
F	F	T	F	F
F	F	F	F	F

2. ‘ $((A \vee B) \vee C)$ ’ and ‘ $(A \vee (B \vee C))$ ’ have the same truth table

$A$	$B$	$C$	$(A \vee B) \vee C$	$A \vee (B \vee C)$
T	T	T	T T T T T T	T T T T T T
T	T	F	T T T T F F	T T T T F F
T	F	T	T T F T T T	T T F T T T
T	F	F	T T F T F F	T T F F F F
F	T	T	F T T T T T	F T T T T T
F	T	F	F T T T F F	F T T T F F
F	F	T	F F F T T T	F T F T T T
F	F	F	F F F F F F	F F F F F F

3. ‘ $((A \vee B) \wedge C)$ ’ and ‘ $(A \vee (B \wedge C))$ ’ do not have the same truth table

$A$	$B$	$C$	$(A \vee B) \wedge C$	$A \vee (B \wedge C)$
T	T	T	T T T T T T	T T T T T T
T	T	F	T T T F F F	T T T F F F
T	F	T	T T F T T T	T T F T T T
T	F	F	T T F F F F	T T F F F F
F	T	T	F T T T T T	F T T T T T
F	T	F	F T T F F F	F F T F F F
F	F	T	F F F F T T	F F F F T T
F	F	F	F F F F F F	F F F F F F

4. ‘ $((A \rightarrow B) \rightarrow C)$ ’ and ‘ $(A \rightarrow (B \rightarrow C))$ ’ do not have the same truth table

$A$	$B$	$C$	$(A \rightarrow B) \rightarrow C$	$A \rightarrow (B \rightarrow C)$
T	T	T	T T T T T T	T T T T T T
T	T	F	T T T F F F	T F T F F F
T	F	T	T F F T T T	T T F T T T
T	F	F	T F F T F F	T T F T F F
F	T	T	F T T T T T	F T T T T T
F	T	F	F T T F F F	F T T F F F
F	F	T	F T F T T T	F T F T T T
F	F	F	F T F F F F	F T F T F F

Also, check whether:

5. ‘ $((A \leftrightarrow B) \leftrightarrow C)$ ’ and ‘ $(A \leftrightarrow (B \leftrightarrow C))$ ’ have the same truth table

Indeed they do:

$A$	$B$	$C$	$(A \leftrightarrow B) \leftrightarrow C$	$A \leftrightarrow (B \leftrightarrow C)$
T	T	T	T	T
T	T	F	F	F
T	F	T	F	F
T	F	F	T	T
F	T	T	F	F
F	T	F	T	T
F	F	T	T	T
F	F	F	F	F

C. Write complete truth tables for the following sentences and mark the column that represents the possible truth values for the whole sentence.

1.  $\neg(S \leftrightarrow (P \rightarrow S))$

$\neg$	(S	$\leftrightarrow$	(P	$\rightarrow$	S))
F	T	T	T	T	T
F	T	T	F	T	T
F	F	T	T	F	F
T	F	F	F	T	F

2.  $\neg[(X \wedge Y) \vee (X \vee Y)]$

$\neg$	[(X	$\wedge$	Y)	$\vee$	(X	$\vee$	Y)]
F	T	T	T	T	T	T	T
F	T	F	F	T	T	T	F
F	F	F	T	T	F	T	T
T	F	F	F	F	F	F	F

3.  $(A \rightarrow B) \leftrightarrow (\neg B \leftrightarrow \neg A)$

(A	$\rightarrow$	B)	$\leftrightarrow$	( $\neg$	B	$\leftrightarrow$	$\neg$	A)
T	T	T	T	F	T	T	F	T
T	F	F	T	T	F	F	F	T
F	T	T	F	F	T	F	T	F
F	T	F	T	T	F	T	T	F

4.  $[C \leftrightarrow (D \vee E)] \wedge \neg C$



[C	$\leftrightarrow$	(D	$\vee$	E)]	$\wedge$	$\neg$	C
T	T	T	T	T	F	F	T
T	T	T	T	F	F	F	T
T	T	F	T	T	F	F	T
T	F	F	F	F	F	F	T
F	F	T	T	T	F	T	F
F	F	T	T	F	F	T	F
F	F	F	T	T	F	T	F
F	T	F	F	F	T	T	F

5.  $\neg(G \wedge (B \wedge H)) \leftrightarrow (G \vee (B \vee H))$

$\neg$	(G	$\wedge$	(B	$\wedge$	H))	$\leftrightarrow$	(G	$\vee$	(B	$\vee$	H))
F	T	T	T	T	T	F	T	T	T	T	T
T	T	F	T	F	F	T	T	T	T	T	F
T	T	F	F	F	T	T	T	T	F	T	T
T	T	F	F	F	F	T	T	T	F	F	F
T	F	F	T	T	T	T	F	T	T	T	T
T	F	F	T	F	F	T	F	T	T	T	F
T	F	F	F	F	T	T	F	T	F	T	T
T	F	F	F	F	F	F	F	F	F	F	F

**D.** Write complete truth tables for the following sentences and mark the column that represents the possible truth values for the whole sentence.

1.  $(D \wedge \neg D) \rightarrow G$

(D	$\wedge$	$\neg$	D)	$\rightarrow$	G
T	F	F	T	T	T
T	F	F	T	T	F
F	F	T	F	T	T
F	F	T	F	T	F

2.  $(\neg P \vee \neg M) \leftrightarrow M$

$(\neg$	P	$\vee$	$\neg$	M)	$\leftrightarrow$	M
F	T	F	F	T	T	T
F	T	T	T	F	F	F
T	F	T	F	T	T	T
T	F	T	T	F	T	F

3.  $\neg\neg(\neg A \wedge \neg B)$

$\neg$	$\neg$	$(\neg$	A	$\wedge$	$\neg$	B)
F	T	F	T	F	F	T
F	T	F	T	F	T	F
F	T	T	F	F	F	T
T	F	T	F	T	T	F

4.  $[(D \wedge R) \rightarrow I] \rightarrow \neg(D \vee R)$

$[(D$	$\wedge$	R)	$\rightarrow$	I]	$\rightarrow$	$\neg$	(D	$\vee$	R)
T	T	T	T	T	F	F	T	T	T
T	T	T	F	F	T	F	T	T	T
T	F	F	T	T	F	F	T	T	F
T	F	F	T	F	F	F	T	T	F
F	F	T	T	T	F	F	F	T	T
F	F	T	T	F	F	F	F	T	T
F	F	F	T	T	T	T	F	F	F
F	F	F	T	F	T	T	F	F	F

5.  $\neg[(D \leftrightarrow O) \leftrightarrow A] \rightarrow (\neg D \wedge O)$

$\neg$	$[(D$	$\leftrightarrow$	O)	$\leftrightarrow$	A]	$\rightarrow$	$(\neg$	D	$\wedge$	O)
F	T	T	T	T	T	T	F	T	F	T
T	T	T	T	F	F	F	F	T	F	T
T	T	F	F	F	T	F	F	T	F	F
F	T	F	F	T	F	T	F	T	F	F
T	F	F	T	F	T	T	T	F	T	T
F	F	F	T	T	F	T	T	F	T	T
F	F	T	F	T	T	T	T	F	F	F
T	F	T	F	F	F	T	T	F	F	F

If you want additional practice, you can construct truth tables for any of the sentences and arguments in the exercises for the previous chapter.

## CHAPTER 12

# Semantic concepts

**A.** Revisit your answers to §10A. Determine which sentences were tautologies, which were contradictions, and which were neither tautologies nor contradictions.

- |   |               |
|---|---------------|
| 1. $A \rightarrow A$  | Tautology     |
| 2. $C \rightarrow \neg C$   | Neither       |
| 3. $(A \leftrightarrow B) \leftrightarrow \neg(A \leftrightarrow \neg B)$ | Tautology     |
| 4. $(A \rightarrow B) \vee (B \rightarrow A)$                             | Tautology     |
| 5. $(A \wedge B) \rightarrow (B \vee A)$                                  | Tautology     |
| 6. $\neg(A \vee B) \leftrightarrow (\neg A \wedge \neg B)$                | Tautology     |
| 7. $[(A \wedge B) \wedge \neg(A \wedge B)] \wedge C$                      | Contradiction |
| 8. $[(A \wedge B) \wedge C] \rightarrow B$                                | Tautology     |
| 9. $\neg[(C \vee A) \vee B]$  | Neither       |

**B.** Use truth tables to determine whether these sentences are jointly satisfiable, or jointly unsatisfiable:

1.  $A \rightarrow A, \neg A \rightarrow \neg A, A \wedge A, A \vee A$     Jointly satisfiable (see line 1)

$A$	$A \rightarrow A$	$\neg A \rightarrow \neg A$	$A \wedge A$	$A \vee A$
T	T T T	F T T F T	T T T	T T T
F	F T F	T F T T F	F F F	F F F

2.  $A \vee B, A \rightarrow C, B \rightarrow C$     Jointly satisfiable (see line 1)

$A$	$B$	$C$	$A \vee B$	$A \rightarrow C$	$B \rightarrow C$
T	T	T	TTT	TTT	TTT
T	T	F	TTT	TFF	TFF
T	F	T	TTT	TTT	FTT
T	F	F	TTF	TFF	FTF
F	T	T	FTF	FTT	TTT
F	T	F	FTT	FTF	TFF
F	F	T	FFF	FTT	FTT
F	F	F	FFF	FTF	FTF

3.  $B \wedge (C \vee A), A \rightarrow B, \neg(B \vee C)$  Jointly unsatisfiable

$A$	$B$	$C$	$B \wedge (C \vee A)$	$A \rightarrow B$	$\neg(B \vee C)$
T	T	T	TTTTTT	TTT	FTTT
T	T	F	TTFTTT	TTT	FTTF
T	F	T	FFT TTT	TFF	FFT T
T	F	F	FFF TTT	TFF	TFFF
F	T	T	TTT TTF	FTT	FTTT
F	T	F	TFFF F	FTT	FTTF
F	F	T	FFT TTF	FTF	FFT T
F	F	F	FFF F F	FTF	TFFF

4.  $A \leftrightarrow (B \vee C), C \rightarrow \neg A, A \rightarrow \neg B$  Jointly satisfiable (see line 8)

$A$	$B$	$C$	$A \leftrightarrow (B \vee C)$	$C \rightarrow \neg A$	$A \rightarrow \neg B$
T	T	T	TTTTTT	TFFT	TFFT
T	T	F	TTTTF	FTFT	TFFT
T	F	T	TTFTT	TFFT	TTTF
T	F	F	TFFF F	FTFT	TTTF
F	T	T	FFT TTT	TTTF	FTFT
F	T	F	FFT TTF	FTTF	FTFT
F	F	T	FFT TTF	TTTF	FTTF
F	F	F	FTFFF	FTTF	FTTF

**C.** Use truth tables to determine whether each argument is valid or invalid.

1.  $A \rightarrow A \therefore A$  Invalid (see line 2)

$A$	$A \rightarrow A$	$A$
T	TTT	T
F	FTF	F

2.  $A \rightarrow (A \wedge \neg A) \therefore \neg A$

Valid

$A$	$A \rightarrow (A \wedge \neg A)$	$\neg A$
T	<b>T F T F F T</b>	<b>F T</b>
F	<b>F T F F T F</b>	<b>T F</b>

3.  $A \vee (B \rightarrow A) \therefore \neg A \rightarrow \neg B$

Valid

$A$	$B$	$A \vee (B \rightarrow A)$	$\neg A \rightarrow \neg B$
T	T	<b>T T T T T T</b>	<b>F T T F T</b>
T	F	<b>T T F T T T</b>	<b>F T T T F</b>
F	T	<b>F F T F F F</b>	<b>T F F F T</b>
F	F	<b>F T F T F</b>	<b>T F T T F</b>

4.  $A \vee B, B \vee C, \neg A \therefore B \wedge C$

Invalid (see line 6)

$A$	$B$	$C$	$A \vee B$	$B \vee C$	$\neg A$	$B \wedge C$
T	T	T	<b>T T T</b>	<b>T T T</b>	<b>F T</b>	<b>T T T</b>
T	T	F	<b>T T T</b>	<b>T T F</b>	<b>F T</b>	<b>T F F</b>
T	F	T	<b>T T F</b>	<b>F T T</b>	<b>F T</b>	<b>F F T</b>
T	F	F	<b>T T F</b>	<b>F F F</b>	<b>F T</b>	<b>F F F</b>
T	T	T	<b>F T T</b>	<b>T T T</b>	<b>T F</b>	<b>T T T</b>
T	T	F	<b>F T T</b>	<b>T T F</b>	<b>T F</b>	<b>T F F</b>
T	F	T	<b>F F F</b>	<b>F T T</b>	<b>T F</b>	<b>F F T</b>
T	F	F	<b>F F F</b>	<b>F F F</b>	<b>T F</b>	<b>F F F</b>

5.  $(B \wedge A) \rightarrow C, (C \wedge A) \rightarrow B \therefore (C \wedge B) \rightarrow A$  Invalid (see line 5)

$A$	$B$	$C$	$(B \wedge A) \rightarrow C$	$(C \wedge A) \rightarrow B$	$(C \wedge B) \rightarrow A$
T	T	T	<b>T T T T T</b>	<b>T T T T T</b>	<b>T T T T T</b>
T	T	F	<b>T T T F F</b>	<b>F F T T T</b>	<b>F F T T T</b>
T	F	T	<b>F F T T T</b>	<b>T T T F F</b>	<b>T F F T T</b>
T	F	F	<b>F F T T F</b>	<b>F F T T F</b>	<b>F F F T T</b>
F	T	T	<b>T F F T T</b>	<b>T F F T T</b>	<b>T T T F F</b>
F	T	F	<b>T F F T F</b>	<b>F F F T T</b>	<b>F F T T F</b>
F	F	T	<b>F F F T T</b>	<b>T F F T F</b>	<b>T F F T F</b>
F	F	F	<b>F F F T F</b>	<b>F F F T F</b>	<b>F F F T F</b>

**D.** Determine whether each sentence is a tautology, a contradiction, or a contingent sentence, using a complete truth table.

1.  $\neg B \wedge B$

Contradiction

2.  $\neg D \vee D$

Tautology

- |   |               |
|---|---------------|
| 3. $(A \wedge B) \vee (B \wedge A)$                                 | Contingent    |
| 4. $\neg[A \rightarrow (B \rightarrow A)]$                          | Contradiction |
| 5. $A \leftrightarrow [A \rightarrow (B \wedge \neg B)]$            | Contradiction |
| 6. $[(A \wedge B) \leftrightarrow B] \rightarrow (A \rightarrow B)$ | Contingent    |

**E.** Determine whether each the following sentences are logically equivalent using complete truth tables. If the two sentences really are logically equivalent, write “equivalent.” Otherwise write, “Not equivalent.”

1.  $A$  and  $\neg A$
2.  $A \wedge \neg A$  and  $\neg B \leftrightarrow B$
3.  $[(A \vee B) \vee C]$  and  $[A \vee (B \vee C)]$
4.  $A \vee (B \wedge C)$  and  $(A \vee B) \wedge (A \vee C)$
5.  $[A \wedge (A \vee B)] \rightarrow B$  and  $A \rightarrow B$

**F.** Determine whether each the following sentences are logically equivalent using complete truth tables. If the two sentences really are equivalent, write “equivalent.” Otherwise write, “not equivalent.”

1.  $A \rightarrow A$  and  $A \leftrightarrow A$
2.  $\neg(A \rightarrow B)$  and  $\neg A \rightarrow \neg B$
3.  $A \vee B$  and  $\neg A \rightarrow B$
4.  $(A \rightarrow B) \rightarrow C$  and  $A \rightarrow (B \rightarrow C)$
5.  $A \leftrightarrow (B \leftrightarrow C)$  and  $A \wedge (B \wedge C)$

**G.** Determine whether each collection of sentences is jointly satisfiable or jointly unsatisfiable using a complete truth table.

1.  $A \wedge \neg B, \neg(A \rightarrow B), B \rightarrow A$

A	∧	¬	B	¬	(A	→	B)	B	→	A
T	F	F	T	F	T	T	T	T	T	T
T	T	T	F	T	T	F	F	F	T	T
F	F	F	T	F	F	T	T	T	F	F
F	F	T	F	F	F	T	F	F	T	F

Consiste

2.  $A \vee B, A \rightarrow \neg A, B \rightarrow \neg B$

$A \vee B$	$A \rightarrow \neg A$	$B \rightarrow \neg B$	Insatisfiable
T T T	T F F T	T F F T	
T T F	T F F T	F T T F	
F T T	F T T F	T F F T	
F F F	F T T F	F T T F	

3.  $\neg(\neg A \vee B), A \rightarrow \neg C, A \rightarrow (B \rightarrow C)$  Consistent

$\neg(\neg A \vee B)$	$A \rightarrow \neg C$	$A \rightarrow (B \rightarrow C)$	Consistent
F F T T T	T F F T	T T T T	
F F T T T	T T T F	T F T F	
T F T F F	T F F T	T T F T	
T F T F F	T T T F	T T F T	
F T F T T	F T F T	F F T T	
F T F T T	F T T F	F T T F	
F T F T F	F T F T	F T F T	
F T F T F	F T T F	F T F T	

4.  $A \rightarrow B, A \wedge \neg B$  Insatisfiable

5.  $A \rightarrow (B \rightarrow C), (A \rightarrow B) \rightarrow C, A \rightarrow C$  Consistent

**H.** Determine whether each collection of sentences is jointly satisfiable or jointly unsatisfiable, using a complete truth table.

1.  $\neg B, A \rightarrow B, A$  Insatisfiable

2.  $\neg(A \vee B), A \leftrightarrow B, B \rightarrow A$  Consistent

3.  $A \vee B, \neg B, \neg B \rightarrow \neg A$  Insatisfiable

4.  $A \leftrightarrow B, \neg B \vee \neg A, A \rightarrow B$  Consistent

5.  $(A \vee B) \vee C, \neg A \vee \neg B, \neg C \vee \neg B$  Consistent

**I.** Determine whether each argument is valid or invalid, using a complete truth table.

1.  $A \rightarrow B, B \therefore A$  Invalid

2.  $A \leftrightarrow B, B \leftrightarrow C \therefore A \leftrightarrow C$  Valid

3.  $A \rightarrow B, A \rightarrow C \therefore B \rightarrow C$  Invalid.

4.  $A \rightarrow B, B \rightarrow A \therefore A \leftrightarrow B$  Valid

**J.** Determine whether each argument is valid or invalid, using a complete truth table.



- |   |         |
|---|---------|
| 1. $A \vee [A \rightarrow (A \leftrightarrow A)] \therefore A$    | Invalid |
| 2. $A \vee B, B \vee C, \neg B \therefore A \wedge C$             | Valid   |
| 3. $A \rightarrow B, \neg A \therefore \neg B$                    | Invalid |
| 4. $A, B \therefore \neg(A \rightarrow \neg B)$                   | Valid   |
| 5. $\neg(A \wedge B), A \vee B, A \leftrightarrow B \therefore C$ | Valid   |

**K.** Answer each of the questions below and justify your answer.

- Suppose that  $\mathcal{A}$  and  $\mathcal{B}$  are logically equivalent. What can you say about  $\mathcal{A} \leftrightarrow \mathcal{B}$ ?  
 $\mathcal{A}$  and  $\mathcal{B}$  have the same truth value on every line of a complete truth table, so  $\mathcal{A} \leftrightarrow \mathcal{B}$  is true on every line. It is a tautology.
- Suppose that  $(\mathcal{A} \wedge \mathcal{B}) \rightarrow \mathcal{C}$  is neither a tautology nor a contradiction. What can you say about whether  $\mathcal{A}, \mathcal{B} \therefore \mathcal{C}$  is valid?  
 Since the sentence  $(\mathcal{A} \wedge \mathcal{B}) \rightarrow \mathcal{C}$  is not a tautology, there is some line on which it is false. Since it is a conditional, on that line,  $\mathcal{A}$  and  $\mathcal{B}$  are true and  $\mathcal{C}$  is false. So the argument is invalid.
- Suppose that  $\mathcal{A}$ ,  $\mathcal{B}$  and  $\mathcal{C}$  are jointly unsatisfiable. What can you say about  $(\mathcal{A} \wedge \mathcal{B} \wedge \mathcal{C})$ ?  
 Since the sentences are jointly unsatisfiable, there is no valuation on which they are all true. So their conjunction is false on every valuation. It is a contradiction.
- Suppose that  $\mathcal{A}$  is a contradiction. What can you say about whether  $\mathcal{A}, \mathcal{B} \vDash \mathcal{C}$ ?  
 Since  $\mathcal{A}$  is false on every line of a complete truth table, there is no line on which  $\mathcal{A}$  and  $\mathcal{B}$  are true and  $\mathcal{C}$  is false. So the entailment holds.
- Suppose that  $\mathcal{C}$  is a tautology. What can you say about whether  $\mathcal{A}, \mathcal{B} \vDash \mathcal{C}$ ?  
 Since  $\mathcal{C}$  is true on every line of a complete truth table, there is no line on which  $\mathcal{A}$  and  $\mathcal{B}$  are true and  $\mathcal{C}$  is false. So the entailment holds.
- Suppose that  $\mathcal{A}$  and  $\mathcal{B}$  are logically equivalent. What can you say about  $(\mathcal{A} \vee \mathcal{B})$ ?  
 Not much. Since  $\mathcal{A}$  and  $\mathcal{B}$  are true on exactly the same lines of the truth table, their disjunction is true on exactly the same lines. So, their disjunction is logically equivalent to them.
- Suppose that  $\mathcal{A}$  and  $\mathcal{B}$  are *not* logically equivalent. What can you say about  $(\mathcal{A} \vee \mathcal{B})$ ?  
 $\mathcal{A}$  and  $\mathcal{B}$  have different truth values on at least one line of a complete truth table, and  $(\mathcal{A} \vee \mathcal{B})$  will be true on that line. On

other lines, it might be true or false. So  $(\mathcal{A} \vee \mathcal{B})$  is either a tautology or it is contingent; it is *not* a contradiction.

L. Consider the following principle:

- Suppose  $\mathcal{A}$  and  $\mathcal{B}$  are logically equivalent. Suppose an argument contains  $\mathcal{A}$  (either as a premise, or as the conclusion). The validity of the argument would be unaffected, if we replaced  $\mathcal{A}$  with  $\mathcal{B}$ .

Is this principle correct? Explain your answer.

The principle is correct. Since  $\mathcal{A}$  and  $\mathcal{B}$  are logically equivalent, they have the same truth table. So every valuation that makes  $\mathcal{A}$  true also makes  $\mathcal{B}$  true, and every valuation that makes  $\mathcal{A}$  false also makes  $\mathcal{B}$  false. So if no valuation makes all the premises true and the conclusion false, when  $\mathcal{A}$  was among the premises or the conclusion, then no valuation makes all the premises true and the conclusion false, when we replace  $\mathcal{A}$  with  $\mathcal{B}$ .

## CHAPTER 13

# *Truth table shortcuts*

**A.** Using shortcuts, determine whether each sentence is a tautology, a contradiction, or neither.

1.  $\neg B \wedge B$

Contradiction

$B$	$\neg B \wedge B$
T	F F
F	F F

2.  $\neg D \vee D$

Tautology

$D$	$\neg D \vee D$
T	T
F	T T

3.  $(A \wedge B) \vee (B \wedge A)$

Neither

$A$	$B$	$(A \wedge B) \vee (B \wedge A)$
T	T	T T
T	F	F F F
F	T	F F F
F	F	F F F

4.  $\neg[A \rightarrow (B \rightarrow A)]$

Contradiction

$A$	$B$	$\neg[A \rightarrow (B \rightarrow A)]$
T	T	<b>F</b> T T
T	F	<b>F</b> T T
F	T	<b>F</b> T
F	F	<b>F</b> T

5.  $A \leftrightarrow [A \rightarrow (B \wedge \neg B)]$

Contradiction

$A$	$B$	$A \leftrightarrow [A \rightarrow (B \wedge \neg B)]$
T	T	<b>F</b> F FF
T	F	<b>F</b> F F
F	T	<b>F</b> T
F	F	<b>F</b> T

6.  $\neg(A \wedge B) \leftrightarrow A$

Neither

$A$	$B$	$\neg(A \wedge B) \leftrightarrow A$
T	T	F T <b>F</b>
T	F	T F <b>T</b>
F	T	T F <b>F</b>
F	F	T F <b>F</b>

7.  $A \rightarrow (B \vee C)$

Neither

$A$	$B$	$C$	$A \rightarrow (B \vee C)$
T	T	T	<b>T</b> T
T	T	F	<b>T</b> T
T	F	T	<b>T</b> T
T	F	F	<b>F</b> F
F	T	T	<b>T</b>
F	T	F	<b>T</b>
F	F	T	<b>T</b>
F	F	F	<b>T</b>

8.  $(A \wedge \neg A) \rightarrow (B \vee C)$

Tautology

$A$	$B$	$C$	$(A \wedge \neg A) \rightarrow (B \vee C)$
T	T	T	<b>FF</b> T
T	T	F	<b>FF</b> T
T	F	T	<b>FF</b> T
T	F	F	<b>FF</b> T
F	T	T	<b>F</b> T
F	T	F	<b>F</b> T
F	F	T	<b>F</b> T
F	F	F	<b>F</b> T

9.  $(B \wedge D) \leftrightarrow [A \leftrightarrow (A \vee C)]$

Neither

$A$	$B$	$C$	$D$	$(B \wedge D) \leftrightarrow [A \leftrightarrow (A \vee C)]$			
T	T	T	T	T	<b>T</b>	T	T
T	T	T	F	F	<b>F</b>	T	T
T	T	F	T	T	<b>T</b>	T	T
T	T	F	F	F	<b>F</b>	T	T
T	F	T	T	F	<b>F</b>	T	T
T	F	T	F	F	<b>F</b>	T	T
T	F	F	T	F	<b>F</b>	T	T
T	F	F	F	F	<b>F</b>	T	T
F	T	T	T	T	<b>F</b>	F	T
F	T	T	F	F	<b>T</b>	F	T
F	T	F	T	T	<b>T</b>	T	F
F	T	F	F	F	<b>F</b>	T	F
F	F	T	T	F	<b>T</b>	F	T
F	F	T	F	F	<b>T</b>	F	T
F	F	F	T	F	<b>F</b>	T	F
F	F	F	F	F	<b>F</b>	T	F

## CHAPTER 14

# *Partial truth tables*

**A.** Use complete or partial truth tables (as appropriate) to determine whether these pairs of sentences are logically equivalent:

1.  $A, \neg A$

Not logically equivalent

$A$	$A$	$\neg A$
T	T	F

2.  $A, A \vee A$

Logically equivalent

$A$	$A$	$A \vee A$
T	T	T
T	T	T

3.  $A \rightarrow A, A \leftrightarrow A$

Logically equivalent

$A$	$A \rightarrow A$	$A \leftrightarrow A$
T	T	T
F	T	T

4.  $A \vee \neg B, A \rightarrow B$

Not logically equivalent

$A$	$B$	$A \vee \neg B$	$A \rightarrow B$
T	F	T	F

5.  $A \wedge \neg A, \neg B \leftrightarrow B$

Logically equivalent

$A$	$B$	$A \wedge \neg A$	$\neg B \leftrightarrow B$
T	T	<b>FF</b>	F <b>F</b>
T	F	<b>FF</b>	T <b>F</b>
F	T	<b>F</b>	F <b>F</b>
F	F	<b>F</b>	T <b>F</b>

6.  $\neg(A \wedge B), \neg A \vee \neg B$  Logically equivalent

$A$	$B$	$\neg(A \wedge B)$	$\neg A \vee \neg B$
T	T	<b>F</b> T	F <b>FF</b>
T	F	<b>T</b> F	F <b>TT</b>
F	T	<b>T</b> F	T <b>TF</b>
F	F	<b>T</b> F	T <b>TT</b>

7.  $\neg(A \rightarrow B), \neg A \rightarrow \neg B$  Not logically equivalent

$A$	$B$	$\neg(A \rightarrow B)$	$\neg A \rightarrow \neg B$
T	T	<b>F</b> T	F <b>TF</b>

8.  $(A \rightarrow B), (\neg B \rightarrow \neg A)$  Logically equivalent

$A$	$B$	$(A \rightarrow B)$	$(\neg B \rightarrow \neg A)$
T	T	T	F <b>T</b>
T	F	F	T <b>FF</b>
F	T	T	F <b>T</b>
F	F	T	T <b>TT</b>

**B.** Use complete or partial truth tables (as appropriate) to determine whether these sentences are jointly satisfiable, or jointly unsatisfiable:

1.  $A \wedge B, C \rightarrow \neg B, C$  Jointly unsatisfiable

$A$	$B$	$C$	$A \wedge B$	$C \rightarrow \neg B$	$C$
T	T	T	T	<b>F</b> F	T
T	T	F	T	<b>T</b>	F
T	F	T	F	<b>T</b> T	T
T	F	F	F	<b>T</b>	F
F	T	T	F	<b>F</b> F	T
F	T	F	F	<b>T</b>	F
F	F	T	F	<b>T</b> T	T
F	F	F	F	<b>T</b>	F

2.  $A \rightarrow B, B \rightarrow C, A, \neg C$  Jointly unsatisfiable

$A$	$B$	$C$	$A \rightarrow B$	$B \rightarrow C$	$A$	$\neg C$
T	T	T	T	T	T	F
T	T	F	T	F	T	T
T	F	T	F	T	T	F
T	F	F	F	T	T	T
F	T	T	T	T	F	F
F	T	F	T	F	F	T
F	F	T	T	T	F	F
F	F	F	T	T	F	T

3.  $A \vee B, B \vee C, C \rightarrow \neg A$  Jointly satisfiable

$A$	$B$	$C$	$A \vee B$	$B \vee C$	$C \rightarrow \neg A$
F	T	T	T	T	<b>T</b> T

4.  $A, B, C, \neg D, \neg E, F$  Jointly satisfiable

$A$	$B$	$C$	$D$	$E$	$F$	$A$	$B$	$C$	$\neg D$	$\neg E$	$F$
T	T	T	F	F	T	T	T	T	T	T	T

**C.** Use complete or partial truth tables (as appropriate) to determine whether each argument is valid or invalid:

1.  $A \vee [A \rightarrow (A \leftrightarrow A)] \therefore A$  Invalid

$A$	$A \vee [A \rightarrow (A \leftrightarrow A)]$	$A$
F	<b>T</b> T	F

2.  $A \leftrightarrow \neg(B \leftrightarrow A) \therefore A$  Invalid

$A$	$B$	$A \leftrightarrow \neg(B \leftrightarrow A)$	$A$
F	F	<b>T</b> F T	F

3.  $A \rightarrow B, B \therefore A$  Invalid

$A$	$B$	$A \rightarrow B$	$B$	$A$
F	T	T	T	F

4.  $A \vee B, B \vee C, \neg B \therefore A \wedge C$  Valid



$A$	$B$	$C$	$A \vee B$	$B \vee C$	$\neg B$	$A \wedge C$
T	T	T				T
T	T	F			F	F
T	F	T				T
T	F	F	T	F	T	F
F	T	T			F	F
F	T	F			F	F
F	F	T	F		T	F
F	F	F	F		T	F

5.  $A \leftrightarrow B, B \leftrightarrow C \therefore A \leftrightarrow C$

Valid

$A$	$B$	$C$	$A \leftrightarrow B$	$B \leftrightarrow C$	$A \leftrightarrow C$
T	T	T			T
T	T	F	T	F	F
T	F	T			T
T	F	F	F		F
F	T	T	F		F
F	T	F			T
F	F	T	T	F	F
F	F	F			T

**D.** Determine whether each sentence is a tautology, a contradiction, or a contingent sentence. Justify your answer with a complete or partial truth table where appropriate.

1.  $A \rightarrow \neg A$

Contingent

$A$	$A \rightarrow \neg A$
T	F
F	T

2.  $A \rightarrow (A \wedge (A \vee B))$

Tautology

$A$	$B$	$A \rightarrow (A \wedge (A \vee B))$
T	T	T
T	F	T
F	T	F
F	F	F

3.  $(A \rightarrow B) \leftrightarrow (B \rightarrow A)$  Contingent

$A$	$B$	$(A \rightarrow B)$	$\leftrightarrow$	$(B \rightarrow A)$
$T$	$T$	$T$	<b>T</b>	$T$
$T$	$F$	$F$	<b>F</b>	$T$
$F$	$T$	$T$	<b>F</b>	$F$
$F$	$F$	$T$	<b>T</b>	$T$

4.  $A \rightarrow \neg(A \wedge (A \vee B))$  Contingent

$A$	$B$	$A \rightarrow \neg(A \wedge (A \vee B))$
$T$	$T$	<b>F</b>
$T$	$F$	<b>F</b>
$F$	$T$	<b>T</b>
$F$	$F$	<b>T</b>

5.  $\neg B \rightarrow [(\neg A \wedge A) \vee B]$  Contingent

$A$	$B$	$\neg B \rightarrow [(\neg A \wedge A) \vee B]$
$T$	$T$	<b>T</b>
$T$	$F$	<b>F</b>
$F$	$T$	<b>T</b>
$F$	$F$	<b>F</b>

6.  $\neg(A \vee B) \leftrightarrow (\neg A \wedge \neg B)$  Tautology

$A$	$B$	$\neg(A \vee B) \leftrightarrow (\neg A \wedge \neg B)$
$T$	$T$	<b>T</b>
$T$	$F$	<b>T</b>
$F$	$T$	<b>T</b>
$F$	$F$	<b>T</b>

7.  $[(A \wedge B) \wedge C] \rightarrow B$  Tautology

$A$	$B$	$C$	$[(A \wedge B) \wedge C] \rightarrow B$
$T$	$T$	$T$	<b>T</b>
$T$	$T$	$F$	<b>T</b>
$T$	$F$	$T$	<b>T</b>
$T$	$F$	$F$	<b>T</b>
$F$	$T$	$T$	<b>T</b>
$F$	$T$	$F$	<b>T</b>
$F$	$F$	$T$	<b>T</b>
$F$	$F$	$F$	<b>T</b>

8.  $\neg[(C \vee A) \vee B]$

Contingent

$A$	$B$	$C$	$\neg$	$((C \vee A) \vee B)$
$T$	$T$	$T$	<b>F</b>	$T$
$T$	$T$	$F$	<b>F</b>	$F$
$T$	$F$	$T$	<b>F</b>	$T$
$T$	$F$	$F$	<b>F</b>	$F$
$F$	$T$	$T$	<b>F</b>	$T$
$F$	$T$	$F$	<b>F</b>	$F$
$F$	$F$	$T$	<b>F</b>	$T$
$F$	$F$	$F$	<b>T</b>	$F$

9.  $[(A \wedge B) \wedge \neg(A \wedge B)] \wedge C$

Contradiction

$A$	$B$	$C$	$((A \wedge B) \wedge \neg(A \wedge B))$	$\wedge$	$C$
$T$	$T$	$T$	<b>F</b>	$T$	<b>F</b>
$T$	$T$	$F$	<b>F</b>	$F$	<b>F</b>
$T$	$F$	$T$	<b>F</b>	$T$	<b>F</b>
$T$	$F$	$F$	<b>F</b>	$F$	<b>F</b>
$F$	$T$	$T$	<b>F</b>	$T$	<b>F</b>
$F$	$T$	$F$	<b>F</b>	$F$	<b>F</b>
$F$	$F$	$T$	<b>F</b>	$T$	<b>F</b>
$F$	$F$	$F$	<b>F</b>	$F$	<b>F</b>

10.  $(A \wedge B) \rightarrow [(A \wedge C) \vee (B \wedge D)]$

Contingent

$A$	$B$	$C$	$D$	$((A \wedge B) \rightarrow ((A \wedge C) \vee (B \wedge D)))$
$T$	$T$	$T$	$T$	<b>T</b>
$T$	$T$	$F$	$F$	<b>F</b>

**E.** Determine whether each sentence is a tautology, a contradiction, or a contingent sentence. Justify your answer with a complete or partial truth table where appropriate.

1.  $\neg(A \vee A)$

Contradiction

2.  $(A \rightarrow B) \vee (B \rightarrow A)$

Tautology

3.  $[(A \rightarrow B) \rightarrow A] \rightarrow A$

Tautology

4.  $\neg[(A \rightarrow B) \vee (B \rightarrow A)]$

Contradiction

5.  $(A \wedge B) \vee (A \vee B)$

Contingent

- |  |            |
|--|------------|
| 6. $\neg(A \wedge B) \leftrightarrow A$                          | Contingent |
| 7. $A \rightarrow (B \vee C)$                                    | Contingent |
| 8. $(A \wedge \neg A) \rightarrow (B \vee C)$                    | Tautology  |
| 9. $(B \wedge D) \leftrightarrow [A \leftrightarrow (A \vee C)]$ | Contingent |
| 10. $\neg[(A \rightarrow B) \vee (C \rightarrow D)]$             | Contingent |

**F.** Determine whether each the following pairs of sentences are logically equivalent using complete truth tables. If the two sentences really are logically equivalent, write “equivalent.” Otherwise write, “not equivalent.”

1.  $A$  and  $A \vee A$
2.  $A$  and  $A \wedge A$
3.  $A \vee \neg B$  and  $A \rightarrow B$
4.  $(A \rightarrow B)$  and  $(\neg B \rightarrow \neg A)$
5.  $\neg(A \wedge B)$  and  $\neg A \vee \neg B$
6.  $((U \rightarrow (X \vee X)) \vee U)$  and  $\neg(X \wedge (X \wedge U))$
7.  $((C \wedge (N \leftrightarrow C)) \leftrightarrow C)$  and  $(\neg\neg\neg N \rightarrow C)$
8.  $[(A \vee B) \wedge C]$  and  $[A \vee (B \wedge C)]$
9.  $((L \wedge C) \wedge I)$  and  $L \vee C$

**G.** Determine whether each collection of sentences is jointly satisfiable or jointly unsatisfiable. Justify your answer with a complete or partial truth table where appropriate.

- |   |               |
|---|---------------|
| 1. $A \rightarrow A, \neg A \rightarrow \neg A, A \wedge A, A \vee A$                       | Consistent    |
| 2. $A \rightarrow \neg A, \neg A \rightarrow A$   | Unsatisfiable |
| 3. $A \vee B, A \rightarrow C, B \rightarrow C$   | Consistent    |
| 4. $A \vee B, A \rightarrow C, B \rightarrow C, \neg C$                                     | Unsatisfiable |
| 5. $B \wedge (C \vee A), A \rightarrow B, \neg(B \vee C)$                                   | Unsatisfiable |
| 6. $(A \leftrightarrow B) \rightarrow B, B \rightarrow \neg(A \leftrightarrow B), A \vee B$ | Consistent    |
| 7. $A \leftrightarrow (B \vee C), C \rightarrow \neg A, A \rightarrow \neg B$               | Consistent    |
| 8. $A \leftrightarrow B, \neg B \vee \neg A, A \rightarrow B$                               | Consistent    |
| 9. $A \leftrightarrow B, A \rightarrow C, B \rightarrow D, \neg(C \vee D)$                  | Consistent    |
| 10. $\neg(A \wedge \neg B), B \rightarrow \neg A, \neg B$                                   | Consistent    |

**H.** Determine whether each argument is valid or invalid. Justify your answer with a complete or partial truth table where appropriate.

- |  |       |
|--|-------|
| 1. $A \rightarrow (A \wedge \neg A) \therefore \neg A$ | Valid |
|--|-------|

2.  $A \vee B, A \rightarrow B, B \rightarrow A \therefore A \leftrightarrow B$  Valid
3.  $A \vee (B \rightarrow A) \therefore \neg A \rightarrow \neg B$  Valid
4.  $A \vee B, A \rightarrow B, B \rightarrow A \therefore A \wedge B$  Valid
5.  $(B \wedge A) \rightarrow C, (C \wedge A) \rightarrow B \therefore (C \wedge B) \rightarrow A$  Invalid
6.  $\neg(\neg A \vee \neg B), A \rightarrow \neg C \therefore A \rightarrow (B \rightarrow C)$  Invalid
7.  $A \wedge (B \rightarrow C), \neg C \wedge (\neg B \rightarrow \neg A) \therefore C \wedge \neg C$  Valid
8.  $A \wedge B, \neg A \rightarrow \neg C, B \rightarrow \neg D \therefore A \vee B$  Invalid
9.  $A \rightarrow B \therefore (A \wedge B) \vee (\neg A \wedge \neg B)$  Invalid
10.  $\neg A \rightarrow B, \neg B \rightarrow C, \neg C \rightarrow A \therefore \neg A \rightarrow (\neg B \vee \neg C)$  Invalid

I. Determine whether each argument is valid or invalid. Justify your answer with a complete or partial truth table where appropriate.

1.  $A \leftrightarrow \neg(B \leftrightarrow A) \therefore A$  Invalid
2.  $A \vee B, B \vee C, \neg A \therefore B \wedge C$  Invalid
3.  $A \rightarrow C, E \rightarrow (D \vee B), B \rightarrow \neg D \therefore (A \vee C) \vee (B \rightarrow (E \wedge D))$   
Invalid
4.  $A \vee B, C \rightarrow A, C \rightarrow B \therefore A \rightarrow (B \rightarrow C)$  Invalid
5.  $A \rightarrow B, \neg B \vee A \therefore A \leftrightarrow B$  Valid

## CHAPTER 16

# *Basic rules for TFL*

**A.** The following two ‘proofs’ are *incorrect*. Explain the mistakes they make.

1	$(\neg L \wedge A) \vee L$	
2	$\neg L \wedge A$	
3	$\neg L$	$\wedge E$ 3
4	$A$	$\wedge E$ 1
5	$L$	
6	$\perp$	$\neg E$ 5, 3
7	$A$	X 6
8	$A$	$\vee E$ 1, 2–4, 5–7

$\wedge E$  on line 4 can’t be applied to line 1, since it is not of the form  $A \wedge B$ . ‘ $A$ ’ could be obtained by  $\wedge E$ , but from line 2.

$\perp I$  on line 5 illicitly refers to a line from a closed subproof (line 3).

1	$A \wedge (B \wedge C)$	
2	$(B \vee C) \rightarrow D$	
3	$B$	$\wedge E$ 1
4	$B \vee C$	$\vee I$ 3
5	$D$	$\rightarrow E$ 4, 2

$\wedge E$  on line 3 should yield ‘ $B \wedge C$ ’. ‘ $B$ ’ could then be obtained by  $\wedge E$  again.

The citation for line 5 is the wrong way round: it should be ‘ $\rightarrow E$  2, 4’.

**B.** The following three proofs are missing their citations (rule and line

numbers). Add them, to turn them into *bona fide* proofs. Additionally, write down the argument that corresponds to each proof.

1	$P \wedge S$	
2	$S \rightarrow R$	
3	$P$	$\wedge E$ 1
4	$S$	$\wedge E$ 1
5	$R$	$\rightarrow E$ 2, 4
6	$R \vee E$	$\vee I$ 5

Corresponding argument:

$P \wedge S, S \rightarrow R \therefore R \vee E$

1	$A \rightarrow D$	
2	$A \wedge B$	
3	$A$	$\wedge E$ 2
4	$D$	$\rightarrow E$ 1, 3
5	$D \vee E$	$\vee I$ 4
6	$(A \wedge B) \rightarrow (D \vee E)$	$\rightarrow I$ 2-5

Corresponding argument:

$A \rightarrow D \therefore (A \wedge B) \rightarrow (D \vee E)$

1	$\neg L \rightarrow (J \vee L)$	
2	$\neg L$	
3	$J \vee L$	$\rightarrow E$ 1, 2
4	$J$	
5	$J \wedge J$	$\wedge I$ 4, 4
6	$J$	$\wedge E$ 5
7	$L$	
8	$\perp$	$\neg E$ 7, 2
9	$J$	X 8
10	$J$	$\vee E$ 3, 4-6, 7-9

Corresponding argument:

$\neg L \rightarrow (J \vee L), \neg L \therefore J$

C. Give a proof for each of the following arguments:

1.  $J \rightarrow \neg J \therefore \neg J$

1	$J \rightarrow \neg J$	
2	$J$	
3	$\neg J$	$\rightarrow E$ 1, 2
4	$\perp$	$\neg E$ 2, 3
5	$\neg J$	$\neg I$ 2-4

2.  $Q \rightarrow (Q \wedge \neg Q) \therefore \neg Q$



1	$Q \rightarrow (Q \wedge \neg Q)$	
2	$Q$	
3	$Q \wedge \neg Q$	$\rightarrow E$ 1, 2
4	$\neg Q$	$\wedge E$ 3
5	$\perp$	$\neg E$ 2, 4
6	$\neg Q$	$\neg I$ 2-5

3.  $A \rightarrow (B \rightarrow C) \therefore (A \wedge B) \rightarrow C$

1	$A \rightarrow (B \rightarrow C)$	
2	$A \wedge B$	
3	$A$	$\wedge E$ 2
4	$B \rightarrow C$	$\rightarrow E$ 1, 3
5	$B$	$\wedge E$ 2
6	$C$	$\rightarrow E$ 4, 5
7	$(A \wedge B) \rightarrow C$	$\rightarrow I$ 2-6

4.  $K \wedge L \therefore K \leftrightarrow L$

1	$K \wedge L$	
2	$K$	
3	$L$	$\wedge E$ 1
4	$L$	
5	$K$	$\wedge E$ 1
6	$K \leftrightarrow L$	$\leftrightarrow I$ 2-3, 4-5

5.  $(C \wedge D) \vee E \therefore E \vee D$

1		$(C \wedge D) \vee E$	
2		$C \wedge D$	
3		$D$	$\wedge E$ 2
4		$E \vee D$	$\vee I$ 3
5		$E$	
6		$E \vee D$	$\vee I$ 5
7		$E \vee D$	$\vee E$ 1, 2-4, 5-6

6.  $A \leftrightarrow B, B \leftrightarrow C \therefore A \leftrightarrow C$

1		$A \leftrightarrow B$	
2		$B \leftrightarrow C$	
3		$A$	
4		$B$	$\leftrightarrow E$ 1, 3
5		$C$	$\leftrightarrow E$ 2, 4
6		$C$	
7		$B$	$\leftrightarrow E$ 2, 6
8		$A$	$\leftrightarrow E$ 1, 7
9		$A \leftrightarrow C$	$\leftrightarrow I$ 3-5, 6-8

7.  $\neg F \rightarrow G, F \rightarrow H \therefore G \vee H$

1	$\neg F \rightarrow G$	
2	$F \rightarrow H$	
3	$\neg(G \vee H)$	
4	$F$	
5	$H$	$\rightarrow E$ 2, 4
6	$G \vee H$	$\vee I$ 5
7	$\perp$	$\neg E$ 3, 6
8	$\neg F$	$\neg I$ 4-7
9	$G$	$\rightarrow E$ 1, 8
10	$G \vee H$	$\vee I$ 9
11	$\perp$	$\neg E$ 3, 10
12	$G \vee H$	IP 3-11

8.  $(Z \wedge K) \vee (K \wedge M), K \rightarrow D \therefore D$

1	$(Z \wedge K) \vee (K \wedge M)$	
2	$K \rightarrow D$	
3	$Z \wedge K$	
4	$K$	$\wedge E$ 3
5	$K \wedge M$	
6	$K$	$\wedge E$ 5
7	$K$	$\vee E$ 1, 3-4, 5-6
8	$D$	$\rightarrow E$ 2, 7

9.  $P \wedge (Q \vee R), P \rightarrow \neg R \therefore Q \vee E$

1	$P \wedge (Q \vee R)$	
2	$P \rightarrow \neg R$	
3	$P$	$\wedge E$ 1
4	$\neg R$	$\rightarrow E$ 2, 3
5	$Q \vee R$	$\wedge E$ 1
6	$Q$	
7	$Q \vee E$	$\vee I$ 6
8	$R$	
9	$\perp$	$\neg E$ 8, 4
10	$Q \vee E$	X 9
11	$Q \vee E$	$\vee E$ 5, 6–7, 8–10

10.  $S \leftrightarrow T \therefore S \leftrightarrow (T \vee S)$

1	$S \leftrightarrow T$	
	$S$	
2	$T$	$\leftrightarrow E$ 1, 2
3	$T \vee S$	$\vee I$ 3
4	$T \vee S$	
5	$T$	
6	$S$	$\leftrightarrow E$ 1, 6
7	$S$	
8	$S \wedge S$	$\wedge I$ 8, 8
9	$S$	$\wedge E$ 9
10	$S$	$\vee E$ 5, 6-7, 8-10
11	$S \leftrightarrow (T \vee S)$	$\leftrightarrow I$ 2-4, 5-11

11.  $\neg(P \rightarrow Q) \therefore \neg Q$

1	$\neg(P \rightarrow Q)$	
	$Q$	
2	$P$	
3	$Q \wedge Q$	$\wedge I$ 2, 2
4	$Q$	$\wedge E$ 4
5	$P \rightarrow Q$	$\rightarrow I$ 3-5
6	$\perp$	$\neg E$ 6, 1
7	$\neg Q$	$\neg I$ 2-7

12.  $\neg(P \rightarrow Q) \therefore P$

1	$\neg(P \rightarrow Q)$	
	$\neg P$	
2	$\neg P$	
	$P$	
3	$P$	
	$\perp$	$\neg E$ 3, 2
4	$\perp$	
	$Q$	$X$ 4
5	$Q$	
	$P \rightarrow Q$	$\rightarrow I$ 3-5
6	$P \rightarrow Q$	
	$\perp$	$\neg E$ 6, 1
7	$\perp$	
	$P$	$IP$ 2-7
8	$P$	

## CHAPTER 18

# *Additional rules for TFL*

**A.** The following proofs are missing their citations (rule and line numbers). Add them wherever they are required:

1	$W \rightarrow \neg B$	
2	$A \wedge W$	
3	$B \vee (J \wedge K)$	
4	$W$	$\wedge E$ 2
5	$\neg B$	$\rightarrow E$ 1, 4
6	$J \wedge K$	DS 3, 5
7	$K$	$\wedge E$ 6

1	$L \leftrightarrow \neg O$													
2	$L \vee \neg O$													
3	<table style="border-collapse: collapse; margin-left: 10px;"> <tr> <td style="border-left: 1px solid black; padding-left: 5px;"><math>\neg L</math></td> <td></td> </tr> <tr> <td style="border-left: 1px solid black; padding-left: 5px;"><math>\neg O</math></td> <td style="padding-left: 10px;">DS 2, 3</td> </tr> <tr> <td style="border-left: 1px solid black; padding-left: 5px;"><math>L</math></td> <td style="padding-left: 10px;"><math>\leftrightarrow E</math> 1, 4</td> </tr> <tr> <td style="border-left: 1px solid black; padding-left: 5px;"><math>\perp</math></td> <td style="padding-left: 10px;"><math>\neg E</math> 5, 3</td> </tr> <tr> <td style="border-left: 1px solid black; padding-left: 5px;"><math>\neg\neg L</math></td> <td style="padding-left: 10px;"><math>\neg I</math> 3-6</td> </tr> <tr> <td style="border-left: 1px solid black; padding-left: 5px;"><math>L</math></td> <td style="padding-left: 10px;">DNE 7</td> </tr> </table>	$\neg L$		$\neg O$	DS 2, 3	$L$	$\leftrightarrow E$ 1, 4	$\perp$	$\neg E$ 5, 3	$\neg\neg L$	$\neg I$ 3-6	$L$	DNE 7	
$\neg L$														
$\neg O$	DS 2, 3													
$L$	$\leftrightarrow E$ 1, 4													
$\perp$	$\neg E$ 5, 3													
$\neg\neg L$	$\neg I$ 3-6													
$L$	DNE 7													
4	$\neg O$	DS 2, 3												
5	$L$	$\leftrightarrow E$ 1, 4												
6	$\perp$	$\neg E$ 5, 3												
7	$\neg\neg L$	$\neg I$ 3-6												
8	$L$	DNE 7												

1	$Z \rightarrow (C \wedge \neg N)$	
2	$\neg Z \rightarrow (N \wedge \neg C)$	
3	$\neg(N \vee C)$	
4	$\neg N \wedge \neg C$	DeM 3
5	$\neg N$	$\wedge E$ 4
6	$\neg C$	$\wedge E$ 4
7	$Z$	
8	$C \wedge \neg N$	$\rightarrow E$ 1, 7
9	$C$	$\wedge E$ 8
10	$\perp$	$\neg E$ 9, 6
11	$\neg Z$	$\neg I$ 7–10
12	$N \wedge \neg C$	$\rightarrow E$ 2, 11
13	$N$	$\wedge E$ 12
14	$\perp$	$\neg E$ 13, 5
15	$\neg\neg(N \vee C)$	$\neg I$ 3–14
16	$N \vee C$	DNE 15

**B.** Give a proof for each of these arguments:

1.  $E \vee F, F \vee G, \neg F \therefore E \wedge G$

1	$E \vee F$	
2	$F \vee G$	
3	$\neg F$	
4	$E$	DS 1, 3
5	$G$	DS 2, 3
6	$E \wedge G$	$\wedge I$ 4, 5

2.  $M \vee (N \rightarrow M) \therefore \neg M \rightarrow \neg N$



1	$M \vee (N \rightarrow M)$	
2	$\neg M$	
3	$N \rightarrow M$	DS 1, 2
4	$\neg N$	MT 3, 2
5	$\neg M \rightarrow \neg N$	$\rightarrow$ I 2-4

3.  $(M \vee N) \wedge (O \vee P), N \rightarrow P, \neg P \therefore M \wedge O$

1	$(M \vee N) \wedge (O \vee P)$	
2	$N \rightarrow P$	
3	$\neg P$	
4	$\neg N$	MT 2, 3
5	$M \vee N$	$\wedge$ E 1
6	$M$	DS 5, 4
7	$O \vee P$	$\wedge$ E 1
8	$O$	DS 7, 3
9	$M \wedge O$	$\wedge$ I 6, 8

4.  $(X \wedge Y) \vee (X \wedge Z), \neg(X \wedge D), D \vee M \therefore M$

1	$(X \wedge Y) \vee (X \wedge Z)$	
2	$\neg(X \wedge D)$	
3	$D \vee M$	
	<hr style="width: 100%;"/>	
4	$X \wedge Y$	
5	$X$	$\wedge E$ 4
6	$X \wedge Z$	
7	$X$	$\wedge E$ 6
8	$X$	$\vee E$ 1, 4–5, 6–7
9	$D$	
10	$X \wedge D$	$\wedge I$ 8, 9
11	$\perp$	$\neg E$ 10, 2
12	$\neg D$	$\neg I$ 9–11
13	$M$	$DS$ 3, 12

## CHAPTER 19

# *Proof-theoretic concepts*

A. Show that each of the following sentences is a theorem:

1.  $0 \rightarrow 0$

1			$0$	
2			$0$	R 1
3		$0 \rightarrow 0$		$\rightarrow$ I 1-2

2.  $N \vee \neg N$

1			$\neg(N \vee \neg N)$	
2				$N$
3			$N \vee \neg N$	$\vee$ I 2
4			$\perp$	$\neg$ E 1, 3
5		$\neg N$		$\neg$ I 2-4
6		$N \vee \neg N$		$\vee$ I 5
7		$\perp$		$\neg$ E 1, 6
8		$N \vee \neg N$		IP 1-7

3.  $J \leftrightarrow [J \vee (L \wedge \neg L)]$

1	$J$			
2	$J \vee (L \wedge \neg L)$	$\vee I$ 1		
3	$J \vee (L \wedge \neg L)$			
4	<table style="border-collapse: collapse; margin-left: 2em;"> <tr> <td style="border-left: 1px solid black; padding-left: 5px; border-bottom: 1px solid black;"><math>L \wedge \neg L</math></td> <td></td> </tr> </table>	$L \wedge \neg L$		
$L \wedge \neg L$				
5	<table style="border-collapse: collapse; margin-left: 2em;"> <tr> <td style="border-left: 1px solid black; padding-left: 5px;"><math>L</math></td> <td><math>\wedge E</math> 4</td> </tr> </table>	$L$	$\wedge E$ 4	
$L$	$\wedge E$ 4			
6	<table style="border-collapse: collapse; margin-left: 2em;"> <tr> <td style="border-left: 1px solid black; padding-left: 5px;"><math>\neg L</math></td> <td><math>\wedge E</math> 4</td> </tr> </table>	$\neg L$	$\wedge E$ 4	
$\neg L$	$\wedge E$ 4			
7	<table style="border-collapse: collapse; margin-left: 2em;"> <tr> <td style="border-left: 1px solid black; padding-left: 5px;"><math>\perp</math></td> <td><math>\neg E</math> 5, 6</td> </tr> </table>	$\perp$	$\neg E$ 5, 6	
$\perp$	$\neg E$ 5, 6			
8	$\neg(L \wedge \neg L)$	$\neg I$ 4-7		
9	$J$	$DS$ 3, 8		
10	$J \leftrightarrow [J \vee (L \wedge \neg L)]$	$\leftrightarrow I$ 1-2, 3-9		

4.  $((A \rightarrow B) \rightarrow A) \rightarrow A$

1	$(A \rightarrow B) \rightarrow A$			
2	<table style="border-collapse: collapse; margin-left: 2em;"> <tr> <td style="border-left: 1px solid black; padding-left: 5px;"><math>\neg A</math></td> <td></td> </tr> </table>	$\neg A$		
$\neg A$				
3	$\neg(A \rightarrow B)$	$MT$ 1, 2		
4	<table style="border-collapse: collapse; margin-left: 2em;"> <tr> <td style="border-left: 1px solid black; padding-left: 5px;"><math>A</math></td> <td></td> </tr> </table>	$A$		
$A$				
5	<table style="border-collapse: collapse; margin-left: 2em;"> <tr> <td style="border-left: 1px solid black; padding-left: 5px;"><math>\perp</math></td> <td><math>\neg E</math> 4, 2</td> </tr> </table>	$\perp$	$\neg E$ 4, 2	
$\perp$	$\neg E$ 4, 2			
6	<table style="border-collapse: collapse; margin-left: 2em;"> <tr> <td style="border-left: 1px solid black; padding-left: 5px;"><math>B</math></td> <td><math>X</math> 5</td> </tr> </table>	$B$	$X$ 5	
$B$	$X$ 5			
7	$A \rightarrow B$	$\rightarrow I$ 4-6		
8	$\perp$	$\neg E$ 7, 3		
9	$A$	$IP$ 1-8		
10	$((A \rightarrow B) \rightarrow A) \rightarrow A$	$\rightarrow I$ 1-9		

**B.** Provide proofs to show each of the following:

1.  $C \rightarrow (E \wedge G), \neg C \rightarrow G \vdash G$

1	$C \rightarrow (E \wedge G)$	
2	$\neg C \rightarrow G$	
3	$\neg G$	
4	$C$	
5	$E \wedge G$	$\rightarrow E$ 1, 4
6	$G$	$\wedge E$ 5
7	$\perp$	$\neg E$ 3, 6
8	$\neg C$	$\neg I$ 4-7
9	$G$	$\rightarrow E$ 2, 8
10	$\perp$	$\neg E$ 3, 9
11	$G$	$IP$ 3-10

2.  $M \wedge (\neg N \rightarrow \neg M) \vdash (N \wedge M) \vee \neg M$

1	$M \wedge (\neg N \rightarrow \neg M)$	
2	$M$	$\wedge E$ 1
3	$\neg N \rightarrow \neg M$	$\wedge E$ 1
4	$\neg N$	
5	$\neg M$	$\rightarrow E$ 3, 4
6	$\perp$	$\neg E$ 2, 5
7	$N$	$IP$ 4-6
8	$N \wedge M$	$\wedge I$ 7, 2
9	$(N \wedge M) \vee \neg M$	$\vee I$ 8

3.  $(Z \wedge K) \leftrightarrow (Y \wedge M), D \wedge (D \rightarrow M) \vdash Y \rightarrow Z$

1	$(Z \wedge K) \leftrightarrow (Y \wedge M)$	
2	$D \wedge (D \rightarrow M)$	
3	$D$	$\wedge E$ 2
4	$D \rightarrow M$	$\wedge E$ 2
5	$M$	$\rightarrow E$ 4, 3
6	$Y$	
7	$Y \wedge M$	$\wedge I$ 6, 5
8	$Z \wedge K$	$\leftrightarrow E$ 1, 7
9	$Z$	$\wedge E$ 8
10	$Y \rightarrow Z$	$\rightarrow I$ 6–9
4. $(W \vee X) \vee (Y \vee Z), X \rightarrow Y, \neg Z \vdash W \vee Y$		
1	$(W \vee X) \vee (Y \vee Z)$	
2	$X \rightarrow Y$	
3	$\neg Z$	
4	$W \vee X$	
5	$W$	
6	$W \vee Y$	$\vee I$ 5
7	$X$	
8	$Y$	$\rightarrow E$ 2, 7
9	$W \vee Y$	$\vee I$ 8
10	$W \vee Y$	$\vee E$ 4, 5–6, 7–9
11	$Y \vee Z$	
12	$Y$	$DS$ 11, 3
13	$W \vee Y$	$\vee I$ 12
14	$W \vee Y$	$\vee E$ 1, 4–10, 11–13

**C.** Show that each of the following pairs of sentences are provably equivalent:

1.  $R \leftrightarrow E, E \leftrightarrow R$

1	$R \leftrightarrow E$	
2	$E$	
3	$R$	$\leftrightarrow E$ 1, 2
4	$R$	
5	$E$	$\leftrightarrow E$ 1, 4
6	$E \leftrightarrow R$	$\leftrightarrow I$ 2-3, 4-5

1	$E \leftrightarrow R$	
2	$E$	
3	$R$	$\leftrightarrow E$ 1, 2
4	$R$	
5	$E$	$\leftrightarrow E$ 1, 4
6	$R \leftrightarrow E$	$\leftrightarrow I$ 4-5, 2-3

2.  $G, \neg\neg\neg\neg G$

1	$G$	
2	$\neg\neg\neg G$	
3	$\neg G$	DNE 2
4	$\perp$	$\neg E$ 1, 3
5	$\neg\neg\neg\neg G$	$\neg I$ 2-4

1	$\neg\neg\neg\neg G$	
2	$\neg\neg G$	DNE 1
3	$G$	DNE 2

3.  $T \rightarrow S, \neg S \rightarrow \neg T$

1	$T \rightarrow S$	
2	$\neg S$	
3	$\neg T$	MT 1, 2
4	$\neg S \rightarrow \neg T$	$\rightarrow I$ 2-3

1	$\neg S \rightarrow \neg T$	
2	$T$	
3	$\neg S$	
4	$\neg T$	$\rightarrow E$ 1, 3
5	$\perp$	$\neg E$ 2, 4
6	$\neg\neg S$	$\neg I$ 3-5
7	$S$	DNE 6
8	$T \rightarrow S$	$\rightarrow I$ 2-7

4.  $U \rightarrow I, \neg(U \wedge \neg I)$

1	$U \rightarrow I$	
2	$U \wedge \neg I$	
3	$U$	$\wedge E$ 2
4	$\neg I$	$\wedge E$ 2
5	$I$	$\rightarrow E$ 1, 3
6	$\perp$	$\rightarrow E$ 4, 5
7	$\neg(U \wedge \neg I)$	$\neg I$ 2-6

1		$\neg(U \wedge \neg I)$	
		-----	
2		$U$	
		-----	
3			$\neg I$
			-----
4			$U \wedge \neg I$ $\wedge I$ 2, 3
			-----
5			$\perp$ $\neg E$ 4, 1
			-----
6			$\neg\neg I$ $\neg I$ 3-5
			-----
7			$I$ DNE 6
			-----
8		$U \rightarrow I$	$\rightarrow I$ 2-7



5.  $\neg(C \rightarrow D), C \wedge \neg D$ 

1	$C \wedge \neg D$	
2	$C$	$\wedge E$ 1
3	$\neg D$	$\wedge E$ 1
4	$C \rightarrow D$	
5	$D$	$\rightarrow E$ 4, 2
6	$\perp$	$\neg E$ 5, 3
7	$\neg(C \rightarrow D)$	$\neg I$ 4-6

1	$\neg(C \rightarrow D)$	
2	$D$	
3	$C$	
4	$D$	R 2
5	$C \rightarrow D$	$\rightarrow I$ 3-4
6	$\perp$	$\neg E$ 5, 1
7	$\neg D$	$\neg I$ 2-6
8	$\neg C$	
9	$C$	
10	$\perp$	$\neg E$ 9, 8
11	$D$	X 10
12	$C \rightarrow D$	$\rightarrow I$ 9-11
13	$\perp$	$\neg E$ 12, 1
14	$\neg\neg C$	$\neg I$ 8-13
15	$C$	DNE 14
16	$C \wedge \neg D$	$\wedge I$ 15, 7

6.  $\neg G \leftrightarrow H, \neg(G \leftrightarrow H)$ 

1	$\neg G \leftrightarrow H$	
2	$G \leftrightarrow H$	
3	$G$	
4	$H$	$\leftrightarrow E$ 2, 3
5	$\neg G$	$\leftrightarrow E$ 1, 4
6	$\perp$	$\neg E$ 3, 5
7	$\neg G$	
8	$H$	$\leftrightarrow E$ 1, 7
9	$G$	$\leftrightarrow E$ 2, 8
10	$\perp$	$\neg E$ 9, 7
11	$\perp$	LEM 3-6, 7-10

1	$\neg(G \leftrightarrow H)$	
2	$\neg G$	
3	$\neg H$	
4	$G$	
5	$\perp$	$\neg E$ 4, 2
6	$H$	$X$ 5
7	$H$	
8	$\perp$	$\neg E$ 7, 3
9	$G$	$X$ 8
10	$G \leftrightarrow H$	$\leftrightarrow I$ 4–6, 7–9
11	$\perp$	$\neg E$ 10, 1
12	$H$	IP 3–11
13	$H$	
14	$G$	
15	$G$	
16	$H$	R 13
17	$H$	
18	$G$	R 14
19	$G \leftrightarrow H$	$\leftrightarrow I$ 15–16, 17–18
20	$\perp$	$\neg E$ 19, 1
21	$\neg G$	$\neg I$ 14–20
22	$\neg G \leftrightarrow H$	$\leftrightarrow I$ 2–12, 13–21

**D.** If you know that  $\mathcal{A} \vdash \mathcal{B}$ , what can you say about  $(\mathcal{A} \wedge \mathcal{C}) \vdash \mathcal{B}$ ? What about  $(\mathcal{A} \vee \mathcal{C}) \vdash \mathcal{B}$ ? Explain your answers.

If  $\mathcal{A} \vdash \mathcal{B}$ , then  $(\mathcal{A} \wedge \mathcal{C}) \vdash \mathcal{B}$ . After all, if  $\mathcal{A} \vdash \mathcal{B}$ , then there is some proof with assumption  $\mathcal{A}$  that ends with  $\mathcal{B}$ , and no undischarged assumptions other than  $\mathcal{A}$ . Now, if we start a proof with assumption  $(\mathcal{A} \wedge \mathcal{C})$ , we can obtain  $\mathcal{A}$  by  $\wedge E$ . We can now copy and paste the original proof of  $\mathcal{B}$  from  $\mathcal{A}$ , adding 1 to every line number and line number citation. The

result will be a proof of  $\mathcal{B}$  from assumption  $\mathcal{A}$ .

However, we cannot prove much from  $(\mathcal{A} \vee \mathcal{C})$ . After all, it might be impossible to prove  $\mathcal{B}$  from  $\mathcal{C}$ .

**E.** In this chapter, we claimed that it is just as hard to show that two sentences are not provably equivalent, as it is to show that a sentence is not a theorem. Why did we claim this? (*Hint:* think of a sentence that would be a theorem iff  $\mathcal{A}$  and  $\mathcal{B}$  were provably equivalent.)

Consider the sentence  $\mathcal{A} \leftrightarrow \mathcal{B}$ . Suppose we can show that this is a theorem. So we can prove it, with no assumptions, in  $m$  lines, say. Then if we assume  $\mathcal{A}$  and copy and paste the proof of  $\mathcal{A} \leftrightarrow \mathcal{B}$  (changing the line numbering), we will have a deduction of this shape:

1		$\mathcal{A}$	
$m + 1$		$\mathcal{A} \leftrightarrow \mathcal{B}$	
$m + 2$		$\mathcal{B}$	$\leftrightarrow E\ m + 1, 1$

This will show that  $\mathcal{A} \vdash \mathcal{B}$ . In exactly the same way, we can show that  $\mathcal{B} \vdash \mathcal{A}$ . So if we can show that  $\mathcal{A} \leftrightarrow \mathcal{B}$  is a theorem, we can show that  $\mathcal{A}$  and  $\mathcal{B}$  are provably equivalent.

Conversely, suppose we can show that  $\mathcal{A}$  and  $\mathcal{B}$  are provably equivalent. Then we can prove  $\mathcal{B}$  from the assumption of  $\mathcal{A}$  in  $m$  lines, say, and prove  $\mathcal{A}$  from the assumption of  $\mathcal{B}$  in  $n$  lines, say. Copying and pasting these proofs together (changing the line numbering where appropriate), we obtain:

1			$\mathcal{A}$	
$m$			$\mathcal{B}$	
$m + 1$			$\mathcal{B}$	
$m + n$			$\mathcal{A}$	
$m + n + 1$		$\mathcal{A} \leftrightarrow \mathcal{B}$		$\leftrightarrow I\ 1-m, m + 1-m + n$

Thus showing that  $\mathcal{A} \leftrightarrow \mathcal{B}$  is a theorem.

There was nothing special about  $\mathcal{A}$  and  $\mathcal{B}$  in this. So what this shows is that the problem of showing that two sentences are provably equivalent is, essentially, the same problem as showing that a certain kind of sentence (a biconditional) is a theorem.

## CHAPTER 20

# *Derived rules*

**A.** Provide proof schemes that justify the addition of the third and fourth De Morgan rules as derived rules.

Third rule:

$m$	$\neg A \wedge \neg B$			
$k$	$\neg A$	$\wedge E\ m$		
$k+1$	$\neg B$	$\wedge E\ m$		
$k+2$	<table style="border-collapse: collapse; margin-left: 1em;"> <tr> <td style="border-right: 1px solid black; padding-right: 5px;"><math>A \vee B</math></td> <td></td> </tr> </table>	$A \vee B$		
$A \vee B$				
$k+3$	<table style="border-collapse: collapse; margin-left: 1em;"> <tr> <td style="border-right: 1px solid black; padding-right: 5px;"><math>A</math></td> <td></td> </tr> </table>	$A$		
$A$				
$k+4$	<table style="border-collapse: collapse; margin-left: 1em;"> <tr> <td style="border-right: 1px solid black; padding-right: 5px;"><math>\perp</math></td> <td style="padding-left: 5px;"><math>\neg E\ k+3, k</math></td> </tr> </table>	$\perp$	$\neg E\ k+3, k$	
$\perp$	$\neg E\ k+3, k$			
$k+5$	<table style="border-collapse: collapse; margin-left: 1em;"> <tr> <td style="border-right: 1px solid black; padding-right: 5px;"><math>B</math></td> <td></td> </tr> </table>	$B$		
$B$				
$k+6$	<table style="border-collapse: collapse; margin-left: 1em;"> <tr> <td style="border-right: 1px solid black; padding-right: 5px;"><math>\perp</math></td> <td style="padding-left: 5px;"><math>\neg E\ k+5, k+1</math></td> </tr> </table>	$\perp$	$\neg E\ k+5, k+1$	
$\perp$	$\neg E\ k+5, k+1$			
$k+7$	$\perp$	$\vee E\ k+2, k+3-k+4, k+5-k+6$		
$k+8$	$\neg(A \vee B)$	$\neg I\ k+2-k+7$		

Fourth rule:

$m$	$\neg(A \vee B)$					
$k$	<table style="border-collapse: collapse; margin-left: 0.5em;"> <tr> <td style="border-right: 1px solid black; padding-right: 0.5em;"><math>A</math></td> <td></td> </tr> <tr> <td style="border-right: 1px solid black; padding-right: 0.5em;"><math>\hline A \vee B</math></td> <td></td> </tr> </table>	$A$		$\hline A \vee B$		
$A$						
$\hline A \vee B$						
$k+1$	$A \vee B$	$\vee I\ k$				
$k+2$	$\perp$	$\neg E\ k+1, m$				
$k+3$	$\neg A$	$\neg I\ k-k+2$				
$k+4$	<table style="border-collapse: collapse; margin-left: 0.5em;"> <tr> <td style="border-right: 1px solid black; padding-right: 0.5em;"><math>B</math></td> <td></td> </tr> <tr> <td style="border-right: 1px solid black; padding-right: 0.5em;"><math>\hline A \vee B</math></td> <td></td> </tr> </table>	$B$		$\hline A \vee B$		
$B$						
$\hline A \vee B$						
$k+5$	$A \vee B$	$\vee I\ k+4$				
$k+6$	$\perp$	$\neg E\ k+5, m$				
$k+7$	$\neg B$	$\neg I\ k+4-k+6$				
$k+8$	$\neg A \wedge \neg B$	$\wedge I\ k+3, k+7$				

**B.** The proofs you offered in response to the practice exercises of §§18–19 used derived rules. Replace the use of derived rules, in such proofs, with only basic rules. You will find some ‘repetition’ in the resulting proofs; in such cases, offer a streamlined proof using only basic rules. (This will give you a sense, both of the power of derived rules, and of how all the rules interact.)

## CHAPTER 21

# *Soundness and completeness*

### Practice exercises

- A. Use either a derivation or a truth table for each of the following.
1. Show that  $A \rightarrow [((B \wedge C) \vee D) \rightarrow A]$  is a theorem..
  2. Show that  $A \rightarrow (A \rightarrow B)$  is not a theorem.
  3. Show that the sentence  $A \rightarrow \neg A$  is not a contradiction.
  4. Show that the sentence  $A \leftrightarrow \neg A$  is a contradiction.
  5. Show that the sentence  $\neg(W \rightarrow (J \vee J))$  is contingent.
  6. Show that the sentence  $\neg(X \vee (Y \vee Z)) \vee (X \vee (Y \vee Z))$  is not contingent.
  7. Show that the sentence  $B \rightarrow \neg S$  is equivalent to the sentence  $\neg\neg B \rightarrow \neg S$ .
  8. Show that the sentence  $\neg(X \vee O)$  is not equivalent to the sentence  $X \wedge O$

9. Show that the sentences  $\neg(A \vee B)$ ,  $C$ ,  $C \rightarrow A$  are jointly inconsistent.
10. Show that the sentences  $\neg(A \vee B)$ ,  $\neg B$ ,  $B \rightarrow A$  are jointly consistent.
11. Show that  $\neg(A \vee (B \vee C)) \therefore \neg C$  is valid.
12. Show that  $\neg(A \wedge (B \vee C)) \therefore \neg C$  is invalid.

**B.** Use either a derivation or a truth table for each of the following.

1. Show that  $A \rightarrow (B \rightarrow A)$  is a theorem.
2. Show that  $\neg(((N \leftrightarrow Q) \vee Q) \vee N)$  is not a theorem.
3. Show that  $Z \vee (\neg Z \leftrightarrow Z)$  is contingent.
4. show that  $(L \leftrightarrow ((N \rightarrow N) \rightarrow L)) \vee H$  is not contingent.
5. Show that  $(A \leftrightarrow A) \wedge (B \wedge \neg B)$  is a contradiction.
6. Show that  $(B \leftrightarrow (C \vee B))$  is not a contradiction.
7. Show that  $((\neg X \leftrightarrow X) \vee X)$  is equivalent to  $X$ .
8. Show that  $F \wedge (K \wedge R)$  is not equivalent to  $(F \leftrightarrow (K \leftrightarrow R))$ .
9. Show that the sentences  $\neg(W \rightarrow W)$ ,  $(W \leftrightarrow W) \wedge W$ ,  $E \vee (W \rightarrow \neg(E \wedge W))$  are jointly inconsistent.
10. Show that the sentences  $\neg R \vee C$ ,  $(C \wedge R) \rightarrow \neg R$ ,  $(\neg(R \vee R) \rightarrow R)$  are jointly consistent.
11. Show that  $\neg\neg(C \leftrightarrow \neg C)$ ,  $((G \vee C) \vee G) \therefore ((G \rightarrow C) \wedge G)$  is valid.
12. Show that  $\neg\neg L$ ,  $(C \rightarrow \neg L) \rightarrow C) \therefore \neg C$  is invalid.

## CHAPTER 23

# *Sentences with one quantifier*

A. Here are the syllogistic figures identified by Aristotle and his successors, along with their medieval names:

1. **Barbara.** All G are F. All H are G. So: All H are F  
 $\forall x(G(x) \rightarrow F(x)), \forall x(H(x) \rightarrow G(x)) \therefore \forall x(H(x) \rightarrow F(x))$
2. **Celarent.** No G are F. All H are G. So: No H are F  
 $\forall x(G(x) \rightarrow \neg F(x)), \forall x(H(x) \rightarrow G(x)) \therefore \forall x(H(x) \rightarrow \neg F(x))$
3. **Ferio.** No G are F. Some H is G. So: Some H is not F  
 $\forall x(G(x) \rightarrow \neg F(x)), \exists x(H(x) \wedge G(x)) \therefore \exists x(H(x) \wedge \neg F(x))$
4. **Darii.** All G are H. Some H is G. So: Some H is F.  
 $\forall x(G(x) \rightarrow F(x)), \exists x(H(x) \wedge G(x)) \therefore \exists x(H(x) \wedge F(x))$
5. **Camestres.** All F are G. No H are G. So: No H are F.  
 $\forall x(F(x) \rightarrow G(x)), \forall x(H(x) \rightarrow \neg G(x)) \therefore \forall x(H(x) \rightarrow \neg F(x))$
6. **Cesare.** No F are G. All H are G. So: No H are F.  
 $\forall x(F(x) \rightarrow \neg G(x)), \forall x(H(x) \rightarrow G(x)) \therefore \forall x(H(x) \rightarrow \neg F(x))$
7. **Baroko.** All F are G. Some H is not G. So: Some H is not F.  
 $\forall x(F(x) \rightarrow G(x)), \exists x(H(x) \wedge \neg G(x)) \therefore \exists x(H(x) \wedge \neg F(x))$
8. **Festino.** No F are G. Some H are G. So: Some H is not F.  
 $\forall x(F(x) \rightarrow \neg G(x)), \exists x(H(x) \wedge G(x)) \therefore \exists x(H(x) \wedge \neg F(x))$
9. **Datisi.** All G are F. Some G is H. So: Some H is F.  
 $\forall x(G(x) \rightarrow F(x)), \exists x(G(x) \wedge H(x)) \therefore \exists x(H(x) \wedge F(x))$
10. **Disamis.** Some G is F. All G are H. So: Some H is F.  
 $\exists x(G(x) \wedge F(x)), \forall x(G(x) \rightarrow H(x)) \therefore \exists x(H(x) \wedge F(x))$
11. **Ferison.** No G are F. Some G is H. So: Some H is not F.



$$\forall x(G(x) \rightarrow \neg F(x)), \exists x(G(x) \wedge H(x)) \therefore \exists x(H(x) \wedge \neg F(x))$$

12. **Bokardo.** Some G is not F. All G are H. So: Some H is not F.

$$\exists x(G(x) \wedge \neg F(x)), \forall x(G(x) \rightarrow H(x)) \therefore \exists x(H(x) \wedge \neg F(x))$$

13. **Camenes.** All F are G. No G are H So: No H is F.

$$\forall x(F(x) \rightarrow G(x)), \forall x(G(x) \rightarrow \neg H(x)) \therefore \forall x(H(x) \rightarrow \neg F(x))$$

14. **Dimaris.** Some F is G. All G are H. So: Some H is F.

$$\exists x(F(x) \wedge G(x)), \forall x(G(x) \rightarrow H(x)) \therefore \exists x(H(x) \wedge F(x))$$

15. **Fresison.** No F are G. Some G is H. So: Some H is not F.

$$\forall x(F(x) \rightarrow \neg G(x)), \exists x(G(x) \wedge H(x)) \therefore \exists x(H(x) \wedge \neg F(x))$$

Symbolize each argument in FOL.

**B.** Using the following symbolization key:

domain: people

$K(x)$ : \_\_\_\_\_ $x$  knows the combination to the safe

$S(x)$ : \_\_\_\_\_ $x$  is a spy

$V(x)$ : \_\_\_\_\_ $x$  is a vegetarian

$h$ : Hofthor

$i$ : Ingmar

symbolize the following sentences in FOL:

1. Neither Hofthor nor Ingmar is a vegetarian.

$$\neg V(h) \wedge \neg V(i)$$

2. No spy knows the combination to the safe.

$$\forall x(S(x) \rightarrow \neg K(x))$$

3. No one knows the combination to the safe unless Ingmar does.

$$\forall x \neg K(x) \vee K(i)$$

4. Hofthor is a spy, but no vegetarian is a spy.

$$S(h) \wedge \forall x(V(x) \rightarrow \neg S(x))$$

**C.** Using this symbolization key:

domain: all animals

$A(x)$ : \_\_\_\_\_ $x$  is an alligator.

$M(x)$ : \_\_\_\_\_ $x$  is a monkey.

$R(x)$ : \_\_\_\_\_ $x$  is a reptile.

$Z(x)$ : \_\_\_\_\_ $x$  lives at the zoo.

$a$ : Amos

$b$ : Bouncer

$c$ : Cleo

symbolize each of the following sentences in FOL:

1. Amos, Bouncer, and Cleo all live at the zoo.  
 $Z(a) \wedge Z(b) \wedge Z(c)$
2. Bouncer is a reptile, but not an alligator.  
 $R(b) \wedge \neg A(b)$
3. Some reptile lives at the zoo.  
 $\exists x(R(x) \wedge Z(x))$
4. Every alligator is a reptile.  
 $\forall x(A(x) \rightarrow R(x))$
5. Any animal that lives at the zoo is either a monkey or an alligator.  
 $\forall x(Z(x) \rightarrow (M(x) \vee A(x)))$
6. There are reptiles which are not alligators.  
 $\exists x(R(x) \wedge \neg A(x))$
7. If any animal is an reptile, then Amos is.  
 $\exists x R(x) \rightarrow R(a)$
8. If any animal is an alligator, then it is a reptile.  
 $\forall x(A(x) \rightarrow R(x))$

**D.** For each argument, write a symbolization key and symbolize the argument in FOL.

1. Willard is a logician. All logicians wear funny hats. So Willard wears a funny hat

domain: people

$L(x)$ : \_\_\_\_\_ $x$  is a logician

$H(x)$ : \_\_\_\_\_ $x$  wears a funny hat

$i$ : Willard

$L(i), \forall x(L(x) \rightarrow H(x)) \therefore H(i)$

2. Nothing on my desk escapes my attention. There is a computer on my desk. As such, there is a computer that does not escape my attention.

domain: physical things

$D(x)$ : \_\_\_\_\_ $x$  is on my desk

$E(x)$ : \_\_\_\_\_ $x$  escapes my attention

$C(x)$ : \_\_\_\_\_ $x$  is a computer

$\forall x(D(x) \rightarrow \neg E(x)), \exists x(D(x) \wedge C(x)) \therefore \exists x(C(x) \wedge \neg E(x))$

3. All my dreams are black and white. Old TV shows are in black and white. Therefore, some of my dreams are old TV shows.

domain: episodes (psychological and televised)

$D(x)$ : \_\_\_\_\_ $x$  is one of my dreams

$B(x)$ : \_\_\_\_\_ $x$  is in black and white

$O(x)$ : \_\_\_\_\_ $x$  is an old TV show

$\forall x(D(x) \rightarrow B(x)), \forall x(O(x) \rightarrow B(x)) \therefore \exists x(D(x) \wedge O(x))$ .

Comment: generic statements are tricky to deal with. Does the second sentence mean that *all* old TV shows are in black and white; or that most of them are; or that most of the things which are in black and white are old TV shows? I have gone with the former, but it is not clear that FOL deals with these well.

4. Neither Holmes nor Watson has been to Australia. A person could see a kangaroo only if they had been to Australia or to a zoo. Although Watson has not seen a kangaroo, Holmes has. Therefore, Holmes has been to a zoo.

domain: people

$A(x)$ : \_\_\_\_\_ $x$  has been to Australia

$K(x)$ : \_\_\_\_\_ $x$  has seen a kangaroo

$Z(x)$ : \_\_\_\_\_ $x$  has been to a zoo

$h$ : Holmes

$a$ : Watson

$\neg A(h) \wedge \neg A(a), \forall x(K(x) \rightarrow (A(x) \vee Z(x))), \neg K(a) \wedge K(h) \therefore Z(h)$

5. No one expects the Spanish Inquisition. No one knows the troubles I've seen. Therefore, anyone who expects the Spanish Inquisition knows the troubles I've seen.

domain: people

$S(x)$ : \_\_\_\_\_ $x$  expects the Spanish Inquisition

$T(x)$ : \_\_\_\_\_ $x$  knows the troubles I've seen

$h$ : Holmes

$a$ : Watson

$\forall x\neg S(x), \forall x\neg T(x) \therefore \forall x(S(x) \rightarrow T(x))$

6. All babies are illogical. Nobody who is illogical can manage a crocodile. Berthold is a baby. Therefore, Berthold is unable to manage a crocodile.

domain: people

$B(x)$ : \_\_\_\_\_ $x$  is a baby

$I(x)$ : \_\_\_\_\_ $x$  is illogical

$C(x)$ : \_\_\_\_\_ $x$  can manage a crocodile

$b$ : Berthold

$\forall x(B(x) \rightarrow I(x)), \forall x(I(x) \rightarrow \neg C(x)), B(b) \therefore \neg C(b)$

## CHAPTER 24

# Multiple generality

A. Using this symbolization key:

domain: all animals

$A(x)$ : \_\_\_\_\_ $_x$  is an alligator

$M(x)$ : \_\_\_\_\_ $_x$  is a monkey

$R(x)$ : \_\_\_\_\_ $_x$  is a reptile

$Z(x)$ : \_\_\_\_\_ $_x$  lives at the zoo

$L(x,y)$ : \_\_\_\_\_ $_x$  loves \_\_\_\_\_ $_y$

$a$ : Amos

$b$ : Bouncer

$c$ : Cleo

symbolize each of the following sentences in FOL:

1. If Cleo loves Bouncer, then Bouncer is a monkey.

$$L(c,b) \rightarrow M(b)$$

2. If both Bouncer and Cleo are alligators, then Amos loves them both.

$$(A(b) \wedge A(c)) \rightarrow (L(a,b) \wedge L(a,c))$$

3. Cleo loves a reptile.

$$\exists x(R(x) \wedge L(c,x))$$

Comment: this English expression is ambiguous; in some contexts, it can be read as a generic, along the lines of 'Cleo loves reptiles'. (Compare 'I do love a good pint'.)

4. Bouncer loves all the monkeys that live at the zoo.  
 $\forall x((M(x) \wedge Z(x)) \rightarrow L(b, x))$
5. All the monkeys that Amos loves love him back.  
 $\forall x((M(x) \wedge L(a, x)) \rightarrow L(x, a))$
6. Every monkey that Cleo loves is also loved by Amos.  
 $\forall x((M(x) \wedge L(c, x)) \rightarrow L(a, x))$
7. There is a monkey that loves Bouncer, but sadly Bouncer does not reciprocate this love.  
 $\exists x(M(x) \wedge L(x, b) \wedge \neg L(b, x))$

**B.** Using the following symbolization key:

domain: all animals

$D(x)$ : \_\_\_\_\_ $x$  is a dog

$S(x)$ : \_\_\_\_\_ $x$  likes samurai movies

$L(x, y)$ : \_\_\_\_\_ $x$  is larger than \_\_\_\_\_ $y$

$r$ : Rave

$h$ : Shane

$d$ : Daisy

symbolize the following sentences in FOL:

1. Rave is a dog who likes samurai movies.  
 $D(r) \wedge S(r)$
2. Rave, Shane, and Daisy are all dogs.  
 $D(r) \wedge D(h) \wedge D(d)$
3. Shane is larger than Rave, and Daisy is larger than Shane.  
 $L(h, r) \wedge L(d, h)$
4. All dogs like samurai movies.  
 $\forall x(D(x) \rightarrow S(x))$
5. Only dogs like samurai movies.  
 $\forall x(S(x) \rightarrow D(x))$   
Comment: the FOL sentence just written does not require that anyone likes samurai movies. The English sentence might suggest that at least some dogs *do* like samurai movies?
6. There is a dog that is larger than Shane.  
 $\exists x(D(x) \wedge L(x, h))$
7. If there is a dog larger than Daisy, then there is a dog larger than Shane.  
 $\exists x(D(x) \wedge L(x, d)) \rightarrow \exists x(D(x) \wedge L(x, h))$
8. No animal that likes samurai movies is larger than Shane.  
 $\forall x(S(x) \rightarrow \neg L(x, h))$

9. No dog is larger than Daisy.  
 $\forall x(D(x) \rightarrow \neg L(x, d))$
10. Any animal that dislikes samurai movies is larger than Rave.  
 $\forall x(\neg S(x) \rightarrow L(x, r))$   
 Comment: this is very poor, though! For ‘dislikes’ does not mean the same as ‘does not like’.
11. There is an animal that is between Rave and Shane in size.  
 $\exists x((L(b, x) \wedge L(x, h)) \vee (L(h, x) \wedge L(x, r)))$
12. There is no dog that is between Rave and Shane in size.  
 $\forall x(D(x) \rightarrow \neg[(L(b, x) \wedge L(x, h)) \vee (L(h, x) \wedge L(x, r))])$
13. No dog is larger than itself.  
 $\forall x(D(x) \rightarrow \neg L(x, x))$
14. Every dog is larger than some dog.  
 $\forall x(D(x) \rightarrow \exists y(D(y) \wedge L(x, y))$   
 Comment: the English sentence is potentially ambiguous here. I have resolved the ambiguity by assuming it should be paraphrased by ‘for every dog, there is a dog smaller than it’.
15. There is an animal that is smaller than every dog.  
 $\exists x\forall y(D(y) \rightarrow L(y, x))$
16. If there is an animal that is larger than any dog, then that animal does not like samurai movies.  
 $\forall x(\forall y(D(y) \rightarrow L(x, y)) \rightarrow \neg S(x))$   
 Comment: I have assumed that ‘larger than any dog’ here means ‘larger than every dog’.

C. Using the symbolization key given, translate each English-language sentence into FOL.

domain: candies

$C(x)$ : \_\_\_\_\_ $x$  has chocolate in it.

$M(x)$ : \_\_\_\_\_ $x$  has marzipan in it.

$S(x)$ : \_\_\_\_\_ $x$  has sugar in it.

$T(x)$ : Boris has tried \_\_\_\_\_ $x$ .

$B(x, y)$ : \_\_\_\_\_ $x$  is better than \_\_\_\_\_ $y$ .

1. Boris has never tried any candy.
2. Marzipan is always made with sugar.
3. Some candy is sugar-free.
4. The very best candy is chocolate.
5. No candy is better than itself.
6. Boris has never tried sugar-free chocolate.
7. Boris has tried marzipan and chocolate, but never together.

8. Any candy with chocolate is better than any candy without it.
9. Any candy with chocolate and marzipan is better than any candy that lacks both.

D. Using the following symbolization key:

domain: people and dishes at a potluck

$R(x)$ : \_\_\_\_\_ $x$  has run out.

$T(x)$ : \_\_\_\_\_ $x$  is on the table.

$F(x)$ : \_\_\_\_\_ $x$  is food.

$P(x)$ : \_\_\_\_\_ $x$  is a person.

$L(x, y)$ : \_\_\_\_\_ $x$  likes \_\_\_\_\_ $y$ .

$e$ : Eli

$f$ : Francesca

$g$ : the guacamole

symbolize the following English sentences in FOL:

1. All the food is on the table.  
 $\forall x(F(x) \rightarrow T(x))$
2. If the guacamole has not run out, then it is on the table.  
 $\neg R(g) \rightarrow T(g)$
3. Everyone likes the guacamole.  
 $\forall x(P(x) \rightarrow L(x, g))$
4. If anyone likes the guacamole, then Eli does.  
 $\exists x(P(x) \wedge L(x, g)) \rightarrow L(e, g)$
5. Francesca only likes the dishes that have run out.  
 $\forall x[(L(f, x) \wedge F(x)) \rightarrow R(x)]$
6. Francesca likes no one, and no one likes Francesca.  
 $\forall x[P(x) \rightarrow (\neg L(f, x) \wedge \neg L(x, f))]$
7. Eli likes anyone who likes the guacamole.  
 $\forall x((P(x) \wedge L(x, g)) \rightarrow L(e, x))$
8. Eli likes anyone who likes the people that he likes.  
 $\forall x[(P(x) \wedge \forall y[(P(y) \wedge L(e, y)) \rightarrow L(x, y)]) \rightarrow L(e, x)]$
9. If there is a person on the table already, then all of the food must have run out.  
 $\exists x(P(x) \wedge T(x)) \rightarrow \forall x(F(x) \rightarrow R(x))$

E. Using the following symbolization key:

domain: people

$D(x)$ : \_\_\_\_\_ $x$  dances ballet.

$F(x)$ : \_\_\_\_\_ $x$  is female.

- $M(x)$ : \_\_\_\_\_ $x$  is male.  
 $C(x, y)$ : \_\_\_\_\_ $x$  is a child of \_\_\_\_\_ $y$ .  
 $S(x, y)$ : \_\_\_\_\_ $x$  is a sibling of \_\_\_\_\_ $y$ .  
 $e$ : Elmer  
 $j$ : Jane  
 $p$ : Patrick

symbolize the following sentences in FOL:

- All of Patrick's children are ballet dancers.  
 $\forall x(C(x, p) \rightarrow D(x))$
- Jane is Patrick's daughter.  
 $C(j, p) \wedge F(j)$
- Patrick has a daughter.  
 $\exists x(C(x, p) \wedge F(x))$
- Jane is an only child.  
 $\neg \exists x S(x, j)$
- All of Patrick's sons dance ballet.  
 $\forall x[(C(x, p) \wedge M(x)) \rightarrow D(x)]$
- Patrick has no sons.  
 $\neg \exists x(C(x, p) \wedge M(x))$
- Jane is Elmer's niece.  
 $\exists x(S(x, e) \wedge C(j, x) \wedge F(j))$
- Patrick is Elmer's brother.  
 $S(p, e) \wedge M(p)$
- Patrick's brothers have no children.  
 $\forall x[(S(p, x) \wedge M(x)) \rightarrow \neg \exists y C(y, x)]$
- Jane is an aunt.  
 $F(j) \wedge \exists x(S(x, j) \wedge \exists y C(y, x))$
- Everyone who dances ballet has a brother who also dances ballet.  
 $\forall x[D(x) \rightarrow \exists y(M(y) \wedge S(y, x) \wedge D(y))]$
- Every woman who dances ballet is the child of someone who dances ballet.  
 $\forall x[(F(x) \wedge D(x)) \rightarrow \exists y(C(x, y) \wedge D(y))]$



## CHAPTER 25

# *Identity*

### A. Explain why:

- ‘ $\exists x \forall y (A(y) \leftrightarrow x = y)$ ’ is a good symbolization of ‘there is exactly one apple’.

We might naturally read this in English thus:

- There is something,  $x$ , such that, if you choose any object at all, if you chose an apple then you chose  $x$  itself, and if you chose  $x$  itself then you chose an apple.

The  $x$  in question must therefore be the one and only thing which is an apple.

- ‘ $\exists x \exists y [\neg x = y \wedge \forall z (A(z) \leftrightarrow (x = z \vee y = z))]$ ’ is a good symbolization of ‘there are exactly two apples’.

Similarly to the above, we might naturally read this in English thus:

- There are two distinct things,  $x$  and  $y$ , such that if you choose any object at all, if you chose an apple then you either chose  $x$  or  $y$ , and if you chose either  $x$  or  $y$  then you chose an apple.

The  $x$  and  $y$  in question must therefore be the only things which are apples, and since they are distinct, there are two of them.

## CHAPTER 26

# *Sentences of FOL*

**A.** Identify which variables are bound and which are free. We underline the bound variables, and overline the free variables.

1.  $\exists x L(\underline{x}, \overline{y}) \wedge \forall y L(\overline{y}, \underline{x})$
2.  $\forall x A(\underline{x}) \wedge B(\overline{x})$
3.  $\forall x(A(\underline{x}) \wedge B(\underline{x})) \wedge \forall y(C(\overline{x}) \wedge D(\overline{y}))$
4.  $\forall x \exists y [R(\underline{x}, \overline{y}) \rightarrow (J(\overline{z}) \wedge K(\underline{x}))] \vee R(\overline{y}, \underline{x})$
5.  $\forall x_1(M(\overline{x_2}) \leftrightarrow L(\overline{x_2}, \underline{x_1})) \wedge \exists x_2 L(\overline{x_3}, \underline{x_2})$

## CHAPTER 27

# *Definite descriptions*

A. Using the following symbolization key:

domain: people

$K(x)$ : \_\_\_\_\_ $_x$  knows the combination to the safe.

$S(x)$ : \_\_\_\_\_ $_x$  is a spy.

$V(x)$ : \_\_\_\_\_ $_x$  is a vegetarian.

$T(x, y)$ : \_\_\_\_\_ $_x$  trusts \_\_\_\_\_ $_y$ .

$h$ : Hofthor

$i$ : Ingmar

symbolize the following sentences in FOL:

1. Hofthor trusts a vegetarian.

$\exists x(V(x) \wedge T(h, x))$

2. Everyone who trusts Ingmar trusts a vegetarian.

$\forall x[T(x, i) \rightarrow \exists y(T(x, y) \wedge V(y))]$

3. Everyone who trusts Ingmar trusts someone who trusts a vegetarian.

$\forall x[T(x, i) \rightarrow \exists y(T(x, y) \wedge \exists z(T(y, z) \wedge V(z)))]$

4. Only Ingmar knows the combination to the safe.

$\forall x(K(x) \rightarrow x = i)$

Comment: does the English claim entail that Ingmar *does* know the combination to the safe? If so, then we should formalise this with a ' $\leftrightarrow$ '.

5. Ingmar trusts Hofthor, but no one else.

$$\forall x(T(i, x) \leftrightarrow x = h)$$

6. The person who knows the combination to the safe is a vegetarian.

$$\exists x[K(x) \wedge \forall y(K(y) \rightarrow x = y) \wedge V(x)]$$

7. The person who knows the combination to the safe is not a spy.

$$\exists x[K(x) \wedge \forall y(K(y) \rightarrow x = y) \wedge \neg S(x)]$$

Comment: the scope of negation is potentially ambiguous here; I have read it as *inner* negation.

**B.** Using the following symbolization key:

domain: cards in a standard deck

$B(x)$ : \_\_\_\_\_ $x$  is black.

$C(x)$ : \_\_\_\_\_ $x$  is a club.

$D(x)$ : \_\_\_\_\_ $x$  is a deuce.

$J(x)$ : \_\_\_\_\_ $x$  is a jack.

$M(x)$ : \_\_\_\_\_ $x$  is a man with an axe.

$O(x)$ : \_\_\_\_\_ $x$  is one-eyed.

$W(x)$ : \_\_\_\_\_ $x$  is wild.

symbolize each sentence in FOL:

1. All clubs are black cards.

$$\forall x(C(x) \rightarrow B(x))$$

2. There are no wild cards.

$$\neg \exists x W(x)$$

3. There are at least two clubs.

$$\exists x \exists y (\neg x = y \wedge C(x) \wedge C(y))$$

4. There is more than one one-eyed jack.

$$\exists x \exists y (\neg x = y \wedge J(x) \wedge O(x) \wedge J(y) \wedge O(y))$$

5. There are at most two one-eyed jacks.

$$\forall x \forall y \forall z [(J(x) \wedge O(x) \wedge J(y) \wedge O(y) \wedge J(z) \wedge O(z)) \rightarrow (x = y \vee x = z \vee y = z)]$$

6. There are two black jacks.

$$\exists x \exists y (\neg x = y \wedge B(x) \wedge J(x) \wedge B(y) \wedge J(y))$$

Comment: I am reading this as 'there are *at least* two...'. If the suggestion was that there are *exactly* two, then a different FOL sentence would be required, namely:

$$\exists x \exists y (\neg x = y \wedge B(x) \wedge J(x) \wedge B(y) \wedge J(y) \wedge \forall z [(B(z) \wedge J(z)) \rightarrow (x = z \vee y = z)])$$

7. There are four deuces.

$$\exists w \exists x \exists y \exists z (\neg w = x \wedge \neg w = y \wedge \neg w = z \wedge \neg x = y \wedge \neg x = z \wedge \neg y = z \wedge D(w) \wedge D(x) \wedge D(y) \wedge D(z))$$

Comment: I am reading this as ‘there are *at least* four...’. If the suggestion is that there are *exactly* four, then we should offer instead:

$$\exists w \exists x \exists y \exists z (\neg w = x \wedge \neg w = y \wedge \neg w = z \wedge \neg x = y \wedge \neg x = z \wedge \neg y = z \wedge D(w) \wedge D(x) \wedge D(y) \wedge D(z) \wedge \forall v [D(v) \rightarrow (v = w \vee v = x \vee v = y \vee v = z)])$$

8. The deuce of clubs is a black card.

$$\exists x [D(x) \wedge C(x) \wedge \forall y ((D(y) \wedge C(y)) \rightarrow x = y) \wedge B(x)]$$

9. One-eyed jacks and the man with the axe are wild.

$$\forall x [(J(x) \wedge O(x)) \rightarrow W(x)] \wedge \exists x [M(x) \wedge \forall y (M(y) \rightarrow x = y) \wedge W(x)]$$

10. If the deuce of clubs is wild, then there is exactly one wild card.

$$\exists x (D(x) \wedge C(x) \wedge \forall y [(D(y) \wedge C(y)) \rightarrow x = y] \wedge W(x)) \rightarrow \exists x (W(x) \wedge \forall y (W(y) \rightarrow x = y))$$

Comment: if there is not exactly one deuce of clubs, then the above sentence is true. Maybe that’s the wrong verdict. Perhaps the sentence should definitely be taken to imply that there is one and only one deuce of clubs, and then express a conditional about wildness. If so, then we might symbolize it thus:

$$\exists x (D(x) \wedge C(x) \wedge \forall y [(D(y) \wedge C(y)) \rightarrow x = y] \wedge [W(x) \rightarrow \forall y (W(y) \rightarrow x = y)])$$

11. The man with the axe is not a jack.

$$\exists x [M(x) \wedge \forall y (M(y) \rightarrow x = y) \wedge \neg J(x)]$$

12. The deuce of clubs is not the man with the axe.

$$\exists x \exists y (D(x) \wedge C(x) \wedge \forall z [(D(z) \wedge C(z)) \rightarrow x = z] \wedge M(y) \wedge \forall z (M(z) \rightarrow y = z) \wedge \neg x = y)$$

C. Using the following symbolization key:

domain: animals in the world

$B(x)$ : \_\_\_\_\_ $_x$  is in Farmer Brown’s field.

$H(x)$ : \_\_\_\_\_ $_x$  is a horse.

$P(x)$ : \_\_\_\_\_ $_x$  is a Pegasus.

$W(x)$ : \_\_\_\_\_ $_x$  has wings.

symbolize the following sentences in FOL:

1. There are at least three horses in the world.

$$\exists x \exists y \exists z (\neg x = y \wedge \neg x = z \wedge \neg y = z \wedge H(x) \wedge H(y) \wedge H(z))$$

2. There are at least three animals in the world.

$$\exists x \exists y \exists z (\neg x = y \wedge \neg x = z \wedge \neg y = z)$$

3. There is more than one horse in Farmer Brown's field.

$$\exists x \exists y (\neg x = y \wedge H(x) \wedge H(y) \wedge B(x) \wedge B(y))$$

4. There are three horses in Farmer Brown's field.

$$\exists x \exists y \exists z (\neg x = y \wedge \neg x = z \wedge \neg y = z \wedge H(x) \wedge H(y) \wedge H(z) \wedge B(x) \wedge B(y) \wedge B(z))$$

Comment: I have read this as 'there are *at least* three...'. If the suggestion was that there are *exactly* three, then a different FOL sentence would be required.

5. There is a single winged creature in Farmer Brown's field; any other creatures in the field must be wingless.

$$\exists x [W(x) \wedge B(x) \wedge \forall y ((W(y) \wedge B(y)) \rightarrow x = y)]$$

6. The Pegasus is a winged horse.

$$\exists x [P(x) \wedge \forall y (P(y) \rightarrow x = y) \wedge W(x) \wedge H(x)]$$

7. The animal in Farmer Brown's field is not a horse.

$$\exists x [Bx \wedge \forall y (B(y) \rightarrow x = y) \wedge \neg H(x)]$$

Comment: the scope of negation might be ambiguous here; I have read it as *inner* negation.

8. The horse in Farmer Brown's field does not have wings.

$$\exists x [H(x) \wedge B(x) \wedge \forall y ((H(y) \wedge B(y)) \rightarrow x = y) \wedge \neg W(x)]$$

Comment: the scope of negation might be ambiguous here; I have read it as *inner* negation.

**D.** In this chapter, we symbolized 'Nick is the traitor' by ' $\exists x(T(x) \wedge \forall y(T(y) \rightarrow x = y) \wedge x = n)$ '. Explain why these would be equally good symbolisations:

- $T(n) \wedge \forall y(T(y) \rightarrow n = y)$

This sentence requires that Nick is a traitor, and that Nick alone is a traitor. Otherwise put, there is one and only one traitor, namely, Nick. Otherwise put: Nick is the traitor.

- $\forall y(T(y) \leftrightarrow y = n)$

This sentence can be understood thus: Take anything you like; now, if you chose a traitor, you chose Nick, and if you chose Nick, you chose a traitor. So there is one and only one traitor, namely, Nick, as required.

## CHAPTER 30

# *Truth in FOL*

A. Consider the following interpretation:

- The domain comprises only Corwin and Benedict
- ' $A(x)$ ' is to be true of both Corwin and Benedict
- ' $B(x)$ ' is to be true of Benedict only
- ' $N(x)$ ' is to be true of no one
- ' $c$ ' is to refer to Corwin

Determine whether each of the following sentences is true or false in that interpretation:

- |  |       |
|--|-------|
| 1. $B(c)$                                      | False |
| 2. $A(c) \leftrightarrow \neg N(c)$            | True  |
| 3. $N(c) \rightarrow (A(c) \vee B(c))$         | True  |
| 4. $\forall x A(x)$                            | True  |
| 5. $\forall x \neg B(x)$                       | False |
| 6. $\exists x (A(x) \wedge B(x))$              | True  |
| 7. $\exists x (A(x) \rightarrow N(x))$         | False |
| 8. $\forall x (N(x) \vee \neg N(x))$           | True  |
| 9. $\exists x B(x) \rightarrow \forall x A(x)$ | True  |

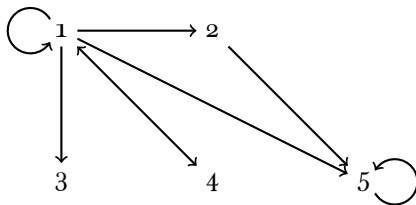
B. Consider the following interpretation:

- The domain comprises only Lemmy, Courtney and Eddy
- ' $G(x)$ ' is to be true of Lemmy, Courtney and Eddy.
- ' $H(x)$ ' is to be true of and only of Courtney
- ' $M(x)$ ' is to be true of and only of Lemmy and Eddy
- ' $c$ ' is to refer to Courtney
- ' $e$ ' is to refer to Eddy

Determine whether each of the following sentences is true or false in that interpretation:

- |  |       |
|--|-------|
| 1. $H(c)$  | True  |
| 2. $H(e)$  | False |
| 3. $M(c) \vee M(e)$                              | True  |
| 4. $G(c) \vee \neg G(c)$                         | True  |
| 5. $M(c) \rightarrow G(c)$                       | True  |
| 6. $\exists x H(x)$                              | True  |
| 7. $\forall x H(x)$                              | False |
| 8. $\exists x \neg M(x)$                         | True  |
| 9. $\exists x (H(x) \wedge G(x))$                | True  |
| 10. $\exists x (M(x) \wedge G(x))$               | True  |
| 11. $\forall x (H(x) \vee M(x))$                 | True  |
| 12. $\exists x H(x) \wedge \exists x M(x)$       | True  |
| 13. $\forall x (H(x) \leftrightarrow \neg M(x))$ | True  |
| 14. $\exists x G(x) \wedge \exists x \neg G(x)$  | False |
| 15. $\forall x \exists y (G(x) \wedge H(y))$     | True  |

C. Following the diagram conventions introduced at the end of §23, consider the following interpretation:



Determine whether each of the following sentences is true or false in that interpretation:

- |   |       |
|---|-------|
| 1. $\exists x R(x, x)$  | True  |
| 2. $\forall x R(x, x)$  | False |
| 3. $\exists x \forall y R(x, y)$  | True  |
| 4. $\exists x \forall y R(y, x)$  | False |
| 5. $\forall x \forall y \forall z ((R(x, y) \wedge R(y, z)) \rightarrow R(x, z))$ | False |
| 6. $\forall x \forall y \forall z ((R(x, y) \wedge R(x, z)) \rightarrow R(y, z))$ | False |
| 7. $\exists x \forall y \neg R(x, y)$   | True  |
| 8. $\forall x (\exists y R(x, y) \rightarrow \exists y R(y, x))$                  | True  |
| 9. $\exists x \exists y (\neg x = y \wedge R(x, y) \wedge R(y, x))$               | True  |
| 10. $\exists x \forall y (R(x, y) \leftrightarrow x = y)$                         | True  |



11.  $\exists x \forall y (R(y, x) \leftrightarrow x = y)$

False

12.  $\exists x \exists y (\neg x = y \wedge R(x, y) \wedge \forall z (R(z, x) \leftrightarrow y = z))$

True

## CHAPTER 32

# *Using Interpretations*

**A.** Show that each of the following is neither a validity nor a contradiction:

1.  $D(a) \wedge D(b)$
2.  $\exists x T(x, h)$
3.  $P(m) \wedge \neg \forall x P(x)$
4.  $\forall z J(z) \leftrightarrow \exists y J(y)$
5.  $\forall x (W(x, m, n) \vee \exists y L(x, y))$
6.  $\exists x (G(x) \rightarrow \forall y M(y))$
7.  $\exists x (x = h \wedge x = i)$

**B.** Show that the following pairs of sentences are not logically equivalent.

1.  $J(a), K(a)$
2.  $\exists x J(x), J(m)$
3.  $\forall x R(x, x), \exists x R(x, x)$
4.  $\exists x P(x) \rightarrow Q(c), \exists x (P(x) \rightarrow Q(c))$
5.  $\forall x (P(x) \rightarrow \neg Q(x)), \exists x (P(x) \wedge \neg Q(x))$
6.  $\exists x (P(x) \wedge Q(x)), \exists x (P(x) \rightarrow Q(x))$
7.  $\forall x (P(x) \rightarrow Q(x)), \forall x (P(x) \wedge Q(x))$
8.  $\forall x \exists y R(x, y), \exists x \forall y R(x, y)$
9.  $\forall x \exists y R(x, y), \forall x \exists y R(y, x)$

**C.** Show that the following sentences are jointly satisfiable:

1.  $M(a), \neg N(a), Pa, \neg Q(a)$
2.  $L(e, e), L(e, g), \neg L(g, e), \neg L(g, g)$
3.  $\neg(M(a) \wedge \exists x A(x)), Ma \vee F(a), \forall x(F(x) \rightarrow A(x))$
4.  $M(a) \vee M(b), M(a) \rightarrow \forall x \neg M(x)$
5.  $\forall y G(y), \forall x(G(x) \rightarrow H(x)), \exists y \neg I(y)$
6.  $\exists x(B(x) \vee A(x)), \forall x \neg C(x), \forall x[(A(x) \wedge B(x)) \rightarrow Cx]$
7.  $\exists x X(x), \exists x Y(x), \forall x(X(x) \leftrightarrow \neg Y(x))$
8.  $\forall x(P(x) \vee Q(x)), \exists x \neg(Q(x) \wedge P(x))$
9.  $\exists z(N(z) \wedge O(z, z)), \forall x \forall y(O(x, y) \rightarrow O(y, x))$
10.  $\neg \exists x \forall y R(x, y), \forall x \exists y R(x, y)$
11.  $\neg R(a, a), \forall x(x = a \vee R(x, a))$
12.  $\forall x \forall y \forall z[(x = y \vee y = z) \vee x = z], \exists x \exists y \neg x = y$
13.  $\exists x \exists y((Z(x) \wedge Z(y)) \wedge x = y), \neg Z(d), d = e$

**D.** Show that the following arguments are invalid:

1.  $\forall x(A(x) \rightarrow B(x)) \therefore \exists x B(x)$
2.  $\forall x(R(x) \rightarrow D(x)), \forall x(R(x) \rightarrow F(x)) \therefore \exists x(D(x) \wedge F(x))$
3.  $\exists x(P(x) \rightarrow Q(x)) \therefore \exists x P(x)$
4.  $N(a) \wedge N(b) \wedge N(c) \therefore \forall x N(x)$
5.  $R(d, e), \exists x R(xd) \therefore R(e, d)$
6.  $\exists x(E(x) \wedge F(x)), \exists x F(x) \rightarrow \exists x G(x) \therefore \exists x(E(x) \wedge G(x))$
7.  $\forall x O(x, c), \forall x O(c, x) \therefore \forall x O(x, x)$
8.  $\exists x(J(x) \wedge K(x)), \exists x \neg K(x), \exists x \neg J(x) \therefore \exists x(\neg J(x) \wedge \neg K(x))$
9.  $L(a, b) \rightarrow \forall x L(x, b), \exists x L(x, b) \therefore L(b, b)$
10.  $\forall x(D(x) \rightarrow \exists y T(y, x)) \therefore \exists y \exists z \neg y = z$

## CHAPTER 34

# Basic rules for FOL

**A.** Explain why these two ‘proofs’ are incorrect. Also, provide interpretations which would invalidate the fallacious argument forms the ‘proofs’ enshrine:

1	$\forall x R(x, x)$	
2	$R(a, a)$	$\forall E$ 1
3	$\forall y R(a, y)$	$\forall I$ 2
4	$\forall x \forall y R(x, y)$	$\forall I$ 3

When using  $\forall I$ , you must replace *all* names with the new variable. So line 3 is bogus. As a counter-interpretation, consider the following:



1	$\forall x \exists y R(x, y)$	
2	$\exists y R(a, y)$	$\forall E$ 1
3	$R(a, a)$	
4	$\exists x R(x, x)$	$\exists I$ 3
5	$\exists x R(x, x)$	$\exists E$ 2, 3–4

The instantiating constant, ‘ $a$ ’, occurs in the line (line 2) to which  $\exists E$  is to be applied on line 5. So the use of  $\exists E$  on line 5 is bogus. As a counterinterpretation, consider the following:



**B.** The following three proofs are missing their citations (rule and line numbers). Add them, to turn them into bona fide proofs.

1.

1	$\forall x \exists y (R(x, y) \vee R(y, x))$	
2	$\forall x \neg R(m, x)$	
3	$\exists y (R(m, y) \vee R(y, m))$	$\forall E$ 1
4	$R(m, a) \vee R(a, m)$	
5	$\neg R(m, a)$	$\forall E$ 2
6	$R(a, m)$	DS 4, 5
7	$\exists x R(x, m)$	$\exists I$ 6
8	$\exists x R(x, m)$	$\exists E$ 3, 4–7

2.

1	$\forall x (\exists y L(x, y) \rightarrow \forall z L(z, x))$	
2	$L(a, b)$	
3	$\exists y L(a, y) \rightarrow \forall z L(z, a)$	$\forall E$ 1
4	$\exists y L(a, y)$	$\exists I$ 2
5	$\forall z L(z, a)$	$\rightarrow E$ 3, 4
6	$L(c, a)$	$\forall E$ 5
7	$\exists y L(c, y) \rightarrow \forall z L(z, c)$	$\forall E$ 1
8	$\exists y L(c, y)$	$\exists I$ 6
9	$\forall z L(z, c)$	$\rightarrow E$ 7, 8
10	$L(c, c)$	$\forall E$ 9
11	$\forall x L(x, x)$	$\forall I$ 10

3.

1	$\forall x(J(x) \rightarrow K(x))$	
2	$\exists x\forall y L(x,y)$	
3	$\forall x J(x)$	
4	$\forall y L(a,y)$	
5	$L(a,a)$	$\forall E$ 4
6	$J(a)$	$\forall E$ 3
7	$J(a) \rightarrow K(a)$	$\forall E$ 1
8	$K(a)$	$\rightarrow E$ 7, 6
9	$K(a) \wedge L(a,a)$	$\wedge I$ 8, 5
10	$\exists x(K(x) \wedge L(x,x))$	$\exists I$ 9
11	$\exists x(K(x) \wedge L(x,x))$	$\exists E$ 2, 4–10

**C.** In §23 problem A, we considered fifteen syllogistic figures of Aristotelian logic. Provide proofs for each of the argument forms. NB: You will find it *much* easier if you symbolize (for example) ‘No F is G’ as ‘ $\forall x(F(x) \rightarrow \neg G(x))$ ’.

We prove the four Figure I syllogisms; the rest are *extremely* similar.

### Barbara

1	$\forall x(G(x) \rightarrow F(x))$	
2	$\forall x(H(x) \rightarrow G(x))$	
3	$G(a) \rightarrow F(a)$	$\forall E$ 1
4	$H(a) \rightarrow G(a)$	$\forall E$ 2
5	$H(a)$	
6	$G(a)$	$\rightarrow E$ 4, 5
7	$F(a)$	$\rightarrow E$ 3, 6
8	$H(a) \rightarrow F(a)$	$\rightarrow I$ 5–7
9	$\forall x(H(x) \rightarrow F(x))$	$\forall I$ 8

**Celerant** is exactly as Barbara, replacing ‘F’ with ‘ $\neg F$ ’ throughout.

### Ferio

1	$\forall x(G(x) \rightarrow \neg F(x))$	
2	$\exists x(H(x) \wedge G(x))$	
3	$H(a) \wedge G(a)$	
4	$H(a)$	$\wedge E$ 3
5	$G(a)$	$\wedge E$ 3
6	$G(a) \rightarrow \neg F(a)$	$\forall E$ 1
7	$\neg F(a)$	$\rightarrow E$ 6, 5
8	$H(a) \wedge \neg F(a)$	$\wedge I$ 4, 7
9	$\exists x(H(x) \wedge \neg F(x))$	$\exists I$ 8
10	$\exists x(H(x) \wedge \neg F(x))$	$\exists E$ 2, 3–9

**Darii** is exactly as Ferio, replacing ‘ $\neg F$ ’ with ‘F’ throughout.

**D.** Aristotle and his successors identified other syllogistic forms which depended upon ‘existential import’. Symbolize each of the following argument forms in FOL and offer proofs.

1. **Barbari.** Something is H. All G are F. All H are G. So: Some H is F

$$\exists x H(x), \forall x(G(x) \rightarrow F(x)), \forall x(H(x) \rightarrow G(x)) \therefore \exists x(H(x) \wedge F(x))$$

1		$\exists x H(x)$	
2		$\forall x(G(x) \rightarrow F(x))$	
3		$\forall x(H(x) \rightarrow G(x))$	
4		$H(a)$	
5			$H(a) \rightarrow G(a)$ $\forall E$ 3
6			$G(a)$ $\rightarrow E$ 5, 4
7			$G(a) \rightarrow F(a)$ $\forall E$ 2
8			$F(a)$ $\rightarrow E$ 7, 6
9			$H(a) \wedge F(a)$ $\wedge I$ 4, 8
10			$\exists x(H(x) \wedge F(x))$ $\exists I$ 9
11			$\exists x(H(x) \wedge F(x))$ $\exists E$ 1, 4–10

2. **Celarent.** Something is H. No G are F. All H are G. So: Some H is not F

$$\exists x H(x), \forall x(G(x) \rightarrow \neg F(x)), \forall x(H(x) \rightarrow G(x)) \therefore \exists x(H(x) \wedge \neg F(x))$$

Proof is exactly as for Barbari, replacing ‘F’ with ‘ $\neg F$ ’ throughout.

3. **Cesaro.** Something is H. No F are G. All H are G. So: Some H is not F.

$$\exists x H(x), \forall x(F(x) \rightarrow \neg G(x)), \forall x(H(x) \rightarrow G(x)) \therefore \exists x(H(x) \wedge \neg F(x))$$



1	$\exists x H(x)$	
2	$\forall x(F(x) \rightarrow \neg G(x))$	
3	$\forall x(H(x) \rightarrow G(x))$	
	<hr style="border: 0.5px solid black;"/>	
4	$H(a)$	
	<hr style="border: 0.5px solid black;"/>	
5	$H(a) \rightarrow G(a)$	$\forall E$ 3
6	$G(a)$	$\rightarrow E$ 5, 4
7	$F(a) \rightarrow \neg G(a)$	$\forall E$ 2
8	$F(a)$	
	<hr style="border: 0.5px solid black;"/>	
9	$\neg G(a)$	$\rightarrow E$ 7, 8
10	$\perp$	$\neg E$ 6, 9
11	$\neg F(a)$	$\neg I$ 8–10
12	$H(a) \wedge \neg F(a)$	$\wedge I$ 4, 11
13	$\exists x(H(x) \wedge \neg F(x))$	$\exists I$ 12
14	$\exists x(H(x) \wedge \neg F(x))$	$\exists E$ 1, 4–13

4. **Camestros.** Something is H. All F are G. No H are G. So: Some H is not F.

$$\exists x H(x), \forall x (F(x) \rightarrow G(x)), \forall x (H(x) \rightarrow \neg G(x)) \therefore \exists x (H(x) \wedge \neg F(x))$$

1		$\exists x H(x)$	
2		$\forall x (F(x) \rightarrow G(x))$	
3		$\forall x (H(x) \rightarrow \neg G(x))$	
4		$H(a)$	
5		$H(a) \rightarrow \neg G(a)$	$\forall E$ 3
6		$\neg G(a)$	$\rightarrow E$ 5, 4
7		$F(a) \rightarrow G(a)$	$\forall E$ 2
8		$\neg F(a)$	MT 7, 6
9		$H(a) \wedge \neg F(a)$	$\wedge I$ 4, 8
10		$\exists x (H(x) \wedge \neg F(x))$	$\exists I$ 9
11		$\exists x (H(x) \wedge \neg F(x))$	$\exists E$ 1, 4–10

5. **Felapton.** Something is G. No G are F. All G are H. So: Some H is not F.

$$\exists x G(x), \forall x (G(x) \rightarrow \neg F(x)), \forall x (G(x) \rightarrow H(x)) \therefore \exists x (H(x) \wedge \neg F(x))$$

1		$\exists x G(x)$	
2		$\forall x (G(x) \rightarrow \neg F(x))$	
3		$\forall x (G(x) \rightarrow H(x))$	
4		$G(a)$	
5		$G(a) \rightarrow H(a)$	$\forall E$ 3
6		$H(a)$	$\rightarrow E$ 5, 4
7		$G(a) \rightarrow \neg F(a)$	$\forall E$ 2
8		$\neg F(a)$	$\rightarrow E$ 7, 4
9		$H(a) \wedge \neg F(a)$	$\wedge I$ 6, 8
10		$\exists x (H(x) \wedge \neg F(x))$	$\exists I$ 9
11		$\exists x (H(x) \wedge \neg F(x))$	$\exists E$ 1, 4–10

6. **Darapti.** Something is G. All G are F. All G are H. So: Some H is F.

$$\exists x G(x), \forall x(G(x) \rightarrow F(x)), \forall x(G(x) \rightarrow H(x)) \therefore \exists x(H(x) \wedge F(x))$$

Proof is exactly as for Felapton, replacing ‘ $\neg F$ ’ with ‘ $F$ ’ throughout.

7. **Calemos.** Something is H. All F are G. No G are H. So: Some H is not F.

$$\exists x H(x), \forall x (F(x) \rightarrow G(x)), \forall x (G(x) \rightarrow \neg H(x)) \therefore \exists x (H(x) \wedge \neg F(x))$$

1		$\exists x H(x)$	
2		$\forall x (F(x) \rightarrow G(x))$	
3		$\forall x (G(x) \rightarrow \neg H(x))$	
4		$H(a)$	
5		$G(a) \rightarrow \neg H(a)$	$\forall E$ 3
6			
7			
8			
9		$\neg G(a)$	$\neg I$ 6–8
10		$F(a) \rightarrow G(a)$	$\forall E$ 2
11		$\neg F(a)$	MT 10, 9
12		$H(a) \wedge \neg F(a)$	$\wedge I$ 4, 11
13		$\exists x (H(x) \wedge F(x))$	$\exists I$ 12
14		$\exists x (H(x) \wedge \neg F(x))$	$\exists E$ 1, 4–13

8. **Fesapo.** Something is G. No F is G. All G are H. So: Some H is not F.

$$\exists x G(x), \forall x (F(x) \rightarrow \neg G(x)), \forall x (G(x) \rightarrow H(x)) \therefore \exists x (H(x) \wedge \neg F(x))$$

1	$\exists x G(x)$	
2	$\forall x(F(x) \rightarrow \neg G(x))$	
3	$\forall x(G(x) \rightarrow H(x))$	
4	$G(a)$	
5	$G(a) \rightarrow H(a)$	$\forall E$ 3
6	$H(a)$	$\rightarrow E$ 5, 4
7	$F(a) \rightarrow \neg G(a)$	$\forall E$ 2
8	$F(a)$	
9	$\neg G(a)$	$\rightarrow E$ 7, 8
10	$\perp$	$\neg E$ 4, 9
11	$\neg F(a)$	$\neg I$ 8–10
12	$H(a) \wedge \neg F(a)$	$\wedge I$ 6, 11
13	$\exists x(H(x) \wedge \neg F(x))$	$\exists I$ 12
14	$\exists x(H(x) \wedge \neg F(x))$	$\exists E$ 1, 4–13

9. **Bamalip.** Something is F. All F are G. All G are H. So: Some H are F.

$$\exists x F(x), \forall x(F(x) \rightarrow G(x)), \forall x(G(x) \rightarrow H(x)) \therefore \exists x(H(x) \wedge F(x))$$

1	$\exists x F(x)$	
2	$\forall x(F(x) \rightarrow G(x))$	
3	$\forall x(G(x) \rightarrow H(x))$	
4	<div style="border-bottom: 1px solid black; padding-bottom: 5px;"><math>F(a)</math></div>	
5	$F(a) \rightarrow G(a)$	$\forall E$ 2
6	$G(a)$	$\rightarrow E$ 5, 4
7	$G(a) \rightarrow H(a)$	$\forall E$ 3
8	$H(a)$	$\rightarrow E$ 7, 6
9	$H(a) \wedge F(a)$	$\wedge I$ 8, 4
10	$\exists x(H(x) \wedge F(x))$	$\exists I$ 9
11	$\exists x(H(x) \wedge F(x))$	$\exists E$ 1, 4–10

**E.** Provide a proof of each claim.

1.  $\vdash \forall x F(x) \rightarrow \forall y(F(y) \wedge F(y))$

1	$\forall x F(x)$	
2	$F(a)$	$\forall E$ 1
3	$F(a) \wedge F(a)$	$\wedge I$ 2, 2
4	$\forall y(F(y) \wedge F(y))$	$\forall I$ 3
5	$\forall x F(x) \rightarrow \forall y(F(y) \wedge F(y))$	$\rightarrow I$ 1–4

2.  $\forall x(Ax \rightarrow B(x)), \exists x A(x) \vdash \exists x B(x)$

1		$\forall x(A(x) \rightarrow B(x))$	
2		$\exists x A(x)$	
3			
3			
4			
5			
6			
7			

3 |  $A(a)$

4 |  $A(a) \rightarrow B(a)$      $\forall E$  1

5 |  $B(a)$      $\rightarrow E$  4, 3

6 |  $\exists x B(x)$      $\exists I$  5

7 |  $\exists x B(x)$      $\exists E$  2, 3-6

3.  $\forall x(M(x) \leftrightarrow N(x)), M(a) \wedge \exists x R(x, a) \vdash \exists x N(x)$

1	$\forall x(M(x) \leftrightarrow N(x))$	
2	$M(a) \wedge \exists x R(x, a)$	
3	$M(a)$	$\wedge E$ 2
4	$M(a) \leftrightarrow N(a)$	$\forall E$ 1
5	$N(a)$	$\leftrightarrow E$ 4, 3
6	$\exists x N(x)$	$\exists I$ 5

4.  $\forall x \forall y G(x, y) \vdash \exists x G(x, x)$

1	$\forall x \forall y G(x, y)$	
2	$\forall y G(a, y)$	$\forall E$ 1
3	$G(a, a)$	$\forall E$ 2
4	$\exists x G(x, x)$	$\exists I$ 3

5.  $\vdash \forall x R(x, x) \rightarrow \exists x \exists y R(x, y)$

1	$\forall x R(x, x)$	
2	$R(a, a)$	$\forall E$ 1
3	$\exists y R(a, y)$	$\exists I$ 2
4	$\exists x \exists y R(x, y)$	$\exists I$ 3
5	$\forall x R(x, x) \rightarrow \exists x \exists y R(x, y)$	$\rightarrow I$ 1-4

6.  $\vdash \forall y \exists x (Q(y) \rightarrow Q(x))$

1	$Q(a)$	
2	$Q(a)$	$R$ 1
3	$Q(a) \rightarrow Q(a)$	$\rightarrow I$ 1-2
4	$\exists x (Q(a) \rightarrow Q(x))$	$\exists I$ 3
5	$\forall y \exists x (Q(y) \rightarrow Q(x))$	$\forall I$ 4

7.  $Na \rightarrow \forall x (M(x) \leftrightarrow M(a)), M(a), \neg M(b) \vdash \neg N(a)$



1		$N(a) \rightarrow \forall x(M(x) \leftrightarrow M(a))$	
2		$M(a)$	
3		$\neg M(b)$	
		<hr/>	
4			
4			
5			
6			
7			
8			
9			

1 |  $N(a) \rightarrow \forall x(M(x) \leftrightarrow M(a))$

2 |  $M(a)$

3 |  $\neg M(b)$

---

4 | |

5 | |  $\forall x(M(x) \leftrightarrow M(a))$   $\rightarrow E$  1, 4

6 | |  $M(b) \leftrightarrow M(a)$   $\forall E$  5

7 | |  $M(b)$   $\leftrightarrow E$  6, 2

8 | |  $\perp$   $\neg E$  7, 3

9 |  $\neg N(a)$   $\neg I$  4–8

8.  $\forall x\forall y(G(x,y) \rightarrow G(y,x)) \vdash \forall x\forall y(G(x,y) \leftrightarrow G(y,x))$

1	$\forall x\forall y(G(x,y) \rightarrow G(y,x))$	
2	$G(a,b)$	
3	$\forall y(G(a,y) \rightarrow G(y,a))$	$\forall E$ 1
4	$G(a,b) \rightarrow G(b,a)$	$\forall E$ 3
5	$G(b,a)$	$\rightarrow E$ 4, 2
6	$G(b,a)$	
7	$\forall y(G(b,y) \rightarrow G(y,b))$	$\forall E$ 1
8	$G(b,a) \rightarrow G(a,b)$	$\forall E$ 7
9	$G(a,b)$	$\rightarrow E$ 8, 6
10	$G(a,b) \leftrightarrow G(b,a)$	$\leftrightarrow I$ 2–5, 6–9
11	$\forall y(G(a,y) \leftrightarrow G(y,a))$	$\forall I$ 10
12	$\forall x\forall y(G(x,y) \leftrightarrow G(y,x))$	$\forall I$ 11

9.  $\forall x(\neg M(x) \vee L(j,x)), \forall x(Bx \rightarrow L(j,x)), \forall x(Mx \vee B(x)) \vdash \forall xLjx$

1	$\forall x(\neg M(x) \vee L(j,x))$	
2	$\forall x(B(x) \rightarrow L(j,x))$	
3	$\forall x(M(x) \vee B(x))$	
4	$\neg M(a) \vee L(j,a)$	$\forall E$ 1
5	$B(a) \rightarrow L(j,a)$	$\forall E$ 2
6	$M(a) \vee B(a)$	$\forall E$ 3
7	$\neg M(a)$	
8	$B(a)$	DS 6, 7
9	$L(j,a)$	$\rightarrow E$ 5, 8
10	$L(j,a)$	
11	$L(j,a)$	R 10
12	$L(j,a)$	$\forall E$ 4, 7–9, 10–11
13	$\forall xL(j,x)$	$\forall I$ 12

**F.** Write a symbolization key for the following argument, symbolize it,

and prove it:

There is someone who likes everyone who likes everyone that she likes. Therefore, there is someone who likes herself.

Symbolization key:

domain: all people

$Lxy$ : \_\_\_\_\_ $x$  likes \_\_\_\_\_ $y$

$\exists x \forall y (\forall z (L(x, z) \rightarrow L(y, z)) \rightarrow L(x, y)) \therefore \exists x Lxx$

1	$\exists x \forall y (\forall z (L(x, z) \rightarrow L(y, z)) \rightarrow L(x, y))$	
2	$\forall y (\forall z (L(a, z) \rightarrow L(y, z)) \rightarrow L(a, y))$	
3	$\forall z (L(a, z) \rightarrow L(a, z)) \rightarrow L(a, a)$	$\forall E$ 2
4	$L(a, c)$	
5	$L(a, c)$	$R$ 4
6	$L(a, c) \rightarrow L(a, c)$	$\rightarrow I$ 4–5
7	$\forall z (L(a, z) \rightarrow L(a, z))$	$\forall I$ 6
8	$L(a, a)$	$\rightarrow E$ 3, 7
9	$\exists x L(x, x)$	$\exists I$ 8
10	$\exists x L(x, x)$	$\exists E$ 1, 2–9

**G.** Show that each pair of sentences is provably equivalent.

1.  $\forall x (Ax \rightarrow \neg B(x)), \neg \exists x (A(x) \wedge B(x))$
2.  $\forall x (\neg A(x) \rightarrow B(d)), \forall x A(x) \vee B(d)$
3.  $\exists x P(x) \rightarrow Q(c), \forall x (P(x) \rightarrow Q(c))$

**H.** For each of the following pairs of sentences: If they are provably equivalent, give proofs to show this. If they are not, construct an interpretation to show that they are not logically equivalent.

1.  $\forall x P(x) \rightarrow Q(c), \forall x (P(x) \rightarrow Q(c))$       Not logically equivalent  
Counter-interpretation: let the domain be the numbers 1 and 2. Let 'c' name 1. Let 'P $x$ ' be true of and only of 1. Let 'Q $x$ ' be true of, and only of, 2.
2.  $\forall x \forall y \forall z Bxyz, \forall x B(x, x)x$       Not logically equivalent  
Counter-interpretation: let the domain be the numbers 1 and 2. Let 'B $xyz$ ' be true of, and only of,  $\langle 1, 1, 1 \rangle$  and  $\langle 2, 2, 2 \rangle$ .
3.  $\forall x \forall y D(x, y), \forall y \forall x D(x, y)$       Provably equivalent

1	$\forall x \forall y D(x, y)$			1	$\forall y \forall x D(x, y)$		
2	$\forall y D(a, y)$	$\forall E$ 1		2	$\forall x D(x, a)$	$\forall E$ 1	
3	$D(a, b)$	$\forall E$ 2		3	$D(b, a)$	$\forall E$ 2	
4	$\forall x D(x, b)$	$\forall I$ 3		4	$\forall y D(b, y)$	$\forall I$ 3	
5	$\forall y \forall x D(x, y)$	$\forall I$ 4		5	$\forall x \forall y D(x, y)$	$\forall I$ 4	

4.  $\exists x \forall y D(x, y), \forall y \exists x D(x, y)$  Not logically equivalent  
 Counter-interpretation: let the domain be the numbers 1 and 2. Let ‘ $Dxy$ ’ hold of and only of  $\langle 1, 2 \rangle$  and  $\langle 2, 1 \rangle$ . This is depicted thus:



5.  $\forall x (R(c, a) \leftrightarrow R(x, a)), Rca \leftrightarrow \forall x R(x, a)$  Not logically equivalent  
 Counter-interpretation, consider the following diagram, allowing ‘ $a$ ’ to name 1 and ‘ $c$ ’ to name 2:



**I.** For each of the following arguments: If it is valid in FOL, give a proof. If it is invalid, construct an interpretation to show that it is invalid.

1.  $\exists y \forall x R(x, y) \therefore \forall x \exists y R(x, y)$  Valid

1	$\exists y \forall x R(x, y)$		
2	$\forall x R(x, a)$		
3	$R(b, a)$	$\forall E$ 2	
4	$\exists y R(b, y)$	$\exists I$ 3	
5	$\exists y R(b, y)$	$\exists E$ 1, 2–4	
6	$\forall x \exists y R(x, y)$	$\forall I$ 5	

2.  $\forall x \exists y R(x, y) \therefore \exists y \forall x R(x, y)$  Not valid  
 Counter interpretation: let the domain be the numbers 1 and 2. Let ‘ $Rxy$ ’ be true of 1 and 2, and of 2 and 1 (but not 1 and itself or 2 and itself).
3.  $\exists x (P(x) \wedge \neg Q(x)) \therefore \forall x (P(x) \rightarrow \neg Q(x))$  Not valid  
 Counter interpretation: let the domain be the numbers 1 and 2. Let ‘ $Px$ ’ be true of everything in the domain. Let ‘ $Qx$ ’ be true of, and only of, 2.

4.  $\forall x(S(x) \rightarrow T(a)), S(d) \therefore T(a)$  Valid
- |   |                                    |                      |
|---|------------------------------------|----------------------|
| 1 | $\forall x(S(x) \rightarrow T(a))$ |                      |
| 2 | $S(d)$                             |                      |
|   |                                    |                      |
| 3 | $S(d) \rightarrow T(a)$            | $\forall E$ 1        |
| 4 | $T(a)$                             | $\rightarrow E$ 3, 2 |
5.  $\forall x(Ax \rightarrow B(x)), \forall x(B(x) \rightarrow C(x)) \therefore \forall x(A(x) \rightarrow C(x))$  Valid
- |   |                                    |                      |
|---|------------------------------------|----------------------|
| 1 | $\forall x(A(x) \rightarrow B(x))$ |                      |
| 2 | $\forall x(B(x) \rightarrow C(x))$ |                      |
|   |                                    |                      |
| 3 | $A(a) \rightarrow B(a)$            | $\forall E$ 1        |
| 4 | $B(a) \rightarrow C(a)$            | $\forall E$ 2        |
| 5 | $A(a)$                             |                      |
|   |                                    |                      |
| 6 | $B(a)$                             | $\rightarrow E$ 3, 5 |
| 7 | $C(a)$                             | $\rightarrow E$ 4, 6 |
| 8 | $A(a) \rightarrow C(a)$            | $\rightarrow I$ 5–7  |
| 9 | $\forall x(A(x) \rightarrow C(x))$ | $\forall I$ 8        |
6.  $\exists x(D(x) \vee E(x)), \forall x(D(x) \rightarrow F(x)) \therefore \exists x(D(x) \wedge F(x))$  Invalid  
**Counter-interpretation:** let the domain be the number 1. Let ‘ $Dx$ ’ hold of nothing. Let both ‘ $Ex$ ’ and ‘ $Fx$ ’ hold of everything.
7.  $\forall x \forall y (R(x, y) \vee R(y, x)) \therefore Rjj$  Valid
- |   |  |                         |
|---|--|-------------------------|
| 1 | $\forall x \forall y (R(x, y) \vee R(y, x))$ |                         |
|   |  |                         |
| 2 | $\forall y (R(j, y) \vee R(y, j))$           | $\forall E$ 1           |
| 3 | $R(j, j) \vee R(j, j)$                       | $\forall E$ 2           |
| 4 | $R(j, j)$                                    |                         |
|   |  |                         |
| 5 | $R(j, j)$                                    | R 4                     |
| 6 | $R(j, j)$                                    |                         |
|   |  |                         |
| 7 | $R(j, j)$                                    | R 6                     |
| 8 | $R(j, j)$                                    | $\forall E$ 3, 4–5, 6–7 |
8.  $\exists x \exists y (R(x, y) \vee R(y, x)) \therefore Rjj$  Invalid  
**Counter-interpretation:** consider the following diagram, allowing ‘ $j$ ’ to name 2.



2

9.  $\forall x P(x) \rightarrow \forall x Q(x), \exists x \neg P(x) \therefore \exists x \neg Q(x)$  Invalid  
 Counter-interpretation: let the domain be the number 1. Let ' $Px$ ' be true of nothing. Let ' $Qx$ ' be true of everything.
10.  $\exists x M(x) \rightarrow \exists x N(x), \neg \exists x N(x) \therefore \forall x \neg M(x)$  Valid

1	$\exists x M(x) \rightarrow \exists x N(x)$																			
2	$\neg \exists x N(x)$																			
3	<table style="border-collapse: collapse; margin-left: 10px;"> <tr> <td style="border-right: 1px solid black; padding-right: 5px;">3</td> <td style="border-bottom: 1px solid black; padding: 0 5px;"><math>M(a)</math></td> <td></td> </tr> <tr> <td style="border-right: 1px solid black; padding-right: 5px;">4</td> <td style="padding: 0 5px;"><math>\exists x M(x)</math></td> <td style="padding-left: 20px;"><math>\exists I</math> 3</td> </tr> <tr> <td style="border-right: 1px solid black; padding-right: 5px;">5</td> <td style="padding: 0 5px;"><math>\exists x N(x)</math></td> <td style="padding-left: 20px;"><math>\rightarrow E</math> 1, 4</td> </tr> <tr> <td style="border-right: 1px solid black; padding-right: 5px;">6</td> <td style="padding: 0 5px;"><math>\perp</math></td> <td style="padding-left: 20px;"><math>\neg E</math> 5, 2</td> </tr> <tr> <td style="border-right: 1px solid black; padding-right: 5px;">7</td> <td style="padding: 0 5px;"><math>\neg M(a)</math></td> <td style="padding-left: 20px;"><math>\neg I</math> 3–6</td> </tr> <tr> <td style="border-right: 1px solid black; padding-right: 5px;">8</td> <td style="padding: 0 5px;"><math>\forall x \neg M(x)</math></td> <td style="padding-left: 20px;"><math>\forall I</math> 7</td> </tr> </table>	3	$M(a)$		4	$\exists x M(x)$	$\exists I$ 3	5	$\exists x N(x)$	$\rightarrow E$ 1, 4	6	$\perp$	$\neg E$ 5, 2	7	$\neg M(a)$	$\neg I$ 3–6	8	$\forall x \neg M(x)$	$\forall I$ 7	
3	$M(a)$																			
4	$\exists x M(x)$	$\exists I$ 3																		
5	$\exists x N(x)$	$\rightarrow E$ 1, 4																		
6	$\perp$	$\neg E$ 5, 2																		
7	$\neg M(a)$	$\neg I$ 3–6																		
8	$\forall x \neg M(x)$	$\forall I$ 7																		

## CHAPTER 36

# *Conversion of quantifiers*

A. Show in each case that the sentences are provably inconsistent:

1.  $Sa \rightarrow T(m), T(m) \rightarrow S(a), T(m) \wedge \neg S(a)$

1		$S(a) \rightarrow T(m)$	
2		$T(m) \rightarrow S(a)$	
3		$T(m) \wedge \neg S(a)$	
<hr/>			
4		$T(m)$	$\wedge E$ 3
5		$\neg S(a)$	$\wedge E$ 3
6		$S(a)$	$\rightarrow E$ 2, 4
7		$\perp$	$\neg E$ 5, 6

2.  $\neg\exists x R(x, a), \forall x\forall y R(y, x)$

1	$\neg\exists x R(x, a)$	
2	$\forall x\forall y R(y, x)$	
3	$\forall x\neg R(x, a)$	CQ 1
4	$\neg R(b, a)$	$\forall E$ 3
5	$\forall y R(y, a)$	$\forall E$ 2
6	$R(b, a)$	$\forall E$ 5
7	$\perp$	$\neg E$ 6, 4

3.  $\neg\exists x\exists y L(x, y), L(a, a)$

1	$\neg\exists x\exists y L(x, y)$	
2	$L(a, a)$	
3	$\forall x\neg\exists y L(x, y)$	CQ 1
4	$\neg\exists y L(a, y)$	$\forall E$ 3
5	$\forall y\neg L(a, y)$	CQ 4
6	$\neg L(a, a)$	$\forall E$ 5
7	$\perp$	$\neg E$ 2, 6

4.  $\forall x(P(x) \rightarrow Q(x)), \forall z(P(z) \rightarrow R(z)), \forall y P(y), \neg Q(a) \wedge \neg R(b)$

1	$\forall x(P(x) \rightarrow Q(x))$	
2	$\forall z(P(z) \rightarrow R(z))$	
3	$\forall y P(y)$	
4	$\neg Q(a) \wedge \neg R(b)$	
5	$\neg Q(a)$	$\wedge E$ 4
6	$P(a) \rightarrow Q(a)$	$\forall E$ 1
7	$\neg P(a)$	MT 6, 5
8	$P(a)$	$\forall E$ 3
9	$\perp$	$\neg E$ 8, 7

**B.** Show that each pair of sentences is provably equivalent:

1.  $\forall x(Ax \rightarrow \neg B(x)), \neg\exists x(A(x) \wedge B(x))$



<table style="width: 100%; border-collapse: collapse;"> <tr><td style="border-right: 1px solid black; padding-right: 5px;">1</td><td style="border-bottom: 1px solid black; padding-left: 5px;"><math>\forall x(A(x) \rightarrow \neg B(x))</math></td><td></td></tr> <tr><td style="border-right: 1px solid black; padding-right: 5px;">2</td><td style="border-left: 1px solid black; border-bottom: 1px solid black; padding-left: 5px;"><math>\exists x(A(x) \wedge B(x))</math></td><td></td></tr> <tr><td style="border-right: 1px solid black; padding-right: 5px;">3</td><td style="border-left: 1px solid black; border-bottom: 1px solid black; padding-left: 5px;"><math>A(a) \wedge B(a)</math></td><td></td></tr> <tr><td style="border-right: 1px solid black; padding-right: 5px;">4</td><td style="border-left: 1px solid black; padding-left: 5px;"><math>A(a)</math></td><td style="padding-left: 5px;"><math>\wedge E</math> 3</td></tr> <tr><td style="border-right: 1px solid black; padding-right: 5px;">5</td><td style="border-left: 1px solid black; padding-left: 5px;"><math>B(a)</math></td><td style="padding-left: 5px;"><math>\wedge E</math> 3</td></tr> <tr><td style="border-right: 1px solid black; padding-right: 5px;">6</td><td style="border-left: 1px solid black; padding-left: 5px;"><math>A(a) \rightarrow \neg B(a)</math></td><td style="padding-left: 5px;"><math>\forall E</math> 1</td></tr> <tr><td style="border-right: 1px solid black; padding-right: 5px;">7</td><td style="border-left: 1px solid black; padding-left: 5px;"><math>\neg B(a)</math></td><td style="padding-left: 5px;"><math>\rightarrow E</math> 6, 4</td></tr> <tr><td style="border-right: 1px solid black; padding-right: 5px;">8</td><td style="border-left: 1px solid black; padding-left: 5px;"><math>\perp</math></td><td style="padding-left: 5px;"><math>\neg E</math> 5, 7</td></tr> <tr><td style="border-right: 1px solid black; padding-right: 5px;">9</td><td style="border-left: 1px solid black; padding-left: 5px;"><math>\perp</math></td><td style="padding-left: 5px;"><math>\exists E</math> 2, 3–8</td></tr> <tr><td style="border-right: 1px solid black; padding-right: 5px;">10</td><td style="padding-left: 5px;"><math>\neg \exists x(A(x) \wedge B(x))</math></td><td style="padding-left: 5px;"><math>\neg I</math> 2–9</td></tr> </table>	1	$\forall x(A(x) \rightarrow \neg B(x))$		2	$\exists x(A(x) \wedge B(x))$		3	$A(a) \wedge B(a)$		4	$A(a)$	$\wedge E$ 3	5	$B(a)$	$\wedge E$ 3	6	$A(a) \rightarrow \neg B(a)$	$\forall E$ 1	7	$\neg B(a)$	$\rightarrow E$ 6, 4	8	$\perp$	$\neg E$ 5, 7	9	$\perp$	$\exists E$ 2, 3–8	10	$\neg \exists x(A(x) \wedge B(x))$	$\neg I$ 2–9	<table style="width: 100%; border-collapse: collapse;"> <tr><td style="border-right: 1px solid black; padding-right: 5px;">1</td><td style="border-bottom: 1px solid black; padding-left: 5px;"><math>\neg \exists x(A(x) \wedge B(x))</math></td><td></td></tr> <tr><td style="border-right: 1px solid black; padding-right: 5px;">2</td><td style="padding-left: 5px;"><math>\forall x \neg(A(x) \wedge B(x))</math></td><td style="padding-left: 5px;">CQ 1</td></tr> <tr><td style="border-right: 1px solid black; padding-right: 5px;">3</td><td style="padding-left: 5px;"><math>\neg(A(a) \wedge B(a))</math></td><td style="padding-left: 5px;"><math>\forall E</math> 2</td></tr> <tr><td style="border-right: 1px solid black; padding-right: 5px;">4</td><td style="border-left: 1px solid black; padding-left: 5px;"><math>A(a)</math></td><td></td></tr> <tr><td style="border-right: 1px solid black; padding-right: 5px;">5</td><td style="border-left: 1px solid black; border-bottom: 1px solid black; padding-left: 5px;"><math>B(a)</math></td><td></td></tr> <tr><td style="border-right: 1px solid black; padding-right: 5px;">6</td><td style="border-left: 1px solid black; padding-left: 5px;"><math>A(a) \wedge B(a)</math></td><td style="padding-left: 5px;"><math>\wedge I</math> 4, 5</td></tr> <tr><td style="border-right: 1px solid black; padding-right: 5px;">7</td><td style="border-left: 1px solid black; padding-left: 5px;"><math>\perp</math></td><td style="padding-left: 5px;"><math>\neg E</math> 6, 3</td></tr> <tr><td style="border-right: 1px solid black; padding-right: 5px;">8</td><td style="border-left: 1px solid black; padding-left: 5px;"><math>\neg B(a)</math></td><td style="padding-left: 5px;"><math>\neg I</math> 5–7</td></tr> <tr><td style="border-right: 1px solid black; padding-right: 5px;">9</td><td style="padding-left: 5px;"><math>A(a) \rightarrow \neg B(a)</math></td><td style="padding-left: 5px;"><math>\rightarrow I</math> 4–8</td></tr> <tr><td style="border-right: 1px solid black; padding-right: 5px;">10</td><td style="padding-left: 5px;"><math>\forall x(A(x) \rightarrow \neg B(x))</math></td><td style="padding-left: 5px;"><math>\forall I</math> 9</td></tr> </table>	1	$\neg \exists x(A(x) \wedge B(x))$		2	$\forall x \neg(A(x) \wedge B(x))$	CQ 1	3	$\neg(A(a) \wedge B(a))$	$\forall E$ 2	4	$A(a)$		5	$B(a)$		6	$A(a) \wedge B(a)$	$\wedge I$ 4, 5	7	$\perp$	$\neg E$ 6, 3	8	$\neg B(a)$	$\neg I$ 5–7	9	$A(a) \rightarrow \neg B(a)$	$\rightarrow I$ 4–8	10	$\forall x(A(x) \rightarrow \neg B(x))$	$\forall I$ 9
1	$\forall x(A(x) \rightarrow \neg B(x))$																																																												
2	$\exists x(A(x) \wedge B(x))$																																																												
3	$A(a) \wedge B(a)$																																																												
4	$A(a)$	$\wedge E$ 3																																																											
5	$B(a)$	$\wedge E$ 3																																																											
6	$A(a) \rightarrow \neg B(a)$	$\forall E$ 1																																																											
7	$\neg B(a)$	$\rightarrow E$ 6, 4																																																											
8	$\perp$	$\neg E$ 5, 7																																																											
9	$\perp$	$\exists E$ 2, 3–8																																																											
10	$\neg \exists x(A(x) \wedge B(x))$	$\neg I$ 2–9																																																											
1	$\neg \exists x(A(x) \wedge B(x))$																																																												
2	$\forall x \neg(A(x) \wedge B(x))$	CQ 1																																																											
3	$\neg(A(a) \wedge B(a))$	$\forall E$ 2																																																											
4	$A(a)$																																																												
5	$B(a)$																																																												
6	$A(a) \wedge B(a)$	$\wedge I$ 4, 5																																																											
7	$\perp$	$\neg E$ 6, 3																																																											
8	$\neg B(a)$	$\neg I$ 5–7																																																											
9	$A(a) \rightarrow \neg B(a)$	$\rightarrow I$ 4–8																																																											
10	$\forall x(A(x) \rightarrow \neg B(x))$	$\forall I$ 9																																																											

2.  $\forall x(\neg A(x) \rightarrow B(d)), \forall x A(x) \vee B(d)$

<table style="width: 100%; border-collapse: collapse;"> <tr><td style="border-right: 1px solid black; padding-right: 5px;">1</td><td style="border-bottom: 1px solid black; padding-left: 5px;"><math>\forall x(\neg A(x) \rightarrow B(d))</math></td><td></td></tr> <tr><td style="border-right: 1px solid black; padding-right: 5px;">2</td><td style="padding-left: 5px;"><math>\neg A(a) \rightarrow B(d)</math></td><td style="padding-left: 5px;"><math>\forall E</math> 1</td></tr> <tr><td style="border-right: 1px solid black; padding-right: 5px;">3</td><td style="border-left: 1px solid black; border-bottom: 1px solid black; padding-left: 5px;"><math>B(d)</math></td><td></td></tr> <tr><td style="border-right: 1px solid black; padding-right: 5px;">4</td><td style="border-left: 1px solid black; padding-left: 5px;"><math>\forall x A(x) \vee B(d)</math></td><td style="padding-left: 5px;"><math>\forall I</math> 6</td></tr> <tr><td style="border-right: 1px solid black; padding-right: 5px;">5</td><td style="border-left: 1px solid black; border-bottom: 1px solid black; padding-left: 5px;"><math>\neg B(d)</math></td><td></td></tr> <tr><td style="border-right: 1px solid black; padding-right: 5px;">6</td><td style="border-left: 1px solid black; padding-left: 5px;"><math>\neg \neg A(a)</math></td><td style="padding-left: 5px;">MT 2, 5</td></tr> <tr><td style="border-right: 1px solid black; padding-right: 5px;">7</td><td style="border-left: 1px solid black; padding-left: 5px;"><math>A(a)</math></td><td style="padding-left: 5px;">DNE 6</td></tr> <tr><td style="border-right: 1px solid black; padding-right: 5px;">8</td><td style="padding-left: 5px;"><math>\forall x A(x)</math></td><td style="padding-left: 5px;"><math>\forall E</math> 7</td></tr> <tr><td style="border-right: 1px solid black; padding-right: 5px;">9</td><td style="padding-left: 5px;"><math>\forall x A(x) \vee B(d)</math></td><td style="padding-left: 5px;"><math>\forall I</math> 8</td></tr> <tr><td style="border-right: 1px solid black; padding-right: 5px;">10</td><td style="padding-left: 5px;"><math>\forall x A(x) \vee B(d)</math></td><td style="padding-left: 5px;">LEM 3–4, 5–9</td></tr> </table>	1	$\forall x(\neg A(x) \rightarrow B(d))$		2	$\neg A(a) \rightarrow B(d)$	$\forall E$ 1	3	$B(d)$		4	$\forall x A(x) \vee B(d)$	$\forall I$ 6	5	$\neg B(d)$		6	$\neg \neg A(a)$	MT 2, 5	7	$A(a)$	DNE 6	8	$\forall x A(x)$	$\forall E$ 7	9	$\forall x A(x) \vee B(d)$	$\forall I$ 8	10	$\forall x A(x) \vee B(d)$	LEM 3–4, 5–9	<table style="width: 100%; border-collapse: collapse;"> <tr><td style="border-right: 1px solid black; padding-right: 5px;">1</td><td style="border-bottom: 1px solid black; padding-left: 5px;"><math>\forall x A(x) \vee B(d)</math></td><td></td></tr> <tr><td style="border-right: 1px solid black; padding-right: 5px;">2</td><td style="border-left: 1px solid black; border-bottom: 1px solid black; padding-left: 5px;"><math>\neg A(a)</math></td><td></td></tr> <tr><td style="border-right: 1px solid black; padding-right: 5px;">3</td><td style="border-left: 1px solid black; border-bottom: 1px solid black; padding-left: 5px;"><math>\forall x A(x)</math></td><td></td></tr> <tr><td style="border-right: 1px solid black; padding-right: 5px;">4</td><td style="border-left: 1px solid black; padding-left: 5px;"><math>A(a)</math></td><td style="padding-left: 5px;"><math>\forall E</math> 3</td></tr> <tr><td style="border-right: 1px solid black; padding-right: 5px;">5</td><td style="border-left: 1px solid black; padding-left: 5px;"><math>\perp</math></td><td style="padding-left: 5px;"><math>\neg E</math> 4, 2</td></tr> <tr><td style="border-right: 1px solid black; padding-right: 5px;">6</td><td style="border-left: 1px solid black; padding-left: 5px;"><math>\neg \forall x A(x)</math></td><td style="padding-left: 5px;"><math>\neg I</math> 3–5</td></tr> <tr><td style="border-right: 1px solid black; padding-right: 5px;">7</td><td style="border-left: 1px solid black; padding-left: 5px;"><math>B(d)</math></td><td style="padding-left: 5px;">DS 1, 6</td></tr> <tr><td style="border-right: 1px solid black; padding-right: 5px;">8</td><td style="padding-left: 5px;"><math>\neg A(a) \rightarrow B(d)</math></td><td style="padding-left: 5px;"><math>\rightarrow I</math> 2–7</td></tr> <tr><td style="border-right: 1px solid black; padding-right: 5px;">9</td><td style="padding-left: 5px;"><math>\forall x(A(x) \rightarrow B(d))</math></td><td style="padding-left: 5px;"><math>\forall I</math> 8</td></tr> </table>	1	$\forall x A(x) \vee B(d)$		2	$\neg A(a)$		3	$\forall x A(x)$		4	$A(a)$	$\forall E$ 3	5	$\perp$	$\neg E$ 4, 2	6	$\neg \forall x A(x)$	$\neg I$ 3–5	7	$B(d)$	DS 1, 6	8	$\neg A(a) \rightarrow B(d)$	$\rightarrow I$ 2–7	9	$\forall x(A(x) \rightarrow B(d))$	$\forall I$ 8
1	$\forall x(\neg A(x) \rightarrow B(d))$																																																									
2	$\neg A(a) \rightarrow B(d)$	$\forall E$ 1																																																								
3	$B(d)$																																																									
4	$\forall x A(x) \vee B(d)$	$\forall I$ 6																																																								
5	$\neg B(d)$																																																									
6	$\neg \neg A(a)$	MT 2, 5																																																								
7	$A(a)$	DNE 6																																																								
8	$\forall x A(x)$	$\forall E$ 7																																																								
9	$\forall x A(x) \vee B(d)$	$\forall I$ 8																																																								
10	$\forall x A(x) \vee B(d)$	LEM 3–4, 5–9																																																								
1	$\forall x A(x) \vee B(d)$																																																									
2	$\neg A(a)$																																																									
3	$\forall x A(x)$																																																									
4	$A(a)$	$\forall E$ 3																																																								
5	$\perp$	$\neg E$ 4, 2																																																								
6	$\neg \forall x A(x)$	$\neg I$ 3–5																																																								
7	$B(d)$	DS 1, 6																																																								
8	$\neg A(a) \rightarrow B(d)$	$\rightarrow I$ 2–7																																																								
9	$\forall x(A(x) \rightarrow B(d))$	$\forall I$ 8																																																								

**C.** In §23, we considered what happens when we move quantifiers ‘across’ various logical operators. Show that each pair of sentences is provably equivalent:

1.  $\forall x(F(x) \wedge G(a)), \forall x F(x) \wedge G(a)$

1	$\forall x(F(x) \wedge G(a))$	
2	$F(b) \wedge G(a)$	$\forall E$ 1
3	$F(b)$	$\wedge E$ 2
4	$G(a)$	$\wedge E$ 2
5	$\forall x F(x)$	$\forall I$ 3
6	$\forall x F(x) \wedge G(a)$	$\wedge I$ 5, 4

1	$\forall x F(x) \wedge G(a)$	
2	$\forall x F(x)$	$\wedge E$ 1
3	$G(a)$	$\wedge E$ 1
4	$F(b)$	$\forall E$ 2
5	$F(b) \wedge G(a)$	$\wedge I$ 4, 3
6	$\forall x(F(x) \wedge G(a))$	$\forall I$ 5

2.  $\exists x(F(x) \vee G(a)), \exists x F(x) \vee G(a)$

1	$\exists x(F(x) \vee G(a))$	
2	$F(b) \vee G(a)$	
3	$F(b)$	
4	$\exists x F(x)$	$\exists I$ 3
5	$\exists x F(x) \vee G(a)$	$\vee I$ 4
6	$G(a)$	
7	$\exists x F(x) \vee G(a)$	$\vee I$ 6
8	$\exists x F(x) \vee G(a)$	$\vee E$ 2, 3-5, 6-8
9	$\exists x F(x) \vee G(a)$	$\exists E$ 1, 2-8

1	$\exists x F(x) \vee G(a)$	
2	$\exists x F(x)$	
3	$F(b)$	
4	$F(b) \vee G(a)$	$\vee I$ 3
5	$\exists x(F(x) \vee G(a))$	$\exists I$ 4
6	$\exists x(F(x) \vee G(a))$	$\exists E$ 2, 3-5
7	$G(a)$	
8	$F(b) \vee G(a)$	$\vee I$ 7
9	$\exists x(F(x) \vee G(a))$	$\exists I$ 8
10	$\exists x(F(x) \vee G(a))$	$\vee E$ 1, 2-6, 7

3.  $\forall x(G(a) \rightarrow F(x)), G(a) \rightarrow \forall x F(x)$

1	$\forall x(G(a) \rightarrow F(x))$	
2	$G(a) \rightarrow F(b)$	$\forall E$ 1
3	$G(a)$	
4	$F(b)$	$\rightarrow E$ 2, 3
5	$\forall x F(x)$	$\forall I$ 4
6	$G(a) \rightarrow \forall x F(x)$	$\rightarrow I$ 3-5

1	$G(a) \rightarrow \forall x F(x)$	
2	$G(a)$	
3	$\forall x F(x)$	$\rightarrow E$ 1, 2
4	$F(b)$	$\forall E$ 3
5	$G(a) \rightarrow F(b)$	$\rightarrow I$ 2-4
6	$\forall x(G(a) \rightarrow F(x))$	$\forall I$ 5

4.  $\forall x(F(x) \rightarrow G(a)), \exists x F(x) \rightarrow G(a)$

1	$\forall x(F(x) \rightarrow G(a))$	
2	$\exists x F(x)$	
3	$F(b)$	
4	$F(b) \rightarrow G(a)$	$\forall E$ 1
5	$G(a)$	$\rightarrow E$ 4, 3
6	$G(a)$	$\exists E$ 2, 3–5
7	$\exists x F(x) \rightarrow G(a)$	$\rightarrow I$ 2–6

1	$\exists x F(x) \rightarrow G(a)$	
2	$F(b)$	
3	$\exists x F(x)$	$\exists I$ 2
4	$G(a)$	$\rightarrow E$ 1, 3
5	$F(b) \rightarrow G(a)$	$\rightarrow I$ 2–4
6	$\forall x(F(x) \rightarrow G(a))$	$\forall I$ 5

5.  $\exists x(G(a) \rightarrow F(x)), G(a) \rightarrow \exists x F(x)$

1	$\exists x(G(a) \rightarrow F(x))$	
2	$G(a)$	
3	$G(a) \rightarrow F(b)$	
4	$F(b)$	$\rightarrow E$ 3, 2
5	$\exists x F(x)$	$\exists I$ 4
6	$\exists x F(x)$	$\exists E$ 1, 3–5
7	$G(a) \rightarrow \exists x F(x)$	$\rightarrow I$ 2–6

1	$G(a) \rightarrow \exists x F(x)$	
2	$G(a)$	
3	$\exists x F(x)$	
4	$F(b)$	
5	$G(a)$	
6	$F(b)$	$R$ 4
7	$G(a) \rightarrow F(b)$	$\rightarrow I$ 5–6
8	$\exists x(G(a) \rightarrow F(x))$	$\exists I$ 7
9	$\exists x(G(a) \rightarrow F(x))$	$\exists E$ 3, 4–8
10	$\neg G(a)$	
11	$G(a)$	
12	$\perp$	$\neg E$ 11, 10
13	$F(b)$	$X$ 12
14	$G(a) \rightarrow F(b)$	$\rightarrow E$ 11–13
15	$\exists x(G(a) \rightarrow F(x))$	$\exists I$ 14
16	$\exists x(G(a) \rightarrow F(x))$	$LEM$ 2–9, 10–15

6.  $\exists x(F(x) \rightarrow G(a)), \forall x F(x) \rightarrow G(a)$

1	$\exists x(F(x) \rightarrow G(a))$	
2	$\forall x F(x)$	
3	$F(b) \rightarrow G(a)$	
4	$F(b)$	$\forall E$ 2
5	$G(a)$	$\rightarrow E$ 3, 4
6	$G(a)$	$\exists E$ 1, 3–5
7	$\forall x F(x) \rightarrow G(a)$	$\rightarrow I$ 2–6

1	$\forall x F(x) \rightarrow G(a)$	
2	$\forall x F(x)$	
3	$G(a)$	$\rightarrow E$ 1, 2
4	$F(b)$	
5	$G(a)$	R 3
6	$F(b) \rightarrow G(a)$	$\rightarrow I$ 4–5
7	$\exists x(F(x) \rightarrow G(a))$	$\exists I$ 6
8	$\neg \forall x F(x)$	
9	$\exists x \neg F(x)$	CQ 8
10	$\neg F(b)$	
11	$F(b)$	
12	$\perp$	$\neg E$ 11, 10
13	$G(a)$	X 12
14	$F(b) \rightarrow G(a)$	$\rightarrow I$ 11–13
15	$\exists x(F(x) \rightarrow G(a))$	$\exists I$ 14
16	$\exists x(F(x) \rightarrow G(a))$	$\exists E$ 9, 10–15
17	$\exists x(F(x) \rightarrow G(a))$	LEM 2–7, 8

NB: the variable ‘ $x$ ’ does not occur in ‘ $G(a)$ ’. When all the quantifiers occur at the beginning of a sentence, that sentence is said to be in *prenex normal form*. Together with the CQ rules, these equivalences are sometimes called *prenexing rules*, since they give us a means for putting any sentence into prenex normal form.

## CHAPTER 37

# *Rules for identity*

A. Provide a proof of each claim.

1.  $P a \vee Q(b), Q(b) \rightarrow b = c, \neg P(a) \vdash Q(c)$

1	$P(a) \vee Q(b)$	
2	$Q(b) \rightarrow b = c$	
3	$\neg P(a)$	
<hr/>		
4	$Q(b)$	DS 1, 3
5	$b = c$	$\rightarrow$ E 2, 4
6	$Q(c)$	$=$ E 5, 4

2.  $m = n \vee n = o, A(n) \vdash A(m) \vee A(o)$

1	$m = n \vee n = o$	
2	$A(n)$	
3	$m = n$	
4	$A(m)$	$=E$ 3, 2
5	$A(m) \vee A(o)$	$\vee I$ 4
6	$n = o$	
7	$A(o)$	$=E$ 6, 7
8	$A(m) \vee A(o)$	$\vee I$ 7
9	$A(m) \vee A(o)$	$\vee E$ 1, 3-5, 6-8

3.  $\forall x x = m, R(m, a) \vdash \exists x R(x, x)$

1	$\forall x x = m$	
2	$R(m, a)$	
3	$a = m$	$\forall E$ 1
4	$R(a, a)$	$=E$ 3, 2
5	$\exists x R(x, x)$	$\exists I$ 4

4.  $\forall x \forall y (R(x, y) \rightarrow x = y) \vdash R(a, b) \rightarrow R(b, a)$

1	$\forall x \forall y (R(x, y) \rightarrow x = y)$	
2	$R(a, b)$	
3	$\forall y (R(a, y) \rightarrow a = y)$	$\forall E$ 1
4	$R(a, b) \rightarrow a = b$	$\forall E$ 3
5	$a = b$	$\rightarrow E$ 4, 2
6	$R(a, a)$	$=E$ 5, 2
7	$R(b, a)$	$=E$ 5, 6
8	$R(a, b) \rightarrow R(b, a)$	$\rightarrow I$ 2-7

5.  $\neg \exists x \neg x = m \vdash \forall x \forall y (P(x) \rightarrow P(y))$

1	$\neg\exists x\neg x = m$																												
2	$\forall x\neg\neg x = m$	CQ 1																											
3	$\neg\neg a = m$	$\forall E$ 2																											
4	$a = m$	DNE 3																											
5	$\neg\neg b = m$	$\forall E$ 2																											
6	$b = m$	DNE 5																											
7	<table style="border-collapse: collapse; width: 100%;"> <tr> <td style="border-left: 1px solid black; padding-left: 5px;">8</td> <td style="border-left: 1px solid black; padding-left: 5px;"><math>P(m)</math></td> <td style="vertical-align: top;"><math>=E</math> 3, 7</td> </tr> <tr> <td style="border-left: 1px solid black; padding-left: 5px;">9</td> <td style="border-left: 1px solid black; padding-left: 5px;"><math>P(b)</math></td> <td style="vertical-align: top;"><math>=E</math> 5, 8</td> </tr> </table>	8	$P(m)$	$=E$ 3, 7	9	$P(b)$	$=E$ 5, 8																						
8	$P(m)$	$=E$ 3, 7																											
9	$P(b)$	$=E$ 5, 8																											
10	$P(a) \rightarrow P(b)$	$\rightarrow I$ 7-9																											
11	$\forall y(P(a) \rightarrow P(y))$	$\forall I$ 10																											
12	$\forall x\forall y(P(x) \rightarrow P(y))$	$\forall I$ 11																											
6. $\exists x J(x), \exists x\neg J(x) \vdash \exists x\exists y \neg x = y$																													
1	$\exists x J(x)$																												
2	$\exists x\neg J(x)$																												
3	<table style="border-collapse: collapse; width: 100%;"> <tr> <td style="border-left: 1px solid black; padding-left: 5px;">4</td> <td style="border-left: 1px solid black; padding-left: 5px;"> <table style="border-collapse: collapse; width: 100%;"> <tr> <td style="border-left: 1px solid black; padding-left: 5px;">5</td> <td style="border-left: 1px solid black; padding-left: 5px;"><math>a = b</math></td> <td style="width: 10%;"></td> </tr> <tr> <td style="border-left: 1px solid black; padding-left: 5px;">6</td> <td style="border-left: 1px solid black; padding-left: 5px;"><math>J(b)</math></td> <td style="vertical-align: top;"><math>=E</math> 5, 3</td> </tr> <tr> <td style="border-left: 1px solid black; padding-left: 5px;">7</td> <td style="border-left: 1px solid black; padding-left: 5px;"><math>\perp</math></td> <td style="vertical-align: top;"><math>\neg E</math> 6, 4</td> </tr> </table> </td> <td style="vertical-align: top;"><math>J(a)</math></td> <td></td> </tr> <tr> <td style="border-left: 1px solid black; padding-left: 5px;">8</td> <td style="border-left: 1px solid black; padding-left: 5px;"><math>\neg a = b</math></td> <td style="vertical-align: top;"><math>\neg I</math> 5-7</td> </tr> <tr> <td style="border-left: 1px solid black; padding-left: 5px;">9</td> <td style="border-left: 1px solid black; padding-left: 5px;"><math>\exists y\neg a = y</math></td> <td style="vertical-align: top;"><math>\exists I</math> 8</td> </tr> <tr> <td style="border-left: 1px solid black; padding-left: 5px;">10</td> <td style="border-left: 1px solid black; padding-left: 5px;"><math>\exists x\exists y\neg x = y</math></td> <td style="vertical-align: top;"><math>\exists I</math> 9</td> </tr> <tr> <td style="border-left: 1px solid black; padding-left: 5px;">11</td> <td style="border-left: 1px solid black; padding-left: 5px;"><math>\exists x\exists y\neg x = y</math></td> <td style="vertical-align: top;"><math>\exists E</math> 2, 4-10</td> </tr> <tr> <td style="border-left: 1px solid black; padding-left: 5px;">12</td> <td style="border-left: 1px solid black; padding-left: 5px;"><math>\exists x\exists y\neg x = y</math></td> <td style="vertical-align: top;"><math>\exists E</math> 1, 3-11</td> </tr> </table>	4	<table style="border-collapse: collapse; width: 100%;"> <tr> <td style="border-left: 1px solid black; padding-left: 5px;">5</td> <td style="border-left: 1px solid black; padding-left: 5px;"><math>a = b</math></td> <td style="width: 10%;"></td> </tr> <tr> <td style="border-left: 1px solid black; padding-left: 5px;">6</td> <td style="border-left: 1px solid black; padding-left: 5px;"><math>J(b)</math></td> <td style="vertical-align: top;"><math>=E</math> 5, 3</td> </tr> <tr> <td style="border-left: 1px solid black; padding-left: 5px;">7</td> <td style="border-left: 1px solid black; padding-left: 5px;"><math>\perp</math></td> <td style="vertical-align: top;"><math>\neg E</math> 6, 4</td> </tr> </table>	5	$a = b$		6	$J(b)$	$=E$ 5, 3	7	$\perp$	$\neg E$ 6, 4	$J(a)$		8	$\neg a = b$	$\neg I$ 5-7	9	$\exists y\neg a = y$	$\exists I$ 8	10	$\exists x\exists y\neg x = y$	$\exists I$ 9	11	$\exists x\exists y\neg x = y$	$\exists E$ 2, 4-10	12	$\exists x\exists y\neg x = y$	$\exists E$ 1, 3-11
4	<table style="border-collapse: collapse; width: 100%;"> <tr> <td style="border-left: 1px solid black; padding-left: 5px;">5</td> <td style="border-left: 1px solid black; padding-left: 5px;"><math>a = b</math></td> <td style="width: 10%;"></td> </tr> <tr> <td style="border-left: 1px solid black; padding-left: 5px;">6</td> <td style="border-left: 1px solid black; padding-left: 5px;"><math>J(b)</math></td> <td style="vertical-align: top;"><math>=E</math> 5, 3</td> </tr> <tr> <td style="border-left: 1px solid black; padding-left: 5px;">7</td> <td style="border-left: 1px solid black; padding-left: 5px;"><math>\perp</math></td> <td style="vertical-align: top;"><math>\neg E</math> 6, 4</td> </tr> </table>	5	$a = b$		6	$J(b)$	$=E$ 5, 3	7	$\perp$	$\neg E$ 6, 4	$J(a)$																		
5	$a = b$																												
6	$J(b)$	$=E$ 5, 3																											
7	$\perp$	$\neg E$ 6, 4																											
8	$\neg a = b$	$\neg I$ 5-7																											
9	$\exists y\neg a = y$	$\exists I$ 8																											
10	$\exists x\exists y\neg x = y$	$\exists I$ 9																											
11	$\exists x\exists y\neg x = y$	$\exists E$ 2, 4-10																											
12	$\exists x\exists y\neg x = y$	$\exists E$ 1, 3-11																											
7. $\forall x(x = n \leftrightarrow M(x)), \forall x(O(x) \vee \neg M(x)) \vdash O(n)$																													

1	$\forall x(x = n \leftrightarrow M(x))$	
2	$\forall x(O(x) \vee \neg M(x))$	
3	$n = n \leftrightarrow M(n)$	$\forall E$ 1
4	$n = n$	$=I$
5	$M(n)$	$\leftrightarrow E$ 3, 4
6	$O(n) \vee \neg M(n)$	$\forall E$ 2
7	$\neg O(n)$	
8	$\neg M(n)$	$DS$ 6, 7
9	$\perp$	$\neg E$ 5, 8
10	$\neg\neg O(n)$	$\neg I$ 7–9
11	$O(n)$	$DNE$ 10

8.  $\exists x D(x), \forall x(x = p \leftrightarrow D(x)) \vdash D(p)$

1	$\exists x D(x)$	
2	$\forall x(x = p \leftrightarrow D(x))$	
3	$D(c)$	
4	$c = p \leftrightarrow D(c)$	$\forall E$ 2
5	$c = p$	$\leftrightarrow E$ 4, 3
6	$D(p)$	$=E$ 5, 3
7	$D(p)$	$\exists E$ 1, 3–6

9.  $\exists x[(K(x) \wedge \forall y(K(y) \rightarrow x = y)) \wedge B(x)], K(d) \vdash B(d)$



1	$\exists x[(K(x) \wedge \forall y(K(y) \rightarrow x = y) \wedge B(x))]$	
2	$K(d)$	
3	$(K(a) \wedge \forall y(K(y) \rightarrow a = y)) \wedge B(a)$	
4	$K(a) \wedge \forall y(K(y) \rightarrow a = y)$	$\wedge E$ 3
5	$K(a)$	$\wedge E$ 4
6	$\forall y(K(y) \rightarrow a = y)$	$\wedge E$ 4
7	$K(d) \rightarrow a = d$	$\forall E$ 6
8	$a = d$	$\rightarrow E$ 7, 2
9	$B(a)$	$\wedge E$ 3
10	$B(d)$	$=E$ 8, 9
11	$B(d)$	$\exists E$ 1, 3–10

10.  $\vdash P(a) \rightarrow \forall x(P(x) \vee \neg x = a)$

1	$P(a)$	
2	$b = a$	
3	$P(b)$	$=E$ 2, 1
4	$P(b) \vee \neg b = a$	$\vee I$ 3
5	$\neg b = a$	
6	$P(b) \vee \neg b = a$	$\vee I$ 5
7	$P(b) \vee \neg b = a$	$LEM$ 2–4, 5–6
8	$\forall x(P(x) \vee \neg x = a)$	$\forall I$ 7
9	$P(a) \rightarrow \forall x(P(x) \vee \neg x = a)$	$\rightarrow I$ 1–8

**B.** Show that the following are provably equivalent:

- $\exists x([F(x) \wedge \forall y(F(y) \rightarrow x = y)] \wedge x = n)$
- $F(n) \wedge \forall y(F(y) \rightarrow n = y)$

And hence that both have a decent claim to symbolize the English sentence ‘Nick is the F’.

**In one direction:**

1	$\exists x([F(x) \wedge \forall y(F(y) \rightarrow x = y)] \wedge x = n)$	
2	$[F(a) \wedge \forall y(F(y) \rightarrow a = y)] \wedge a = n$	
3	$a = n$	$\wedge E$ 2
4	$F(a) \wedge \forall y(F(y) \rightarrow a = y)$	$\wedge E$ 2
5	$F(a)$	$\wedge E$ 4
6	$F(n)$	$=E$ 3, 5
7	$\forall y(F(y) \rightarrow a = y)$	$\wedge E$ 4
8	$\forall y(F(y) \rightarrow n = y)$	$=E$ 3, 7
9	$F(n) \wedge \forall y(F(y) \rightarrow n = y)$	$\wedge I$ 6, 8
10	$F(n) \wedge \forall y(F(y) \rightarrow n = y)$	$\exists E$ 1, 2–9

And now in the other:

1	$F(n) \wedge \forall y(F(y) \rightarrow n = y)$	
2	$n = n$	$=I$
3	$[F(n) \wedge \forall y(F(y) \rightarrow n = y)] \wedge n = n$	$\wedge I$ 1, 2
4	$\exists x([F(x) \wedge \forall y(F(y) \rightarrow x = y)] \wedge x = n)$	$\exists I$ 3

**C.** In §25, we claimed that the following are logically equivalent symbolizations of the English sentence ‘there is exactly one F’:

- $\exists x F(x) \wedge \forall x \forall y [(F(x) \wedge F(y)) \rightarrow x = y]$
- $\exists x [F(x) \wedge \forall y (F(y) \rightarrow x = y)]$
- $\exists x \forall y (F(y) \leftrightarrow x = y)$

Show that they are all provably equivalent. (*Hint:* to show that three claims are provably equivalent, it suffices to show that the first proves the second, the second proves the third and the third proves the first; think about why.)

It suffices to show that the first proves the second, the second proves the third and the third proves the first, for we can then show that any of them prove any others, just by chaining the proofs together (numbering lines, where necessary. Armed with this, we start on the first proof:

1	$\exists x F(x) \wedge \forall x \forall y [(F(x) \wedge F(y)) \rightarrow x = y]$	
2	$\exists x F(x)$	$\wedge E$ 1
3	$\forall x \forall y [(F(x) \wedge F(y)) \rightarrow x = y]$	$\wedge E$ 1
4	$F(a)$	
5	$\forall y [(F(a) \wedge F(y)) \rightarrow a = y]$	$\forall E$ 3
6	$(F(a) \wedge F(b)) \rightarrow a = b$	$\forall E$ 5
7	$F(b)$	
8	$F(a) \wedge F(b)$	$\wedge I$ 4, 7
9	$a = b$	$\rightarrow E$ 6, 8
10	$F(b) \rightarrow a = b$	$\rightarrow I$ 7–9
11	$\forall y (F(y) \rightarrow a = y)$	$\forall I$ 10
12	$F(a) \wedge \forall y (F(y) \rightarrow a = y)$	$\wedge I$ 4, 11
13	$\exists x [F(x) \wedge \forall y (F(y) \rightarrow x = y)]$	$\exists I$ 12
14	$\exists x [F(x) \wedge \forall y (F(y) \rightarrow x = y)]$	$\exists E$ 2, 4–13

Now for the second proof:

1	$\exists x[F(x) \wedge \forall y(F(y) \rightarrow x = y)]$	
2	$F(a) \wedge \forall y(F(y) \rightarrow a = y)$	
3	$F(a)$	$\wedge E$ 2
4	$\forall y(F(y) \rightarrow a = y)$	$\wedge E$ 2
5	$F(b)$	
6	$F(b) \rightarrow a = b$	$\forall E$ 4
7	$a = b$	$\rightarrow E$ 6, 5
8	$a = b$	
9	$F(b)$	$=E$ 8, 3
10	$F(b) \leftrightarrow a = b$	$\leftrightarrow I$ 5–7, 8–9
11	$\forall y(F(y) \leftrightarrow a = y)$	$\forall I$ 10
12	$\exists x \forall y(F(y) \leftrightarrow x = y)$	$\exists I$ 11
13	$\exists x \forall y(F(y) \leftrightarrow x = y)$	$\exists E$ 1, 2–12

And finally, the third proof:

1	$\exists x \forall y (F(y) \leftrightarrow x = y)$	
2	$\forall y (F(y) \leftrightarrow a = y)$	
3	$F(a) \leftrightarrow a = a$	$\forall E$ 2
4	$a = a$	$=I$
5	$F(a)$	$\leftrightarrow E$ 3, 4
6	$\exists x F(x)$	$\exists I$ 5
7	$F(b) \wedge F(c)$	
8	$F(b)$	$\wedge E$ 7
9	$F(b) \leftrightarrow a = b$	$\forall E$ 2
10	$a = b$	$\leftrightarrow E$ 9, 8
11	$F(c)$	$\wedge E$ 7
12	$F(c) \leftrightarrow a = c$	$\forall E$ 2
13	$a = c$	$\leftrightarrow E$ 12, 11
14	$b = c$	$=E$ 10, 13
15	$(F(b) \wedge F(c)) \rightarrow b = c$	$\rightarrow I$ 8–14
16	$\forall y [(F(b) \wedge F(y)) \rightarrow b = y]$	$\forall I$ 15
17	$\forall x \forall y [(F(x) \wedge F(y)) \rightarrow x = y]$	$\forall I$ 16
18	$\exists x F(x) \wedge \forall x \forall y [(F(x) \wedge F(y)) \rightarrow x = y]$	$\wedge I$ 6, 17
19	$\exists x F(x) \wedge \forall x \forall y [(F(x) \wedge F(y)) \rightarrow x = y]$	$\exists E$ 1, 2–18

**D.** Symbolize the following argument

There is exactly one F. There is exactly one G. Nothing is both F and G. So: there are exactly two things that are either F or G.

And offer a proof of it.

1.  $\exists x [F(x) \wedge \forall y (F(y) \rightarrow x = y)]$
  2.  $\exists x [G(x) \wedge \forall y (G(y) \rightarrow x = y)]$
  3.  $\forall x (\neg F(x) \vee \neg G(x)) \therefore$
- $\therefore \exists x \exists y [\neg x = y \wedge \forall z ((F(z) \vee G(z)) \rightarrow (x = z \vee y = z))]$



1	$\exists x[F(x) \wedge \forall y(F(y) \rightarrow x = y)]$	
2	$\exists x[G(x) \wedge \forall y(G(y) \rightarrow x = y)]$	
3	$\forall x(\neg F(x) \vee \neg G(x))$	
4	<u><math>F(a) \wedge \forall y(F(y) \rightarrow a = y)</math></u>	
5	$F(a)$	$\wedge E$ 4
6	$\forall y(F(y) \rightarrow a = y)$	$\wedge E$ 4
7	$\neg F(a) \vee \neg G(a)$	$\vee E$ 3
8	$\neg G(a)$	DS 7, 5
9	<u><math>G(b) \wedge \forall y(G(y) \rightarrow b = y)</math></u>	
10	$G(b)$	$\wedge E$ 9
11	$\forall y(G(y) \rightarrow b = y)$	$\wedge E$ 9
12	<u><math>a = b</math></u>	
13	$G(a)$	$=E$ 12, 10
14	$\perp$	$\neg E$ 13, 8
15	$\neg a = b$	$\neg I$ 12–14
16	<u><math>F(c) \vee G(c)</math></u>	
17	<u><math>F(c)</math></u>	
18	$F(c) \rightarrow a = c$	$\vee E$ 6
19	$a = c$	$\rightarrow E$ 18, 17
20	$a = c \vee b = c$	$\vee I$ 19
21	<u><math>G(c)</math></u>	
22	$G(c) \rightarrow b = c$	$\vee E$ 11
23	$b = c$	$\rightarrow E$ 22, 21
24	$a = c \vee b = c$	$\vee I$ 23
25	$a = c \vee b = c$	$\vee E$ 16, 17–20, 21–
26	$(F(c) \vee G(c)) \rightarrow (a = c \vee b = c)$	$\rightarrow I$ 16–25
27	$\forall z((F(z) \vee G(z)) \rightarrow (a = z \vee b = z))$	$\forall I$ 26
28	$\neg a = b \wedge \forall z((F(z) \vee G(z)) \rightarrow (a = z \vee b = z))$	$\wedge I$ 15, 27
29	$\exists y[\neg a = y \wedge \forall z((F(z) \vee G(z)) \rightarrow (a = z \vee y = z))]$	$\exists I$ 28
30	$\exists x \exists y[\neg x = y \wedge \forall z((F(z) \vee G(z)) \rightarrow (x = z \vee y = z))]$	$\exists I$ 29

## CHAPTER 38

# *Derived rules*

**A.** Offer proofs which justify the addition of the second and fourth CQ rules as derived rules.

Justification for the second rule:

1		$\neg\exists x A(x)$	
2			$A(a)$
3			$\exists x A(x)$ $\exists I$ 2
4			$\perp$ $\neg E$ 3, 1
5		$\neg A(a)$	$\neg I$ 2-4
6		$\forall x\neg A(x)$	$\forall I$ 5

The fourth rule is harder to justify. Here is a proof that is relatively straightforward, but uses the derived rule DNE:



1	$\neg\forall x A(x)$	
2	$\neg\exists x\neg A(x)$	
3	$\neg A(a)$	
4	$\exists x\neg A(x)$	$\exists I$ 3
5	$\perp$	$\neg E$ 4, 2
6	$\neg\neg A(a)$	$\neg I$ 3–5
7	$A(a)$	DNE 6
8	$\forall x A(x)$	$\forall I$ 7
9	$\perp$	$\neg E$ 8, 1
10	$\neg\neg\exists x\neg A(x)$	$\neg I$ 2–9
11	$\exists x\neg A(x)$	DNE 10

And here is a proof that does not use any derived rules:

1	$\neg\forall x A(x)$	
2	$\exists x\neg A(x)$	
3	$\exists x\neg A(x) \wedge \exists x\neg A(x)$	$\wedge I$ 2
4	$\exists x\neg A(x)$	$\wedge E$ 3
5	$\neg\exists x\neg A(x)$	
6	$A(b)$	
7	$A(b) \wedge A(b)$	$\wedge I$ 6
8	$A(b)$	$\wedge E$ 7
9	$\neg A(b)$	
10	$\exists x\neg A(x)$	$\exists I$ 9
11	$\perp$	$\neg E$ 10, 5
12	$A(b)$	X 11
13	$A(b)$	LEM 6–8, 9–12
14	$\forall x A(x)$	$\forall I$ 13
15	$\perp$	$\neg E$ 14, 1
16	$\exists x\neg A(x)$	X 15
17	$\exists x\neg A(x)$	LEM 2–4, 5–16

## CHAPTER 41

# *Natural deduction for ML*

A. Provide proofs for all of the following:

1.  $\Box(A \wedge B) \vdash_{\mathbf{K}} \Box A \wedge \Box B$

1	$\Box(A \wedge B)$	
	$\Box$	
2	$A \wedge B$	$\Box E$ 1
3	$A$	$\wedge E$ 3
4	$\Box A$	$\Box I$ 3–4
	$\Box$	
5	$A \wedge B$	$\Box E$ 1
6	$B$	$\wedge E$ 7
7	$\Box B$	$\Box I$ 6–8
8	$\Box A \wedge \Box B$	$\wedge I$ 5, 9

2.  $\Box A \wedge \Box B \vdash_{\mathbf{K}} \Box(A \wedge B)$

1	$\Box A \wedge \Box B$	
2	$\Box A$	$\wedge E$ 1
3	$\Box B$	$\wedge E$ 1
	$\Box$	
4	$A$	$\Box E$ 2
5	$B$	$\Box E$ 3
6	$A \wedge B$	$\wedge I$ 5, 6
7	$\Box(A \wedge B)$	$\Box I$ 4–7

3.  $\Box A \vee \Box B \vdash_{\mathbf{K}} \Box(A \vee B)$

1	$\Box A \vee \Box B$	
	$\Box A$	
2		
3	$\Box$	
4	$A$	$\Box E$ 2
5	$A \vee B$	$\vee I$ 4
6	$\Box(A \vee B)$	$\Box I$ 3–5
7	$\Box B$	
8		
9	$\Box$	
10	$B$	$\Box E$ 7
11	$A \vee B$	$\vee I$ 9
12	$\Box(A \vee B)$	$\Box I$ 8–10
13	$\Box(A \vee B)$	$\vee E$ 1, 2–6, 7–11

4.  $\Box(A \leftrightarrow B) \vdash_{\mathbf{K}} \Box A \leftrightarrow \Box B$

1		$\Box(A \leftrightarrow B)$	
2			
3			
4			$A \leftrightarrow B$ $\Box E$ 1
5			$A$ $\Box E$ 2
6			$B$ $\leftrightarrow E$ 4, 5
7			$\Box B$ $\Box I$ 3–6
8			
9			
10			$A \leftrightarrow B$ $\Box E$ 1
11			$B$ $\Box E$ 8
12			$A$ $\leftrightarrow E$ 10, 11
13			$\Box A$ $\Box I$ 9–12
14		$\Box A \leftrightarrow \Box B$	$\leftrightarrow I$ 2–7, 8–13

**B.** Provide proofs for the following (without using Modal Conversion!):

1.  $\neg\Box A \vdash_{\mathbf{K}} \Diamond\neg A$ 

1	$\neg\Box A$	
2	$\Box\neg\neg A$	
3	$\Box$	
4	$\neg\neg A$	$\Box E$ 2
5	$A$	DNE 4
6	$\Box A$	$\Box I$ 3–5
7	$\perp$	$\neg E$ 1, 6
8	$\neg\Box\neg\neg A$	$\neg I$ 2–6
9	$\Diamond\neg A$	Def $\Diamond$ 8

2.  $\Diamond\neg A \vdash_{\mathbf{K}} \neg\Box A$ 

1	$\Diamond\neg A$	
2	$\neg\Box\neg\neg A$	Def $\Diamond$ 1
3	$\Box A$	
4	$\Box$	
5	$\neg A$	
6	$A$	$\Box E$ 3
7	$\perp$	$\neg E$ 5, 6
8	$\neg\neg A$	$\neg I$ 5–7
9	$\Box\neg\neg A$	$\Box I$ 4–8
10	$\perp$	$\negE$ 2, 9
11	$\neg\Box A$	$\neg I$ 3–10

3.  $\neg\Diamond A \vdash_{\mathbf{K}} \Box\neg A$

1		$\neg\Diamond A$	
2		$\neg\Box\neg A$	
3		$\Diamond A$	Def $\Diamond$ 2
4		$\perp$	$\neg E$ 1, 3
5		$\neg\neg\Box\neg A$	$\neg I$ 2-4
6		$\Box\neg A$	DNE 5

4.  $\Box\neg A \vdash_{\mathbf{K}} \neg\Diamond A$

1		$\Box\neg A$	
2		$\Diamond A$	
3		$\neg\Box\neg A$	Def $\Diamond$ 2
4		$\perp$	$\neg E$ 1, 3
5		$\neg\Diamond A$	$\neg I$ 2-4

**C.** Provide proofs of the following (and now feel free to use Modal Conversion!):



1.  $\Box(A \rightarrow B), \Diamond A \vdash_{\mathbf{K}} \Diamond B$

1	$\Box(A \rightarrow B)$																	
2	$\Diamond A$																	
	<hr style="width: 100%;"/>																	
3	$\neg\Box\neg A$	Def $\Diamond$ 2																
4	<table style="border-collapse: collapse; margin-left: 10px;"> <tr> <td style="border-left: 1px solid black; padding-left: 10px;"><math>\Box\neg B</math></td> <td></td> </tr> <tr> <td style="border-left: 1px solid black; padding-left: 10px;"><hr style="width: 100%;"/></td> <td></td> </tr> <tr> <td style="border-left: 1px solid black; padding-left: 10px;"> <table style="border-collapse: collapse; margin-left: 10px;"> <tr> <td style="border-left: 1px solid black; padding-left: 10px;"><math>\Box</math></td> <td></td> </tr> <tr> <td style="border-left: 1px solid black; padding-left: 10px;"><hr style="width: 100%;"/></td> <td></td> </tr> <tr> <td style="border-left: 1px solid black; padding-left: 10px;"><math>A \rightarrow B</math></td> <td><math>\Box E</math> 1</td> </tr> <tr> <td style="border-left: 1px solid black; padding-left: 10px;"><math>\neg B</math></td> <td><math>\Box E</math> 4</td> </tr> <tr> <td style="border-left: 1px solid black; padding-left: 10px;"><math>\neg A</math></td> <td>MT 5, 6</td> </tr> </table> </td> <td></td> </tr> </table>	$\Box\neg B$		<hr style="width: 100%;"/>		<table style="border-collapse: collapse; margin-left: 10px;"> <tr> <td style="border-left: 1px solid black; padding-left: 10px;"><math>\Box</math></td> <td></td> </tr> <tr> <td style="border-left: 1px solid black; padding-left: 10px;"><hr style="width: 100%;"/></td> <td></td> </tr> <tr> <td style="border-left: 1px solid black; padding-left: 10px;"><math>A \rightarrow B</math></td> <td><math>\Box E</math> 1</td> </tr> <tr> <td style="border-left: 1px solid black; padding-left: 10px;"><math>\neg B</math></td> <td><math>\Box E</math> 4</td> </tr> <tr> <td style="border-left: 1px solid black; padding-left: 10px;"><math>\neg A</math></td> <td>MT 5, 6</td> </tr> </table>	$\Box$		<hr style="width: 100%;"/>		$A \rightarrow B$	$\Box E$ 1	$\neg B$	$\Box E$ 4	$\neg A$	MT 5, 6		
$\Box\neg B$																		
<hr style="width: 100%;"/>																		
<table style="border-collapse: collapse; margin-left: 10px;"> <tr> <td style="border-left: 1px solid black; padding-left: 10px;"><math>\Box</math></td> <td></td> </tr> <tr> <td style="border-left: 1px solid black; padding-left: 10px;"><hr style="width: 100%;"/></td> <td></td> </tr> <tr> <td style="border-left: 1px solid black; padding-left: 10px;"><math>A \rightarrow B</math></td> <td><math>\Box E</math> 1</td> </tr> <tr> <td style="border-left: 1px solid black; padding-left: 10px;"><math>\neg B</math></td> <td><math>\Box E</math> 4</td> </tr> <tr> <td style="border-left: 1px solid black; padding-left: 10px;"><math>\neg A</math></td> <td>MT 5, 6</td> </tr> </table>	$\Box$		<hr style="width: 100%;"/>		$A \rightarrow B$	$\Box E$ 1	$\neg B$	$\Box E$ 4	$\neg A$	MT 5, 6								
$\Box$																		
<hr style="width: 100%;"/>																		
$A \rightarrow B$	$\Box E$ 1																	
$\neg B$	$\Box E$ 4																	
$\neg A$	MT 5, 6																	
9	$\Box\neg A$	$\Box I$ 5–8																
10	$\perp$	$\neg E$ 3, 9																
11	$\neg\Box\neg B$	$\neg I$ 4–10																
12	$\Diamond B$	Def $\Diamond$ 11																

2.  $\Box A \vdash_{\mathbf{K}} \neg\Diamond\neg A$

1	$\Box A$							
	<hr style="width: 100%;"/>							
2	<table style="border-collapse: collapse; margin-left: 10px;"> <tr> <td style="border-left: 1px solid black; padding-left: 10px;"><math>\Diamond\neg A</math></td> <td></td> </tr> <tr> <td style="border-left: 1px solid black; padding-left: 10px;"><hr style="width: 100%;"/></td> <td></td> </tr> <tr> <td style="border-left: 1px solid black; padding-left: 10px;"><math>\neg\Box A</math></td> <td>MC 2</td> </tr> </table>	$\Diamond\neg A$		<hr style="width: 100%;"/>		$\neg\Box A$	MC 2	
$\Diamond\neg A$								
<hr style="width: 100%;"/>								
$\neg\Box A$	MC 2							
4	$\perp$	$\neg E$ 1, 3						
5	$\neg\Diamond\neg A$	$\neg I$ 2–4						

3.  $\neg\Diamond\neg A \vdash_{\mathbf{K}} \Box A$

1	$\neg\Diamond\neg A$	
2	$\Box\neg\neg A$	MC 1
3	$\Box$	
4	$\neg\neg A$	$\Box E$ 2
5	$A$	DNE 4
6	$\Box A$	$\Box I$ 3–5

**D.** Provide proofs for the following:

1.  $P \vdash_{\mathbf{T}} \Diamond P$

1	$P$	
2	$\Box\neg P$	
3	$\neg P$	RT 2
4	$\perp$	$\neg E$ 1, 3
5	$\neg\Box\neg P$	$\neg I$ 2–4
6	$\Diamond P$	Def $\Diamond$ 5

2.  $\vdash_{\mathbf{T}} (A \wedge B) \vee (\neg \Box A \vee \neg \Box B)$

1	$\Box A \wedge \Box B$	
2	$\Box A$	$\wedge E$ 1
3	$\Box B$	$\wedge E$ 1
4	$A$	$RT$ 2
5	$B$	$RT$ 3
6	$A \wedge B$	$\wedge I$ 4, 5
7	$(A \wedge B) \vee (\neg \Box A \vee \neg \Box B)$	$\vee I$ 6
8	$\neg(\Box A \wedge \Box B)$	
9	$\neg \Box A \vee \neg \Box B$	$DeM$ 8
10	$(A \wedge B) \vee (\neg \Box A \vee \neg \Box B)$	$\vee I$ 9
11	$(A \wedge B) \vee (\neg \Box A \vee \neg \Box B)$	$LEM$ 1–7, 8–10

**E.** Provide proofs for the following:

1.  $\Box(\Box A \rightarrow B), \Box(\Box B \rightarrow C), \Box A \vdash_{\mathbf{S4}} \Box \Box C$

1	$\Box(\Box A \rightarrow B)$	
2	$\Box(\Box B \rightarrow C)$	
3	$\Box A$	
4	$\Box$	
5	$\Box A$	R4 3
6	$\Box(\Box A \rightarrow B)$	R4 1
7	$\Box(\Box B \rightarrow C)$	R4 2
8	$\Box$	
9	$\Box A$	R4 5
10	$\Box(\Box A \rightarrow B)$	R4 6
11	$\Box$	
12	$\Box A$	R4 9
13	$\Box A \rightarrow B$	$\Box E$ 10
14	$B$	$\rightarrow E$ 12, 13
15	$\Box B$	$\Box I$ 11–14
16	$\Box B \rightarrow C$	$\Box E$ 7
17	$C$	$\rightarrow E$ 15, 16
18	$\Box C$	$\Box I$ 8–17
19	$\Box \Box C$	$\Box I$ 4–18

2.  $\Box A \vdash_{S4} \Box(\Box A \vee B)$

1	$\Box A$	
2	$\Box$	
3	$\Box A$	R4 1
4	$\Box A \vee B$	$\vee I$ 4
5	$\Box(\Box A \vee B)$	$\Box I$ 2–4

3.  $\Diamond\Diamond A \vdash_{S4} \Diamond A$

1	$\Diamond\Diamond A$	
2	$\Box\neg A$	
3	$\neg\Box\neg\Diamond A$	Def $\Diamond$ 1
4	$\Box$	
5	$\Box\neg A$	R4 2
6	$\neg\Diamond A$	MC 5
7	$\Box\neg\Diamond A$	$\Box I$ 4–6
8	$\perp$	$\neg E$ 3, 7
9	$\neg\Box\neg A$	$\neg I$ 2–8
10	$\Diamond A$	Def $\Diamond$ 9

F. Provide proofs for the following:

1.  $\neg\neg\neg A, \diamond B \vdash_{S5} \Box(\diamond A \wedge \diamond B)$

1	$\neg\neg\neg A$	
2	$\diamond B$	
	<hr style="width: 100%;"/>	
3	$\neg\neg\neg B$	Def $\diamond$ 2
4	<div style="border-left: 1px solid black; padding-left: 10px;"> <math>\Box</math> </div>	
	<hr style="width: 100%;"/>	
5	<div style="border-left: 1px solid black; padding-left: 10px;"><math>\neg\neg\neg A</math></div>	R5 1
6	<div style="border-left: 1px solid black; padding-left: 10px;"><math>\diamond A</math></div>	Def $\diamond$ 5
7	<div style="border-left: 1px solid black; padding-left: 10px;"><math>\neg\neg\neg B</math></div>	R5 3
8	<div style="border-left: 1px solid black; padding-left: 10px;"><math>\diamond B</math></div>	Def $\diamond$ 7
9	<div style="border-left: 1px solid black; padding-left: 10px;"><math>\diamond A \wedge \diamond B</math></div>	$\wedge$ I 6, 8
10	$\Box(\diamond A \wedge \diamond B)$	$\Box$ I 4–9

2.  $A \vdash_{S5} \Box\diamond A$

1	$A$	
	<hr style="width: 100%;"/>	
2	<div style="border-left: 1px solid black; padding-left: 10px;"><math>\Box\neg A</math></div>	
	<hr style="width: 100%;"/>	
3	<div style="border-left: 1px solid black; padding-left: 10px;"><math>\neg A</math></div>	RT 2
4	<div style="border-left: 1px solid black; padding-left: 10px;"><math>\perp</math></div>	$\neg$ E 1, 3
5	$\neg\neg\neg A$	
6	<div style="border-left: 1px solid black; padding-left: 10px;"><math>\Box</math></div>	
	<hr style="width: 100%;"/>	
7	<div style="border-left: 1px solid black; padding-left: 10px;"><math>\neg\neg\neg A</math></div>	R5 5
8	<div style="border-left: 1px solid black; padding-left: 10px;"><math>\diamond A</math></div>	Def $\diamond$ 7
9	$\Box\diamond A$	$\Box$ I 6–8

3.  $\Diamond\Diamond A \vdash_{S5} \Diamond A$ 

1	$\Diamond\Diamond A$	
2	$\neg\Box\neg\Diamond A$	Def $\Diamond$ 1
3	<div style="border-left: 1px solid black; padding-left: 5px;"> <math>\Box</math> </div>	
4	<div style="border-left: 1px solid black; padding-left: 5px;"> <div style="border-left: 1px solid black; padding-left: 5px;"> <math>\Box\neg A</math> </div> </div>	
5	<div style="border-left: 1px solid black; padding-left: 5px;"> <div style="border-left: 1px solid black; padding-left: 5px;"> <div style="border-left: 1px solid black; padding-left: 5px;"> <math>\Box</math> </div> </div> </div>	
6	<div style="border-left: 1px solid black; padding-left: 5px;"> <div style="border-left: 1px solid black; padding-left: 5px;"> <div style="border-left: 1px solid black; padding-left: 5px;"> <div style="border-left: 1px solid black; padding-left: 5px;"> <math>\Diamond A</math> </div> </div> </div> </div>	
7	<div style="border-left: 1px solid black; padding-left: 5px;"> <div style="border-left: 1px solid black; padding-left: 5px;"> <div style="border-left: 1px solid black; padding-left: 5px;"> <div style="border-left: 1px solid black; padding-left: 5px;"> <math>\neg\Box\neg A</math> </div> </div> </div> </div>	Def $\Diamond$ 6
8	<div style="border-left: 1px solid black; padding-left: 5px;"> <div style="border-left: 1px solid black; padding-left: 5px;"> <div style="border-left: 1px solid black; padding-left: 5px;"> <div style="border-left: 1px solid black; padding-left: 5px;"> <math>\Box\neg A</math> </div> </div> </div> </div>	R4 4
9	<div style="border-left: 1px solid black; padding-left: 5px;"> <div style="border-left: 1px solid black; padding-left: 5px;"> <div style="border-left: 1px solid black; padding-left: 5px;"> <div style="border-left: 1px solid black; padding-left: 5px;"> <math>\perp</math> </div> </div> </div> </div>	$\neg E$ 7, 8
10	<div style="border-left: 1px solid black; padding-left: 5px;"> <div style="border-left: 1px solid black; padding-left: 5px;"> <div style="border-left: 1px solid black; padding-left: 5px;"> <math>\neg\Diamond A</math> </div> </div> </div>	$\neg I$ 5–9
11	<div style="border-left: 1px solid black; padding-left: 5px;"> <div style="border-left: 1px solid black; padding-left: 5px;"> <math>\Box\neg\Diamond A</math> </div> </div>	$\Box I$ 5–10
12	<div style="border-left: 1px solid black; padding-left: 5px;"> <div style="border-left: 1px solid black; padding-left: 5px;"> <math>\neg\Box\neg\Diamond A</math> </div> </div>	R5 2
13	<div style="border-left: 1px solid black; padding-left: 5px;"> <div style="border-left: 1px solid black; padding-left: 5px;"> <math>\perp</math> </div> </div>	$\neg E$ 11, 12
14	<div style="border-left: 1px solid black; padding-left: 5px;"> <math>\neg\Box\neg A</math> </div>	$\neg I$ 4–13
15	<div style="border-left: 1px solid black; padding-left: 5px;"> <math>\Diamond A</math> </div>	Def $\Diamond$ 14
16	$\Box\Diamond A$	$\Box I$ 3–15
17	$\Diamond A$	RT 16

## CHAPTER 42

# *Semantics for ML*

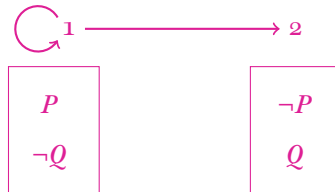
We have presented all of the counter-interpretations diagrammatically. If you would prefer to write them out explicitly, then that would be fine too!

**A.** Present counter-interpretations to the following:

1.  $\neg P \vDash_{\mathbf{K}} \neg \Diamond P$



2.  $\Box(P \vee Q) \vDash_{\mathbf{K}} \Box P \vee \Box Q$




3.  $\vDash_{\mathbf{K}} \neg \Box(A \wedge \neg A)$



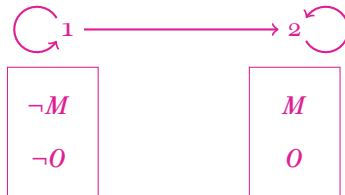


4.  $\Box A \vDash_K A$

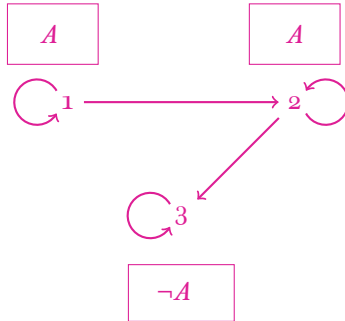


**B.** Present counter-interpretations to the following:

1.  $\Box(M \rightarrow O), \Diamond M \vDash_T O$



2.  $\Box A \vDash_T \Box \Box A$

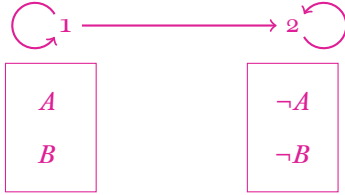


**C.** Present counter-interpretations to the following:

1.  $\Diamond A \vDash_{S_4} \Box \Diamond A$



2.  $\Diamond A, \Box(\Diamond A \rightarrow B) \vDash_{S4} \Box B$



## CHAPTER 43

# *Normal forms*

**A.** Consider the following sentences:

1.  $(A \rightarrow \neg B)$
2.  $\neg(A \leftrightarrow B)$
3.  $(\neg A \vee \neg(A \wedge B))$
4.  $(\neg(A \rightarrow B) \wedge (A \rightarrow C))$
5.  $(\neg(A \vee B) \leftrightarrow ((\neg C \wedge \neg A) \rightarrow \neg B))$
6.  $((\neg(A \wedge \neg B) \rightarrow C) \wedge \neg(A \wedge D))$

For each sentence, find a tautologically equivalent sentence in DNF and one in CNF.